

King Saud University
College of Sciences
Department of Mathematics

M-104
GENERAL MATHEMATICS -2-

CLASS NOTES
DRAFT - 2014

Dr. Tariq A. AlFadhel¹²
Associate Professor
Mathematics Department

¹E-mail : alfadhel@ksu.edu.sa

²URL : <http://faculty.ksu.edu.sa/alfadhel>

TABLE OF CONTENTS

Chapter	Title	Page No.
ONE	Conic Sections	3
	1. Parabola	4
	2. Ellipse	12
	3. Hyperbola	19
TWO	Matrices and Determinants	26
	1. Matrices	27
	2. Determinants	34
THREE	Systems of linear equations	39
	1. Cramer's Rule	41
	2. Gauss elimination method	44
	3. Gauss-Jordan method	47
FOUR	Integration	50
	1. Indefinite integral	51
	2. Integration by substitution	54
	3. Integration by parts	60
	4. Integration of rational functions	63
FIVE	Applications of integraion	68
	1. Area	69
	2. Volume (Disk or washer method)	75
	3. Volume (Cylindrical shells method)	80
SIX	Partial derivatives	84
	1. Functions of several variables	85
	2. Partial derivatives	86
	3. Chain Rules	90
	4. Implicit differentiation	92
SEVEN	Differential equations	93
	1. Definition of a differential equation	94
	2. Separable differential equations	95
	3. First-order linear differential equations	97

CHAPTER ONE

CONIC SECTIONS

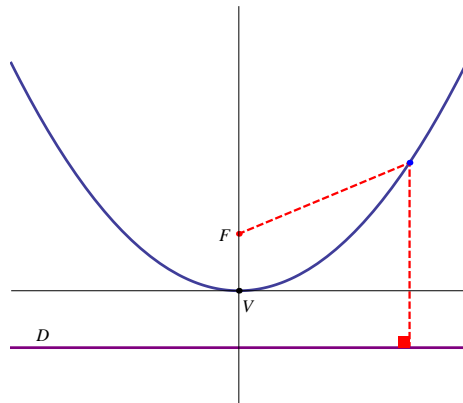
1. Parabola
2. Ellipse
3. Hyperbola

1. Parabola

Definition: A **parabola** is the set of all points in the plane equidistant from a fixed point F (called the **focus**) and a fixed line D (called the **directrix**) in the same plane.

Notes:

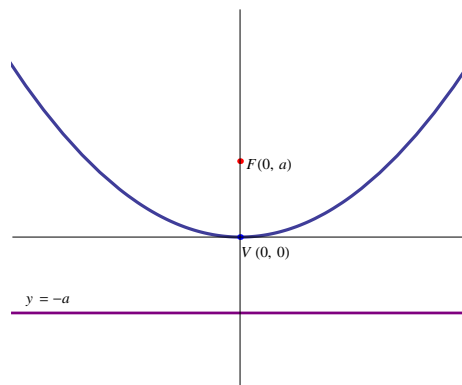
1. The line passing through the focus F and perpendicular to the directrix D is called the **axis** of the parabola .
2. The point half-way from the focus F to the directrix D is called the **vertex** of the parabola and is denoted by V .



1.1 The vertex of the parabola is the origin :

This section discusses the special case where the vertex of the parabola is $(0, 0)$. There are four different cases :

1) $x^2 = 4ay$, where $a > 0$



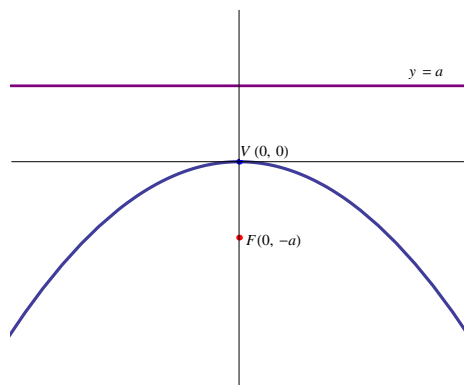
The parabola opens upwards .

The focus is $F(0, a)$.

The equation of the directrix is $y = -a$.

The axis of the parabola is the y-axis .

2) $x^2 = -4ay$, where $a > 0$



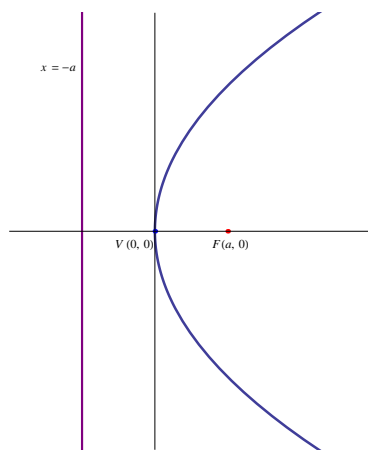
The parabola opens downwards (note the negative sign in the formula).

The focus is $F(0, -a)$.

The equation of the directrix is $y = a$.

The axis of the parabola is the y-axis .

3) $y^2 = 4ax$, where $a > 0$



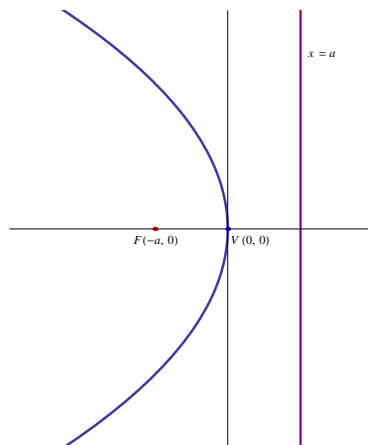
The parabola opens to the right.

The focus is $F(a, 0)$.

The equation of the directrix is $x = -a$.

The axis of the parabola is the x-axis .

4) $y^2 = -4ax$, where $a > 0$



The parabola opens to the left (note the negative sign in the formula) .

The focus is $F(-a, 0)$.

The equation of the directrix is $x = a$.

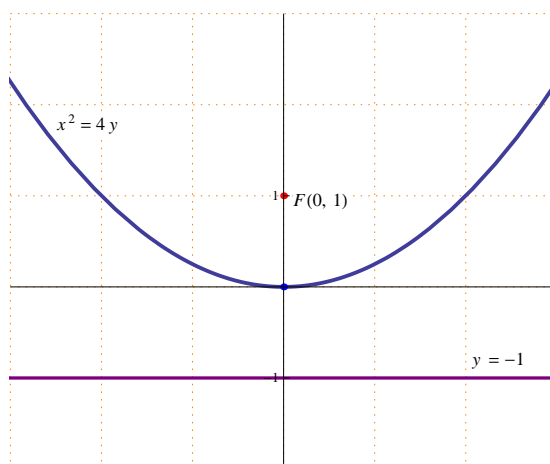
The axis of the parabola is the x-axis .

Example 1: Find the focus and the directrix of the parabola $x^2 = 4y$, and sketch its graph.

Solution: Since the variable x is of degree 2 and the formula contains a positive sign then $x^2 = 4y$ is similar to case(1), where the parabola opens upwards .

$$4a = 4 \Rightarrow a = 1$$

The focus is $F(0,1)$, and the equation of the directrix is $y = -1$.

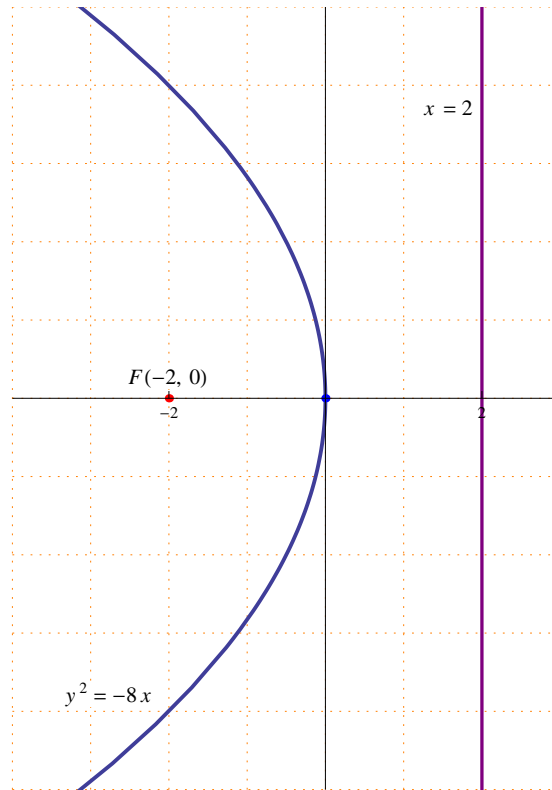


Example 2: Find the focus and the directrix of the parabola $y^2 = -8x$, and sketch its graph.

Solution: Since the variable y is of degree 2 and the formula contains a negative sign then $y^2 = -8x$ is similar to case(4), where the parabola opens to the left .

$$-4a = -8 \Rightarrow a = 2$$

The focus is $F(-2,0)$, and the equation of the directrix is $x = 2$.



1.2 The general formula of a parabola :

This section discusses the general formula of a parabol where the vertex of the parabola is any point $V(h, k)$ in the plane.

There are four different cases :

No.	The general formula	Focus	Directrix	The parabola opens
1	$(x - h)^2 = 4a(y - k)$	$F(h, k + a)$	$y = k - a$	upwards
2	$(x - h)^2 = -4a(y - k)$	$F(h, k - a)$	$y = k + a$	downwards
3	$(y - k)^2 = 4a(x - h)$	$F(h + a, k)$	$x = h - a$	to the right
4	$(y - k)^2 = -4a(x - h)$	$F(h - a, k)$	$x = h + a$	to the left

Example 1: Find the focus and the directrix of the parabola $(x + 1)^2 = -4(y - 1)$, and sketch its graph.

Solution : The equation of the parabola is similar to case (2).

$$(x - h)^2 = (x + 1)^2 = (x - (-1))^2 \Rightarrow h = -1 .$$

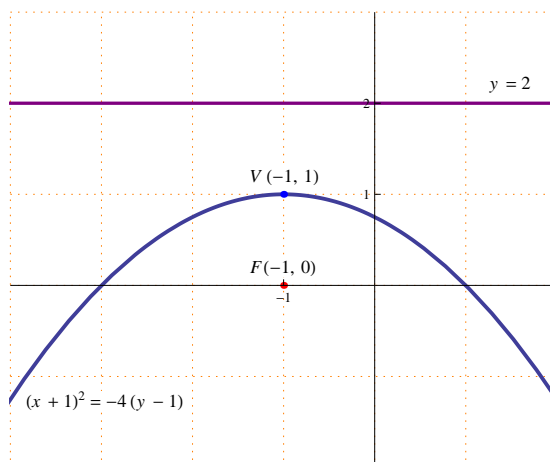
$$(y - k) = (y - 1) \Rightarrow k = 1 .$$

$$-4a = -4 \Rightarrow a = 1 .$$

The vertex is $V(-1, 1)$

The focus is $F(-1, 0)$ and the equation of the directrix is $y = 2$.

The parabola opens downwards (note the negative sign in the formula).



Example 2: Find the focus and the directrix of the parabola $(y - 1)^2 = 8(x + 2)$, and sketch its graph.

Solution : The equation of the parabola is similar to case (3).

$$(y - k)^2 = (y - 1)^2 \Rightarrow k = 1 .$$

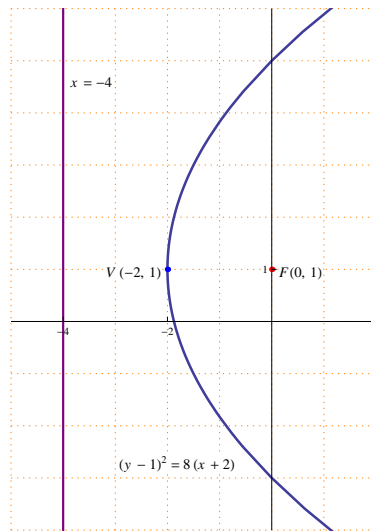
$$(x - h) = (x + 2) = (x - (-2)) \Rightarrow h = -2 .$$

$$4a = 8 \Rightarrow a = 2 .$$

The vertex is $V(-2, 1)$

The focus is $F(0, 1)$ and the equation of the directrix is $x = -4$.

The parabola opens to the right .



Example 3: Find the focus and the directrix of the parabola $2y^2 - 4y + 8x + 10 = 0$, and sketch its graph.

Solution : By completing the square

$$\begin{aligned} 2y^2 - 4y + 8x + 10 = 0 &\Rightarrow 2y^2 - 4y = -8x - 10 \Rightarrow 2(y^2 - 2y) = -8x - 10 \\ &\Rightarrow 2(y^2 - 2y + 1) = -8x - 10 + 2 \Rightarrow 2(y - 1)^2 = -8x - 8 \Rightarrow 2(y - 1)^2 = -8(x + 1) \\ &\Rightarrow (y - 1)^2 = -4(x + 1) \end{aligned}$$

The equation of the parabola is similar to case (4).

$$(y - k)^2 = (y - 1)^2 \Rightarrow k = 1 .$$

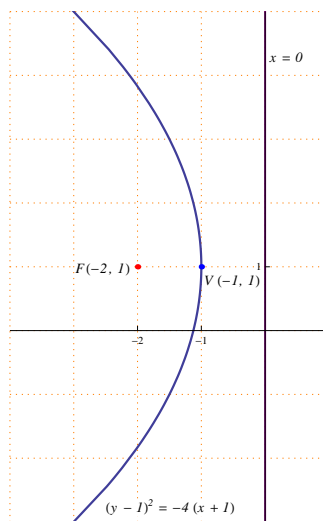
$$(x - h) = (x + 1) = (x - (-1)) \Rightarrow h = -1 .$$

$$-4a = -4 \Rightarrow a = 1 .$$

The vertex is $V(-1, 1)$.

The focus is $F(-2, 1)$ and the equation of the directrix is $x = 0$ (the y-axis).

The parabola opens to the left (note the negative sign in the formula)



Example 4: Find the focus and the directrix of the parabola $x^2 - 6y - 2x = -7$, and sketch its graph.

Solution : By completing the square

$$x^2 - 6y - 2x = -7 \Rightarrow x^2 - 2x = 6y - 7 \Rightarrow x^2 - 2x + 1 = 6y - 7 + 1$$

$$\Rightarrow (x - 1)^2 = 6y - 6 \Rightarrow (x - 1)^2 = 6(y - 1)$$

The equation of the parabola is similar to case (1).

$$(x - h)^2 = 4a(y - k) \Rightarrow h = 1 .$$

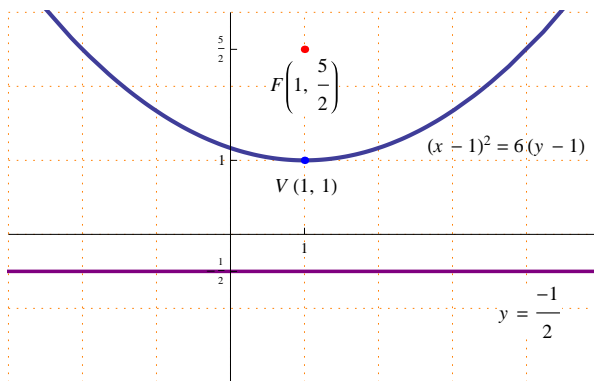
$$(y - k) = (y - 1) \Rightarrow k = 1 .$$

$$4a = 6 \Rightarrow a = \frac{6}{4} = \frac{3}{2} .$$

The vertex is $V(1, 1)$

The focus is $F\left(1, \frac{5}{2}\right)$ and the equation of the directrix is $y = -\frac{1}{2}$.

The parabola opens upwards.



Example 5: Find the equation of the parabola with vertex $V(2, 1)$ and focus $F(2, 3)$ and sketch its graph.

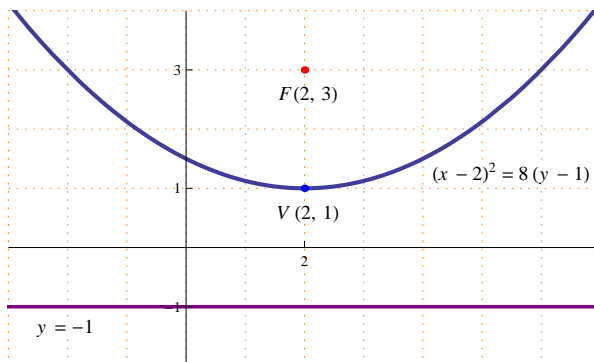
Solution : Since the focus is located upper than the vertex then the parabola opens upwards.

Hence its equation is $(x - h)^2 = 4a(y - k)$.

Since the vertex is $V(2, 1)$ then $h = 2$ and $k = 1$

a equals the distance between $V(2, 1)$ and $F(2, 3)$ which equals 2 .

The equation of the parabola with $V(2, 1)$ and $F(2, 3)$ is $(x - 2)^2 = 8(y - 1)$



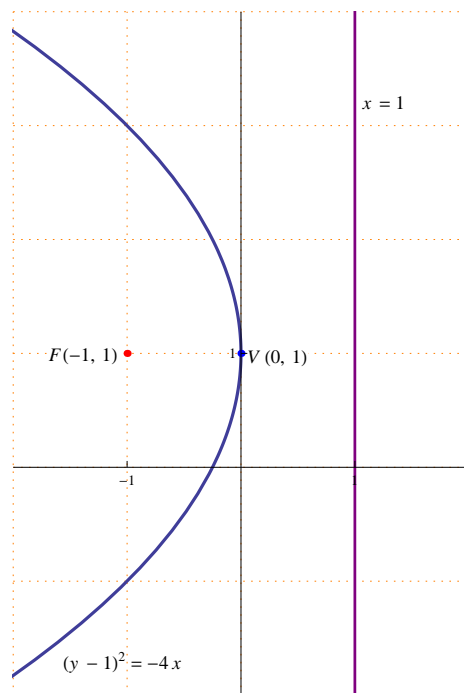
Example 6: Find the equation of the parabola with focus $F(-1, 1)$ and directrix $x = 1$ and sketch its graph.

Solution : Since the focus is located to the left of the directrix then the parabola opens to the left.

Hence its equation is $(y - k)^2 = -4a(x - h)$.

The vertex is half-way between the focus and the directrix , hence $V(0, 1)$
 a equals the distance between $V(0, 1)$ and $F(-1, 1)$ which equals 1 .

The equation of the parabola with $F(-1, 1)$ and directrix $x = 1$ is $(y-1)^2 = -4x$

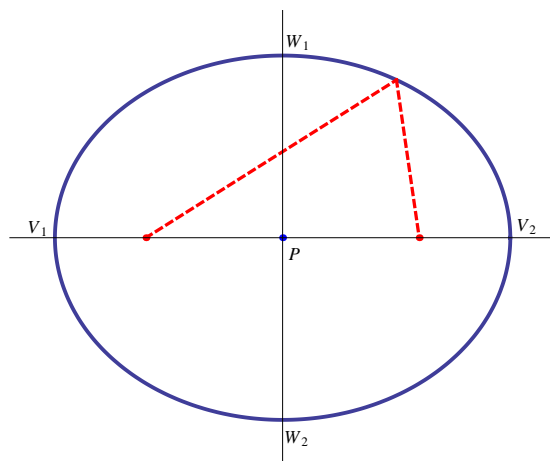


2. Ellipse

Definition: An **ellipse** is the set of all points in the plane for which the sum of the distances to two fixed points is constant.

Notes :

1. The two fixed points are called the **foci** of the ellipse and are denoted by F_1 and F_2 .
2. The midpoint between F_1 and F_2 is called the **center** of the ellipse and is denoted by P .
3. The endpoints of the **major axis** are called the vertices of the ellipse and are denoted by V_1 and V_2 .
4. The endpoints of the **minor axis** are denoted by W_1 and W_2 .



2.1 The center of the ellipse is the origin :

This section discusses the special case where the center of the ellipse is $(0, 0)$. There are two different cases :

1) $\frac{x^2}{a^2} + \frac{y^2}{b^2} = 1$, where $a > b$:

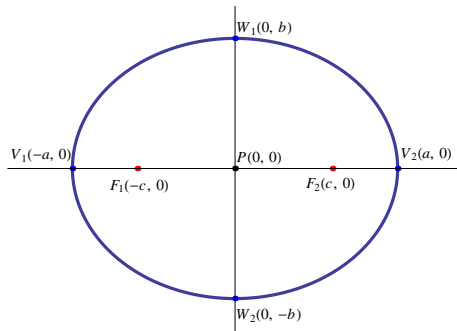
The foci of the ellipse are $F_1(-c, 0)$ and $F_2(c, 0)$, where $c = \sqrt{a^2 - b^2}$.

The vertices of the ellipse are $V_1(-a, 0)$ and $V_2(a, 0)$.

The endpoints of the minor axis are $W_1(0, b)$ and $W_2(0, -b)$.

The major axis lies on the x-axis , and its length is $2a$.

The minor axis lies on the y-axis , and its length is $2b$.



2) $\frac{x^2}{a^2} + \frac{y^2}{b^2} = 1$, where $b > a$:

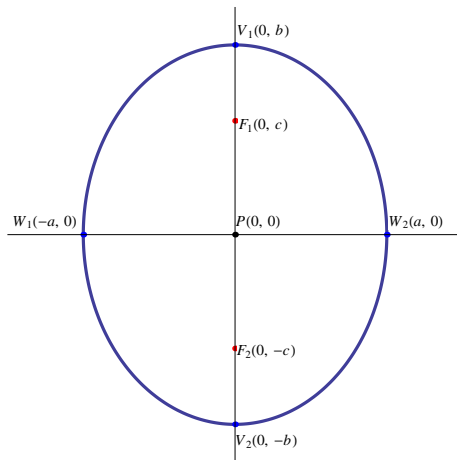
The foci of the ellipse are $F_1(0, c)$ and $F_2(0, -c)$, where $c = \sqrt{b^2 - a^2}$.

The vertices of the ellipse are $V_1(0, b)$ and $V_2(0, -b)$.

The endpoints of the minor axis are $W_1(-a, 0)$ and $W_2(a, 0)$.

The major axis lies on the y-axis , and its length is $2b$.

The minor axis lies on the x-axis , and its length is $2a$.



Example 1: Identify the features of the ellipse $9x^2 + 25y^2 = 225$, and sketch its graph.

Solution : $9x^2 + 25y^2 = 225 \Rightarrow \frac{9x^2}{225} + \frac{25y^2}{225} = 1 \Rightarrow \frac{x^2}{25} + \frac{y^2}{9} = 1$

$a^2 = 25 \Rightarrow a = 5$ and $b^2 = 9 \Rightarrow b = 3$.

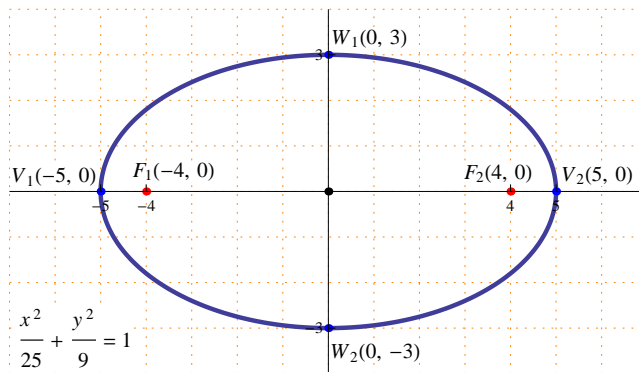
Since $a > b$ then $\frac{x^2}{25} + \frac{y^2}{9} = 1$ is similar to case (1).

$c = \sqrt{a^2 - b^2} = \sqrt{25 - 9} = \sqrt{16} = 4$.

The foci are $F_1(-4, 0)$ and $F_2(4, 0)$.

The vertices are $V_1(-5, 0)$ and $V_2(5, 0)$.

The endpoints of the minor axis are $W_1(0, 3)$ and $W_2(0, -3)$.
 The length of the major axis is $2a = 10$.
 The length of the minor axis is $2b = 6$.



Example 2: Identify the features of the ellipse $16x^2 + 9y^2 = 144$, and sketch its graph.

Solution : $16x^2 + 9y^2 = 144 \Rightarrow \frac{16x^2}{144} + \frac{9y^2}{144} = 1 \Rightarrow \frac{x^2}{9} + \frac{y^2}{16} = 1$

$a^2 = 9 \Rightarrow a = 3$ and $b^2 = 16 \Rightarrow b = 4$.

Since $b > a$ then $\frac{x^2}{9} + \frac{y^2}{16} = 1$ is similar to case (2).

$c^2 = \sqrt{b^2 - a^2} = \sqrt{16 - 9} = \sqrt{7}$.

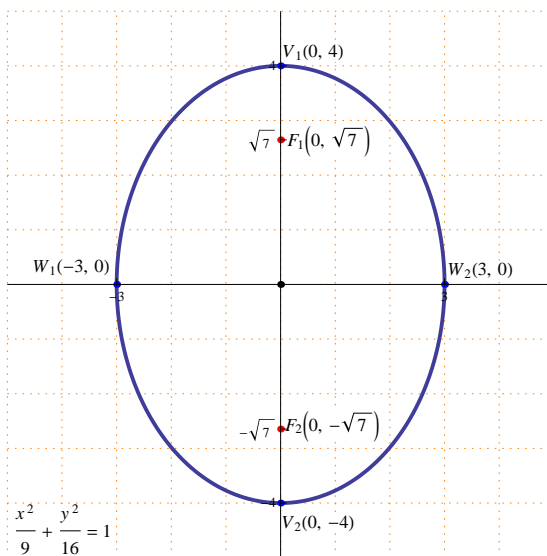
The foci are $F_1(0, \sqrt{7})$ and $F_2(0, -\sqrt{7})$.

The vertices are $V_1(0, 4)$ and $V_2(0, -4)$.

The endpoints of the minor axis are $W_1(-3, 0)$ and $W_2(3, 0)$.

The length of the major axis is $2b = 8$.

The length of the minor axis is $2a = 6$.



2.2 The general formula of an ellipse :

This section discusses the general formula of an ellipse where the center of the ellipse is any point $P(h, k)$ in the plane.

There are two different cases :

No.	The general Formula	The Foci	The Vertices	W_1 and W_2
1	$\frac{(x-h)^2}{a^2} + \frac{(y-k)^2}{b^2} = 1$ ($a > b$) and $c = \sqrt{a^2 - b^2}$	$F_1(h - c, k)$ $F_2(h + c, k)$	$V_1(h - a, k)$ $V_2(h + a, k)$	$W_1(h, k - b)$ $W_2(h, k + b)$
2	$\frac{(x-h)^2}{a^2} + \frac{(y-k)^2}{b^2} = 1$ ($b > a$) and $c = \sqrt{b^2 - a^2}$	$F_1(h, k - c)$ $F_2(h, k + c)$	$V_1(h, k - b)$ $V_2(h, k + b)$	$W_1(h - a, k)$ $W_2(h + a, k)$

Example 1: Find the equation of the ellipse with foci at $(-3, 1)$, $(5, 1)$, and one of its vertices is $(7, 1)$, and sketch its graph.

Solution : The center of the ellipse $P(h, k)$ is located in the middle of the two

foci, hence $(h, k) = \left(\frac{-3 + 5}{2}, \frac{1 + 1}{2} \right) = (1, 1)$.

c is the distance between the center and one of the foci , and it equals to 4 (see the figure).

Since the major axis (where the two foci lie) is parallel to the x-axis , then the general formula of the ellipse is $\frac{(x-h)^2}{a^2} + \frac{(y-k)^2}{b^2} = 1$, where $a > b$.

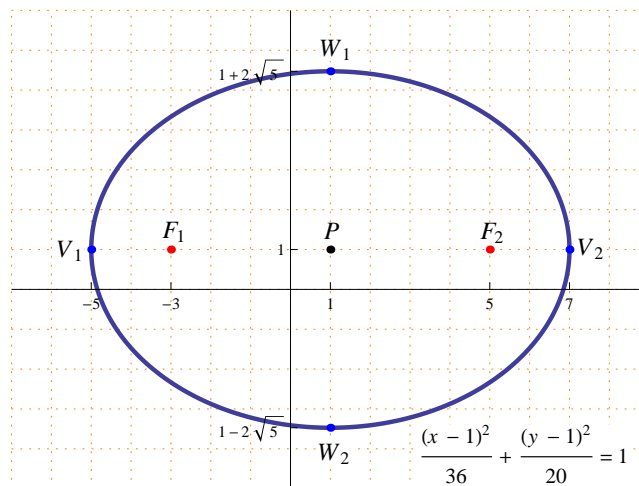
a is the distance between the center and one of the vertices, and it equals 6 (see the figure).

$$c^2 = a^2 - b^2 \Rightarrow (4)^2 = (6)^2 - b^2 \Rightarrow b^2 = 36 - 16 = 20 \Rightarrow b = 2\sqrt{5}.$$

The equation of the ellipse is $\frac{(x-1)^2}{36} + \frac{(y-1)^2}{20} = 1$.

The vertices of the ellipse are $V_1(-5, 1)$ and $V_2(7, 1)$.

The endpoints of the minor axis are $W_1(1, 1 + 2\sqrt{5})$ and $W_2(1, 1 - 2\sqrt{5})$.



Example 2: Find the equation of the ellipse with foci at $(2, 5)$, $(2, -3)$, and the length of its minor axis equals 6, and sketch its graph.

Solution : The center of the ellipse $P(h, k)$ is located in the middle of the two foci, hence $(h, k) = \left(\frac{2+2}{2}, \frac{-3+5}{2}\right) = (2, 1)$.

c is the distance between the center and one of the foci, and it equals to 4 (see the figure).

Since the major axis (where the two foci lie) is parallel to the y -axis, then the general formula of the ellipse is $\frac{(x-h)^2}{a^2} + \frac{(y-k)^2}{b^2} = 1$, where $b > a$.

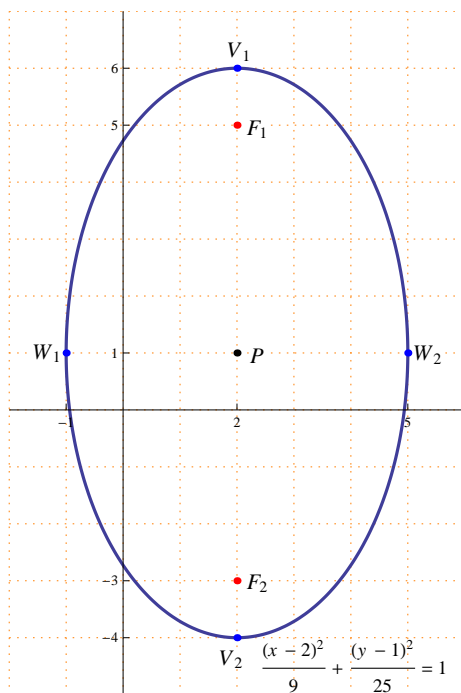
The length of the minor axis is 6 means that $2a = 6 \Rightarrow a = 3$.

$c^2 = b^2 - a^2 \Rightarrow (4)^2 = b^2 - (3)^2 \Rightarrow b^2 = 16 + 9 = 25 \Rightarrow b = 5$.

The equation of the ellipse is $\frac{(x-2)^2}{9} + \frac{(y-1)^2}{25} = 1$.

The vertices of the ellipse are $V_1(2, 6)$ and $V_2(2, -4)$.

The endpoints of the minor axis are $W_1(-1, 1)$ and $W_2(5, 1)$.



Example 3: Find the equation of the ellipse with vertices at $(-1, 4)$, $(-1, -2)$ and the distance between its two foci equals 4, and sketch its graph.

Solution : The center of the ellipse $P(h, k)$ is located in the middle of the two vertices, hence $(h, k) = \left(\frac{-1-1}{2}, \frac{-2+4}{2}\right) = (-1, 1)$.

The distance between the two foci equals 4 means that $2c = 4 \Rightarrow c = 2$.

Since the major axis (where the two vertices lie) is parallel to the y -axis, then the general formula of the ellipse is $\frac{(x-h)^2}{a^2} + \frac{(y-k)^2}{b^2} = 1$, where $b > a$.

The length of the major axis (the distance between the two vertices) equals 6,

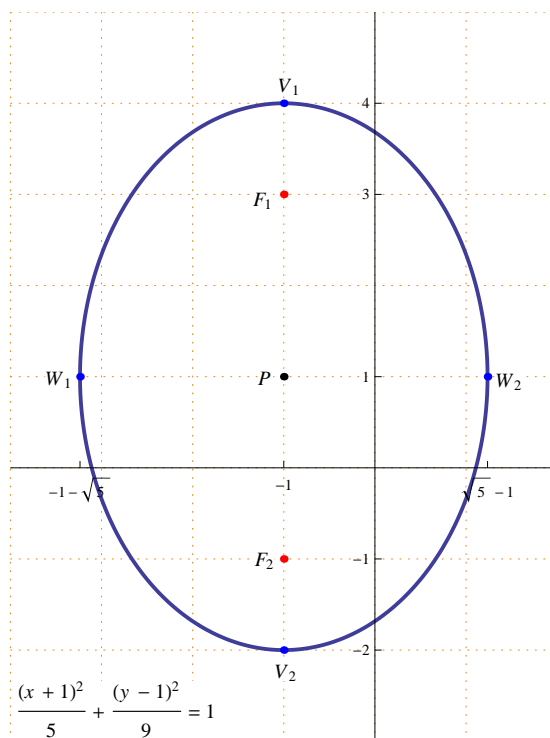
this means $2b = 6 \Rightarrow b = 3$.

$$c^2 = b^2 - a^2 \Rightarrow (2)^2 = (3)^2 - a^2 \Rightarrow a^2 = 9 - 4 = 5 \Rightarrow a = \sqrt{5}.$$

The equation of the ellipse is $\frac{(x+1)^2}{5} + \frac{(y-1)^2}{9} = 1$.

The foci of the ellipse are $F_1(-1, 3)$ and $F_2(-1, -1)$.

The endpoints of the minor axis are $W_1(-1 - \sqrt{5}, 1)$ and $W_2(-1 + \sqrt{5}, 1)$.



Example 4: Identify the features of the ellipse $4x^2 + 2y^2 - 8x - 8y - 20 = 0$, and sketch its graph.

Solution :

$$4x^2 + 2y^2 - 8x - 8y - 20 = 0 \Rightarrow (4x^2 - 8x) + (2y^2 - 8y) = 20$$

$$\Rightarrow 4(x^2 - 2x) + 2(y^2 - 4y) = 20$$

By completing the square

$$4(x^2 - 2x) + 2(y^2 - 4y) = 20 \Rightarrow 4(x^2 - 2x + 1) + 2(y^2 - 4y + 4) = 20 + 12$$

$$\Rightarrow 4(x-1)^2 + 2(y-2)^2 = 32$$

$$\Rightarrow \frac{4(x-1)^2}{32} + \frac{2(y-2)^2}{32} = 1 \Rightarrow \frac{(x-1)^2}{8} + \frac{(y-2)^2}{16} = 1$$

$$b^2 = 16 \Rightarrow b = 4 \text{ and } a^2 = 8 \Rightarrow b = \sqrt{8} = 2\sqrt{2}.$$

$$c^2 = b^2 - a^2 \Rightarrow c^2 = 16 - 8 = 8 \Rightarrow c = \sqrt{8} = 2\sqrt{2}.$$

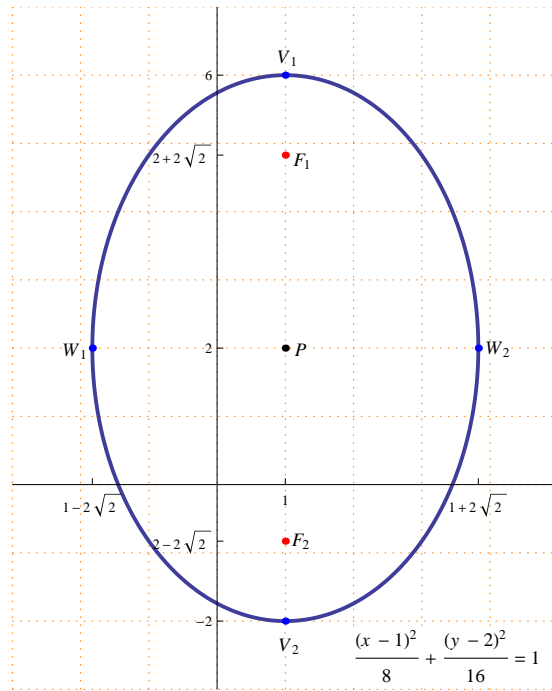
The center of the ellipse is $(1, 2)$.

The foci of the ellipse are $F_1(1, 2 + 2\sqrt{2})$ and $F_2(1, 2 - 2\sqrt{2})$.

The vertices of the ellipse are $V_1(1, 6)$ and $V_2(1, -2)$.

The endpoints of the minor axis are $W_1(1 - 2\sqrt{2}, 2)$ and $W_2(1 + 2\sqrt{2}, 2)$

The length of the major axis is 8 and the length of the minor axis is $2\sqrt{8} = 4\sqrt{2}$.

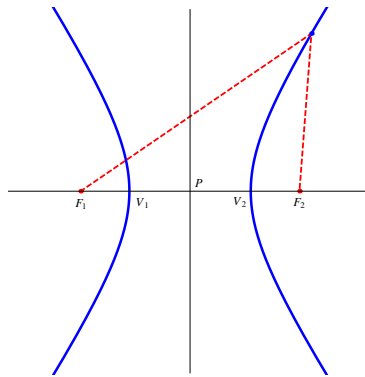


3. Hyperbola

Definition: A **hyperbola** is the set of all points in the plane for which the difference of the distances between two fixed points is constant.

Notes :

1. The two fixed points are called the **foci** of the hyperbola and are denoted by F_1 and F_2 .
2. The midpoint between F_1 and F_2 is called the **center** of the hyperbola and is denoted by P .



3.1 The center of the hyperbola is the origin :

This section discusses the special case where the center of the hyperbola is $(0, 0)$. There are two different cases :

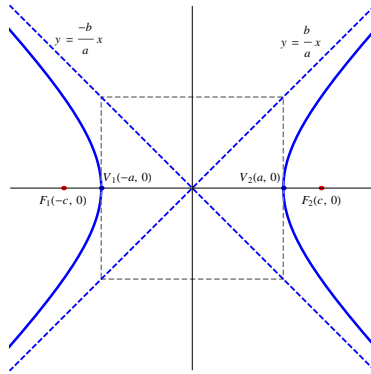
1) $\frac{x^2}{a^2} - \frac{y^2}{b^2} = 1$, where $a > 0$ and $b > 0$:

The foci of the hyperbola are $F_1(-c, 0)$ and $F_2(c, 0)$, where $c = \sqrt{a^2 + b^2}$.

The vertices of the hyperbola are $V_1(-a, 0)$ and $V_2(a, 0)$.

The line segment between V_1 and V_2 is the **transverse axis** , it lies on the x-axis and its length is $2a$.

The equations of the asymptotes are $y = \frac{b}{a}x$ and $y = -\frac{b}{a}x$.



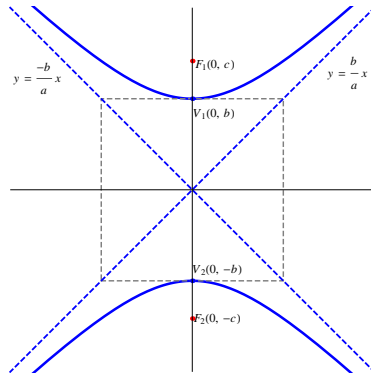
2) $\frac{y^2}{b^2} - \frac{x^2}{a^2} = 1$, where $a > 0$ and $b > 0$:

The foci of the hyperbola are $F_1(0, c)$ and $F_2(0, -c)$, where $c = \sqrt{a^2 + b^2}$.

The vertices of the hyperbola are $V_1(0, b)$ and $V_2(0, -b)$.

The line segment between V_1 and V_2 is the **transverse axis**, it lies on the y-axis and its length is $2b$.

The equations of the asymptotes are $y = \frac{b}{a}x$ and $y = -\frac{b}{a}x$.



Example 1: Identify the features of the hyperbola $4x^2 - 16y^2 = 64$, and sketch its graph.

Solution :

$$4x^2 - 16y^2 = 64 \Rightarrow \frac{4x^2}{64} - \frac{16y^2}{64} = 1 \Rightarrow \frac{x^2}{16} - \frac{y^2}{4} = 1$$

This form is similar to case (1).

$$a^2 = 16 \Rightarrow a = 4 \text{ and } b^2 = 4 \Rightarrow b = 2$$

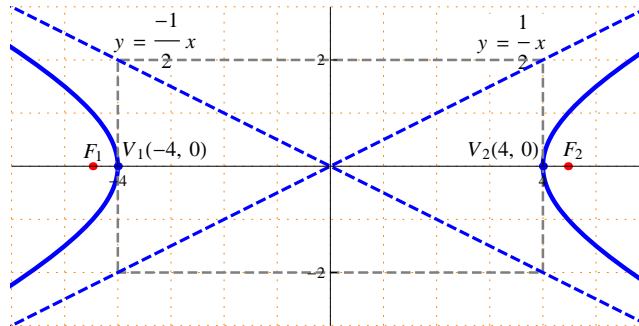
$$c = \sqrt{a^2 + b^2} = \sqrt{4^2 + 2^2} = \sqrt{20} = 2\sqrt{5}$$

The foci of the hyperbola are $F_1(-2\sqrt{5}, 0)$ and $F_2(2\sqrt{5}, 0)$.

The vertices are $V_1(-4, 0)$ and $V_2(4, 0)$.

The transverse axis lies on the x-axis and its length is $2a = 8$.

The equations of the asymptotes are $y = \frac{2}{4}x = \frac{1}{2}x$ and $y = -\frac{2}{4}x = -\frac{1}{2}x$



Example 2: Identify the features of the hyperbola $4y^2 - 9x^2 = 36$, and sketch its graph.

Solution :

$$4y^2 - 9x^2 = 36 \Rightarrow \frac{4y^2}{36} - \frac{9x^2}{36} = 1 \Rightarrow \frac{y^2}{9} - \frac{x^2}{4} = 1$$

This form is similar to case (2).

$$a^2 = 4 \Rightarrow a = 2 \text{ and } b^2 = 9 \Rightarrow b = 3$$

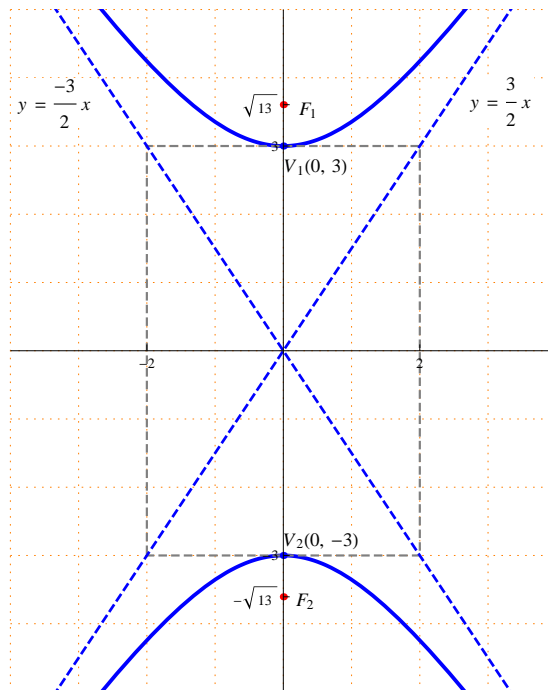
$$c = \sqrt{a^2 + b^2} = \sqrt{2^2 + 3^2} = \sqrt{4 + 9} = \sqrt{13}$$

The foci of the hyperbola are $F_1(0, \sqrt{13})$ and $F_2(0, -\sqrt{13})$.

The vertices are $V_1(0, 3)$ and $V_2(0, -3)$.

The transverse axis lies on the y-axis and its length is $2b = 6$.

The equations of the asymptotes are $y = \frac{3}{2}x$ and $y = -\frac{3}{2}x$



3.2 The general formula of a hyperbola :

This section discusses the general formula of a hyperbola where the center of the hyperbola is any point $P(h, k)$ in the plane.

There are two different cases :

No.	The general Formula	The Foci	The Vertices	Transverse axis
1	$\frac{(x-h)^2}{a^2} - \frac{(y-k)^2}{b^2} = 1$ ($c^2 = a^2 + b^2$)	$F_1(h-c, k)$ $F_2(h+c, k)$	$V_1(h-a, k)$ $V_2(h+a, k)$	parallel to the x-axis
2	$\frac{(y-k)^2}{b^2} - \frac{(x-h)^2}{a^2} = 1$ ($c^2 = a^2 + b^2$)	$F_1(h, k+c)$ $F_2(h, k-c)$	$V_1(h, k+b)$ $V_2(h, k-b)$	parallel to the y-axis

The equations of the asymptotes are $y = \frac{b}{a}(x-h) + k$ and $y = -\frac{b}{a}(x-h) + k$

Example 1: Find the equation of the hyperbola with foci at $(-2, 2)$, $(6, 2)$ and one of its vertices is $(5, 2)$, and sketch its graph.

Solution :

The center of the hyperbola $P(h, k)$ is located in the middle of the two foci ,

hence $(h, k) = \left(\frac{-2+6}{2}, \frac{2+2}{2} \right) = (2, 2)$

Note that the two foci lie on a line parallel to the x-axis , hence the general

formula of the hyperbola is $\frac{(x-h)^2}{a^2} - \frac{(y-k)^2}{b^2} = 1$.

$2c$ is the distance between the two foci , hence $2c = 8 \Rightarrow c = 4$.

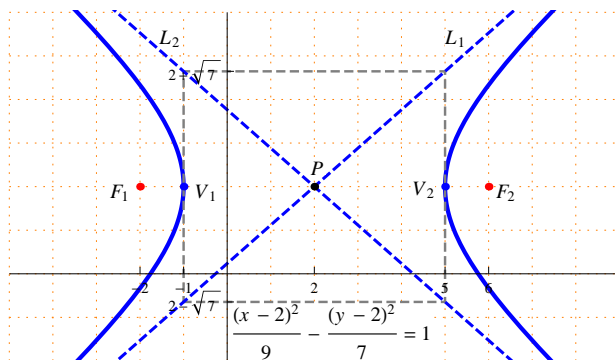
a is the distance between the center $(2, 2)$ and the vertex $(5, 2)$, hence $a = 3$, and the other vertex is $(-1, 2)$.

$c^2 = a^2 + b^2 \Rightarrow 4^2 = 3^2 + b^2 \Rightarrow b^2 = 16 - 9 = 7 \Rightarrow c = \sqrt{7}$.

The equation of the hyperbola is $\frac{(x-2)^2}{9} - \frac{(y-2)^2}{7} = 1$

The equations of the asymptotes are $L_1 : y = \frac{\sqrt{7}}{3}(x-2) + 2$ and

$L_2 : y = -\frac{\sqrt{7}}{3}(x-2) + 2$



Example 2: Find the equation of the hyperbola with foci at $(-1, -6)$, $(-1, 4)$ and the length of its transverse axis is 8 , and sketch its graph.

Solution :

The center of the hyperbola $P(h, k)$ is located in the middle of the two foci , hence $(h, k) = \left(\frac{-1-1}{2}, \frac{-6+4}{2} \right) = (-1, -1)$

Note that the two foci lie on a line parallel to the y-axis , hence the general formula of the hyperbola is $\frac{(y-k)^2}{b^2} - \frac{(x-h)^2}{a^2} = 1$.

$2c$ is the distance between the two foci , hence $2c = 10 \Rightarrow c = 5$.

The length of the transverse axis is 8 , this means $2b = 8 \Rightarrow b = 4$.

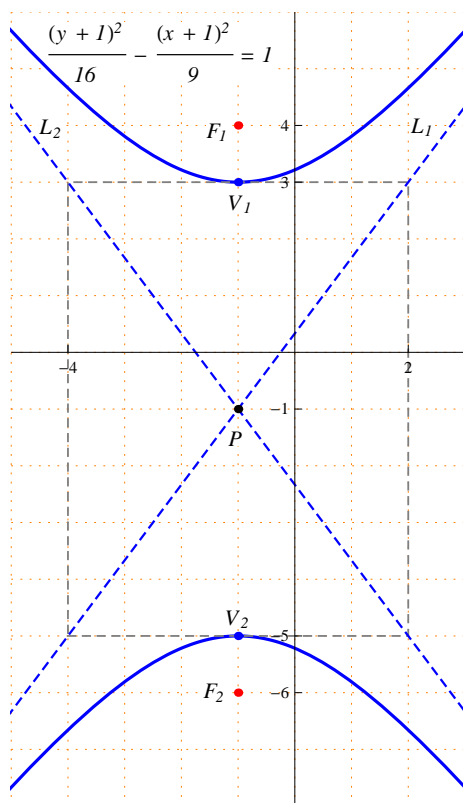
The vertices are $(-1, -5)$ and $(-1, 3)$.

$c^2 = a^2 + b^2 \Rightarrow 5^2 = a^2 + 4^2 \Rightarrow a^2 = 25 - 16 = 9 \Rightarrow a = 3$.

The equation of the hyperbola is $\frac{(y+1)^2}{16} - \frac{(x+1)^2}{9} = 1$.

The equations of the asymptotes are $L_1 : y = \frac{4}{3}(x+1) - 1$ and

$L_2 : y = -\frac{4}{3}(x+1) - 1$



Example 3: Find the equation of the hyperbola with center at $(1, 1)$, one of its foci is $(5, 1)$ and one of its vertices is $(-1, 1)$, and sketch its graph.

Solution :

Since the center and the focus lie on a line parallel to the x-axis , then the

general formula of the hyperbola is $\frac{(x-h)^2}{a^2} - \frac{(y-k)^2}{b^2} = 1$.

c is the distance between the center $(1, 1)$ and the focus $(5, 1)$, hence $c = 4$, the other foci is $(-3, 1)$.

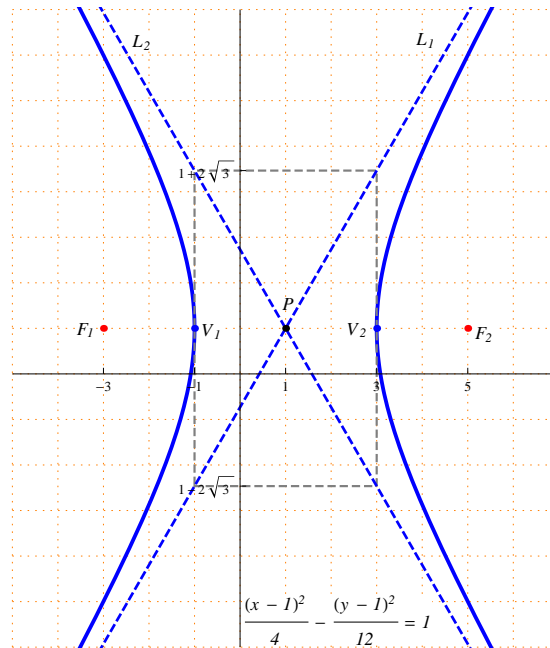
a is the distance between the center $(1, 1)$ and the vertex $(-1, 1)$, hence $a = 2$, the other vertex is $(3, 1)$.

$$c^2 = a^2 + b^2 \Rightarrow 4^2 = 2^2 + b^2 \Rightarrow b^2 = 16 - 4 = 12 \Rightarrow b = \sqrt{12} = 2\sqrt{3}$$

The equation of the hyperbola is $\frac{(x-1)^2}{4} - \frac{(y-1)^2}{12} = 1$.

The equations of the asymptotes are

$$L_1 : y = \frac{2\sqrt{3}}{2}(x-1) + 1 = \sqrt{3}(x-1) + 1 \text{ and } L_2 : y = -\sqrt{3}(x-1) + 1$$



Example 4: Identify the features of the hyperbola $2y^2 - 4x^2 - 4y - 8x - 34 = 0$, and sketch its graph.

Solution :

$$2y^2 - 4x^2 - 4y - 8x - 34 = 0 \Rightarrow (2y^2 - 4y) - (4x^2 + 8x) = 34$$

$$\Rightarrow 2(y^2 - 2y) - 4(x^2 + 2x) = 34$$

$$\Rightarrow 2(y^2 - 2y + 1) - 4(x^2 + 2x + 1) = 34 + 2 - 4 \Rightarrow 2(y-1)^2 - 4(x+1)^2 = 32$$

$$\Rightarrow \frac{2(y-1)^2}{32} - \frac{4(x+1)^2}{32} = 1 \Rightarrow \frac{(y-1)^2}{16} - \frac{(x+1)^2}{8} = 1$$

$$b^2 = 16 \Rightarrow b = 4 \text{ and } a^2 = 8 \Rightarrow a = \sqrt{8} = 2\sqrt{2}.$$

$$c^2 = a^2 + b^2 \Rightarrow c^2 = 16 + 8 = 24 \Rightarrow c = \sqrt{24} = 2\sqrt{6}.$$

The center of the hyperbola is $P(-1, 1)$.

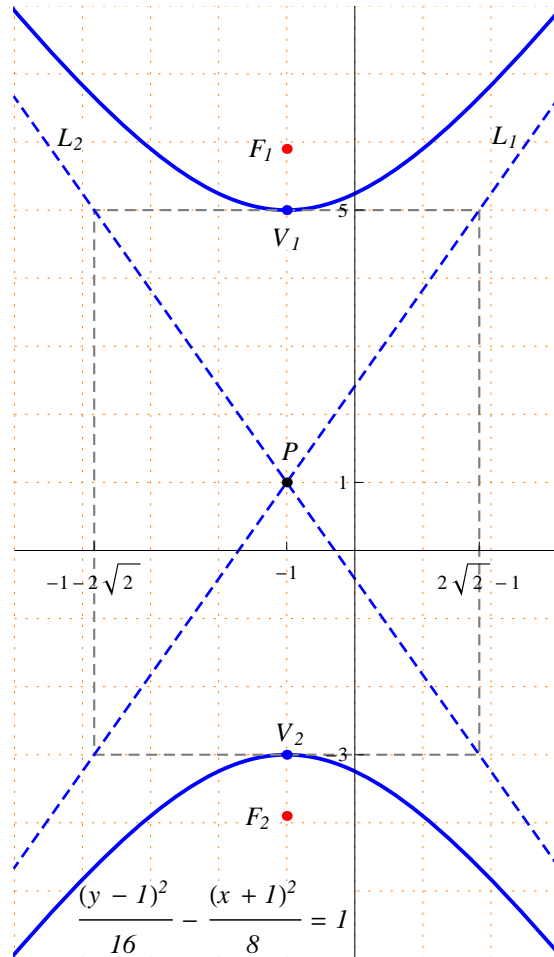
The foci of the hyperbola are $F_1(-1, 1 + 2\sqrt{6})$ and $F_2(-1, 1 - 2\sqrt{6})$.

The vertices of the hyperbola are $V_1(-1, 5)$ and $V_2(-1, -3)$.

The transverse axis is parallel to the y -axis and its length is $2b = 8$.

The equations of the asymptotes are

$$L_1 : y = \frac{4}{2\sqrt{2}}(x+1) + 1 = \sqrt{2}(x+1) + 1 \text{ and } L_2 : y = -\sqrt{2}(x+1) + 1$$



CHAPTER TWO

MATRICES AND DETERMINANTS

1. Matrices
2. Determinants

1. Matrices

Definition : A **matrix** \mathbf{A} of order $m \times n$ is a set of real numbers arranged in a rectangular array of m rows and n columns. It is written as

$$\mathbf{A} = \begin{pmatrix} a_{11} & a_{12} & \dots & a_{1n} \\ a_{21} & a_{22} & \dots & a_{2n} \\ \vdots & \vdots & & \vdots \\ a_{m1} & a_{m2} & \dots & a_{mn} \end{pmatrix}$$

Notes :

1. a_{ij} represents the element of the matrix \mathbf{A} that lies in row i and column j .
2. The matrix \mathbf{A} can also be written as $\mathbf{A} = (a_{ij})_{m \times n}$.
3. If the number of rows equals the number of columns ($m = n$) then \mathbf{A} is called a **square** matrix of order n .
4. In a square matrix $\mathbf{A} = (a_{ij})$, the set of elements of the form a_{ii} is called the diagonal of the matrix.

Examples :

1. $\begin{pmatrix} -1 & 4 & 0 \\ 2 & -3 & 7 \end{pmatrix}$ is a matrix of order 2×3 .

$a_{11} = -1$, $a_{12} = 4$, $a_{13} = 0$, $a_{21} = 2$, $a_{22} = -3$ and $a_{23} = 7$.

2. $\begin{pmatrix} 5 & -3 & 2 \\ 0 & 1 & 7 \\ 0 & 8 & 13 \end{pmatrix}$ is a square matrix of order 3.

The diagonal is the set $\{a_{11}, a_{22}, a_{33}\} = \{5, 1, 13\}$

1.1 Special types of matrices :

1. Row vector : A row vector of order n is a matrix of order $1 \times n$, and it is written as $(a_1 \ a_2 \ \dots \ a_n)$

Example : $(2 \ 7 \ 0 \ -1)$ is a row vector of order 4.

2. Column vector : A column vector of order n is a matrix of order $n \times 1$,

and it is written as $\begin{pmatrix} a_1 \\ a_2 \\ \vdots \\ a_n \end{pmatrix}$

Example : $\begin{pmatrix} 8 \\ -1 \\ 2 \end{pmatrix}$ is a column vector of order 3.

3. Null matrix : The matrix $(a_{ij})_{m \times n}$ of order $m \times n$ is called a **null matrix** if $a_{ij} = 0$ for all i and j , and it is denoted by $\mathbf{0}$.

$$\mathbf{0} = \begin{pmatrix} 0 & 0 & 0 & \dots & 0 \\ 0 & 0 & 0 & \dots & 0 \\ \vdots & \vdots & \vdots & & \vdots \\ 0 & 0 & 0 & \dots & 0 \end{pmatrix}$$

Example : $\begin{pmatrix} 0 & 0 & 0 & 0 \\ 0 & 0 & 0 & 0 \\ 0 & 0 & 0 & 0 \end{pmatrix}$ is a null matrix of order 3×4 .

4. Upper triangular matrix : The square matrix $\mathbf{A} = (a_{ij})$ of order n is called an **upper triangular matrix** if $a_{ij} = 0$ for all $i > j$, and it is written

$$\text{as } \mathbf{A} = \begin{pmatrix} a_{11} & a_{12} & a_{13} & \dots & a_{1n} \\ 0 & a_{22} & a_{23} & \dots & a_{2n} \\ 0 & 0 & a_{33} & \dots & a_{3n} \\ \vdots & \vdots & \vdots & & \vdots \\ 0 & 0 & 0 & \dots & a_{nn} \end{pmatrix}$$

Example : $\begin{pmatrix} 8 & 5 & -2 & 1 \\ 0 & 3 & 1 & -6 \\ 0 & 0 & 4 & 1 \\ 0 & 0 & 0 & 3 \end{pmatrix}$ is an upper triangular matrix of order 4.

5. Lower triangular matrix : The square matrix $\mathbf{A} = (a_{ij})$ of order n is called a **lower triangular matrix** if $a_{ij} = 0$ for all $i < j$, and it is written as

$$\mathbf{A} = \begin{pmatrix} a_{11} & 0 & 0 & \dots & 0 \\ a_{21} & a_{22} & 0 & \dots & 0 \\ a_{31} & a_{32} & a_{33} & \dots & 0 \\ \vdots & \vdots & \vdots & & \vdots \\ a_{n1} & a_{n2} & a_{n3} & \dots & a_{nn} \end{pmatrix}$$

Example : $\begin{pmatrix} 2 & 0 & 0 \\ -1 & 4 & 0 \\ 3 & -5 & 7 \end{pmatrix}$ is a lower triangular matrix of order 3.

6. Diagonal matrix : The square matrix $\mathbf{A} = (a_{ij})$ of order n is called a **diagonal matrix** if $a_{ij} = 0$ for all $i \neq j$, and it is written as

$$\mathbf{A} = \begin{pmatrix} a_{11} & 0 & 0 & \dots & 0 \\ 0 & a_{22} & 0 & \dots & 0 \\ 0 & 0 & a_{33} & \dots & 0 \\ \vdots & \vdots & \vdots & & \vdots \\ 0 & 0 & 0 & \dots & a_{nn} \end{pmatrix}$$

Example : $\begin{pmatrix} 2 & 0 & 0 \\ 0 & -3 & 0 \\ 0 & 0 & 1 \end{pmatrix}$ is a diagonal matrix of order 3.

7. Identity matrix : The square matrix $I_n = (a_{ij})$ of order n is called an **identity matrix** if $a_{ij} = 0$ for all $i \neq j$ and $a_{ij} = 1$ for all $i = j$, and it is

written as $I_n = \begin{pmatrix} 1 & 0 & 0 & \dots & 0 \\ 0 & 1 & 0 & \dots & 0 \\ 0 & 0 & 1 & \dots & 0 \\ \vdots & \vdots & \vdots & & \vdots \\ 0 & 0 & 0 & \dots & 1 \end{pmatrix}$

Example : $I_3 = \begin{pmatrix} 1 & 0 & 0 \\ 0 & 1 & 0 \\ 0 & 0 & 1 \end{pmatrix}$ is an identity matrix of order 3.

1.2 Elementary matrix operations :

1. Addition and subtraction of matrices :

Addition or subtraction of two matrices is defined if the two matrices have the same order.

If $\mathbf{A} = (a_{ij})_{m \times n}$ and $\mathbf{B} = (b_{ij})_{m \times n}$ any two matrices of order $m \times n$ then

1. $\mathbf{A} + \mathbf{B} = (a_{ij} + b_{ij})_{m \times n}$.

$$\mathbf{A} + \mathbf{B} = \begin{pmatrix} a_{11} + b_{11} & a_{12} + b_{12} & \dots & a_{1n} + b_{1n} \\ a_{21} + b_{21} & a_{22} + b_{22} & \dots & a_{2n} + b_{2n} \\ \vdots & \vdots & & \vdots \\ a_{m1} + b_{m1} & a_{m2} + b_{m2} & \dots & a_{mn} + b_{mn} \end{pmatrix}$$

2. $\mathbf{A} - \mathbf{B} = (a_{ij} - b_{ij})_{m \times n}$.

$$\mathbf{A} - \mathbf{B} = \begin{pmatrix} a_{11} - b_{11} & a_{12} - b_{12} & \dots & a_{1n} - b_{1n} \\ a_{21} - b_{21} & a_{22} - b_{22} & \dots & a_{2n} - b_{2n} \\ \vdots & \vdots & & \vdots \\ a_{m1} - b_{m1} & a_{m2} - b_{m2} & \dots & a_{mn} - b_{mn} \end{pmatrix}$$

Example : If $\mathbf{A} = \begin{pmatrix} 2 & -3 & 0 \\ 1 & -4 & 6 \end{pmatrix}$ and $\mathbf{B} = \begin{pmatrix} 5 & 2 & 1 \\ -3 & 7 & -2 \end{pmatrix}$ then

$$\mathbf{A} + \mathbf{B} = \begin{pmatrix} 2+5 & -3+2 & 0+1 \\ 1+(-3) & -4+7 & 6+(-2) \end{pmatrix} = \begin{pmatrix} 7 & -1 & 1 \\ -2 & 3 & 4 \end{pmatrix}$$

$$\mathbf{A} - \mathbf{B} = \begin{pmatrix} 2-5 & -3-2 & 0-1 \\ 1-(-3) & -4-7 & 6-(-2) \end{pmatrix} = \begin{pmatrix} -3 & -5 & -1 \\ 4 & -11 & 8 \end{pmatrix}$$

Notes:

1. The addition of matrices is commutative : if \mathbf{A} and \mathbf{B} any two matrices of the same order then $\mathbf{A} + \mathbf{B} = \mathbf{B} + \mathbf{A}$.
2. The null matrix is the identity element of addition : if \mathbf{A} is any matrix then $\mathbf{A} + \mathbf{0} = \mathbf{A}$.

2. Multiplying a matrix by a scalar :

If $\mathbf{A} = (a_{ij})$ is a matrix of order $m \times n$ and $c \in \mathbb{R}$ then $c\mathbf{A} = (ca_{ij})$.

$$c\mathbf{A} = \begin{pmatrix} ca_{11} & ca_{12} & \dots & ca_{1n} \\ ca_{21} & ca_{22} & \dots & ca_{2n} \\ \vdots & \vdots & & \vdots \\ ca_{m1} & ca_{m2} & \dots & ca_{mn} \end{pmatrix}$$

Example : If $\mathbf{A} = \begin{pmatrix} 3 & -1 & 4 \\ 2 & -2 & 0 \end{pmatrix}$ then $3\mathbf{A} = \begin{pmatrix} 9 & -3 & 12 \\ 6 & -6 & 0 \end{pmatrix}$

3. Multiplying a row vector by a column vector :

If $\mathbf{A} = (a_1 \ a_2 \ \dots \ a_n)$ is a row vector of order n and

$\mathbf{B} = \begin{pmatrix} b_1 \\ b_2 \\ \vdots \\ b_n \end{pmatrix}$ is a column vector of order n then

$$\mathbf{AB} = (a_1 \ a_2 \ \dots \ a_n) \begin{pmatrix} b_1 \\ b_2 \\ \vdots \\ b_n \end{pmatrix} = a_1b_1 + a_2b_2 + \dots + a_nb_n$$

Example : If $\mathbf{A} = (-1 \ 2 \ 0 \ 5)$ and $\mathbf{B} = \begin{pmatrix} 4 \\ -2 \\ 1 \\ -1 \end{pmatrix}$ then

$$\mathbf{AB} = (-1 \ 2 \ 0 \ 5) \begin{pmatrix} 4 \\ -2 \\ 1 \\ -1 \end{pmatrix} = -4 - 4 + 0 - 5 = -13$$

4. Multiplication of matrices :

1. If \mathbf{A} and \mathbf{B} any two matrices then \mathbf{AB} is defined if the number of columns of \mathbf{A} equals the number of rows of \mathbf{B} .

2. If $\mathbf{A} = (a_{ij})_{m \times n}$ and $\mathbf{B} = (b_{ij})_{n \times p}$ then $\mathbf{AB} = (c_{ij})_{m \times p}$.

c_{ij} is calculated by multiplying the i^{th} row of \mathbf{A} by the j^{th} column of \mathbf{B} .

$$c_{ij} = (a_{i1} \ a_{i2} \ \dots \ a_{in}) \begin{pmatrix} b_{1j} \\ b_{2j} \\ \vdots \\ b_{nj} \end{pmatrix} = a_{i1}b_{1j} + a_{i2}b_{2j} + \dots + a_{in}b_{nj}$$

Example 1 :

$$\begin{aligned} 1. & \begin{pmatrix} -1 & 3 & 4 \\ -2 & 0 & 5 \end{pmatrix}_{2 \times 3} \begin{pmatrix} 1 & 3 \\ -1 & -2 \\ 4 & 0 \end{pmatrix}_{3 \times 2} \\ &= \begin{pmatrix} (-1 \times 1) + (3 \times -1) + (4 \times 4) & (-1 \times 3) + (3 \times -2) + (4 \times 0) \\ (-2 \times 1) + (0 \times -1) + (5 \times 4) & (-2 \times 3) + (0 \times -2) + (5 \times 0) \end{pmatrix}_{2 \times 2} \\ &= \begin{pmatrix} -1 - 3 + 16 & -3 - 6 + 0 \\ -2 + 0 + 20 & -6 + 0 + 0 \end{pmatrix}_{2 \times 2} = \begin{pmatrix} 12 & -9 \\ 18 & -6 \end{pmatrix}_{2 \times 2} \\ 2. & \begin{pmatrix} 3 & -1 \\ -2 & 5 \end{pmatrix}_{2 \times 2} \begin{pmatrix} 0 & -3 & 4 \\ -2 & 0 & 1 \end{pmatrix}_{2 \times 3} \end{aligned}$$

$$= \begin{pmatrix} (3 \times 0) + (-1 \times -2) & (3 \times -3) + (-1 \times 0) & (3 \times 4) + (-1 \times 1) \\ (-2 \times 0) + (5 \times -2) & (-2 \times -3) + (5 \times 0) & (-2 \times 4) + (5 \times 1) \end{pmatrix}_{2 \times 3}$$

$$\begin{pmatrix} 0 + 2 & -9 + 0 & 12 - 1 \\ 0 - 10 & 6 + 0 & -8 + 5 \end{pmatrix}_{2 \times 3} = \begin{pmatrix} 2 & -9 & 11 \\ -10 & 6 & -3 \end{pmatrix}_{2 \times 3}$$

Example 2: Let $\mathbf{A} = \begin{pmatrix} 1 & -2 & 3 \\ 4 & 5 & 6 \\ 2 & 0 & 1 \end{pmatrix}$ and $\mathbf{B} = \begin{pmatrix} 1 & -1 \\ 2 & 3 \\ 0 & 4 \end{pmatrix}$

Compute (if possible) : $2\mathbf{BA}$ and \mathbf{AB}

Solution : \mathbf{A} is of order 3×3 and \mathbf{B} is of order 3×2

$2\mathbf{BA}$ is not possible because the number of columns of \mathbf{B} is not equal to the number of rows of \mathbf{A} .

$$\mathbf{AB} = \begin{pmatrix} 1 & -2 & 3 \\ 4 & 5 & 6 \\ 2 & 0 & 1 \end{pmatrix}_{3 \times 3} \begin{pmatrix} 1 & -1 \\ 2 & 3 \\ 0 & 4 \end{pmatrix}_{3 \times 2} = \begin{pmatrix} (1 - 4 + 0) & (-1 - 6 + 12) \\ (4 + 10 + 0) & (-4 + 15 + 24) \\ (2 + 0 + 0) & (-2 + 0 + 4) \end{pmatrix}_{3 \times 2}$$

$$\mathbf{AB} = \begin{pmatrix} -3 & 5 \\ 14 & 35 \\ 2 & 2 \end{pmatrix}_{3 \times 2}$$

Notes :

1. The identity matrix is the identity element in matrix multiplication :

If A is a matrix of order $m \times n$ and \mathbf{I}_n is the identity matrix of order n then $\mathbf{A} \mathbf{I}_n = \mathbf{I}_m \mathbf{A} = \mathbf{A}$.

2. Matrix multiplication is not commutative :

$$\text{If } \mathbf{A} = \begin{pmatrix} -1 & 0 \\ 3 & 2 \end{pmatrix} \text{ and } \mathbf{B} = \begin{pmatrix} 2 & 1 \\ 1 & 1 \end{pmatrix}$$

$$\mathbf{AB} = \begin{pmatrix} -1 & 0 \\ 3 & 2 \end{pmatrix} \begin{pmatrix} 2 & 1 \\ 1 & 1 \end{pmatrix} = \begin{pmatrix} -2 & -1 \\ 8 & 5 \end{pmatrix}$$

$$\mathbf{BA} = \begin{pmatrix} 2 & 1 \\ 1 & 1 \end{pmatrix} \begin{pmatrix} -1 & 0 \\ 3 & 2 \end{pmatrix} = \begin{pmatrix} 1 & 2 \\ 2 & 2 \end{pmatrix}$$

$$\mathbf{AB} \neq \mathbf{BA} .$$

3. $\mathbf{AB} = \mathbf{0}$ does not imply that $\mathbf{A} = \mathbf{0}$ or $\mathbf{B} = \mathbf{0}$.

$$\text{For example, } \mathbf{A} = \begin{pmatrix} 1 & 0 \\ 0 & 0 \end{pmatrix} \neq \mathbf{0} \text{ and } \mathbf{B} = \begin{pmatrix} 0 & 0 \\ 0 & 1 \end{pmatrix} \neq \mathbf{0}$$

$$\text{But } \mathbf{AB} = \begin{pmatrix} 1 & 0 \\ 0 & 0 \end{pmatrix} \begin{pmatrix} 0 & 0 \\ 0 & 1 \end{pmatrix} = \begin{pmatrix} 0 & 0 \\ 0 & 0 \end{pmatrix} = \mathbf{0}$$

1.3 Transpose of a matrix :

If $\mathbf{A} = (a_{ij})_{m \times n}$ then the transpose of \mathbf{A} is $\mathbf{A}^t = (a_{ji})_{n \times m}$.

Example : If $\mathbf{A} = \begin{pmatrix} 4 & 0 & -2 \\ -3 & 5 & 1 \end{pmatrix}$ then $\mathbf{A}^t = \begin{pmatrix} 4 & -3 \\ 0 & 5 \\ -2 & 1 \end{pmatrix}$

Note : The transpose of a lower triangular matrix is an upper triangular matrix , and the transpose of an upper triangular matrix is a lower triangular matrix .

Theorem :

If \mathbf{A} and \mathbf{B} any two matrices and $\lambda \in \mathbb{R}$ then

1. $(\mathbf{A}^t)^t = \mathbf{A}$.
2. $(\mathbf{A} + \mathbf{B})^t = \mathbf{A}^t + \mathbf{B}^t$.
3. $(\lambda\mathbf{A})^t = \lambda \mathbf{A}^t$.
4. $(\mathbf{AB})^t = \mathbf{B}^t \mathbf{A}^t$.

1.4 Properties of operations on matrices :

1. If \mathbf{A} , \mathbf{B} and \mathbf{C} any three matrices of the same order then
$$\mathbf{A} + \mathbf{B} + \mathbf{C} = (\mathbf{A} + \mathbf{B}) + \mathbf{C} = \mathbf{A} + (\mathbf{B} + \mathbf{C}) = (\mathbf{A} + \mathbf{C}) + \mathbf{B}$$
2. If \mathbf{A} , \mathbf{B} any two matrices of order $m \times n$ and \mathbf{C} a matrix of order $n \times p$ then $(\mathbf{A} + \mathbf{B})\mathbf{C} = \mathbf{AC} + \mathbf{BC}$
3. If \mathbf{A} , \mathbf{B} any two matrices of order $m \times n$ and \mathbf{C} a matrix of order $p \times m$ then $\mathbf{C}(\mathbf{A} + \mathbf{B}) = \mathbf{CA} + \mathbf{CB}$
4. If \mathbf{A} a matrix of order $m \times n$, \mathbf{B} a matrix of order $n \times p$ and \mathbf{C} a matrix of order $p \times q$ then $\mathbf{ABC} = (\mathbf{AB})\mathbf{C} = \mathbf{A}(\mathbf{BC})$

2. Determinants

If \mathbf{A} is a square matrix then the determinant of \mathbf{A} is denoted by $\det(\mathbf{A})$ or $|\mathbf{A}|$.

2.1 The determinant of a 2×2 matrix :

If $\mathbf{A} = \begin{pmatrix} a_{11} & a_{12} \\ a_{21} & a_{22} \end{pmatrix}$ then $\det(\mathbf{A}) = \begin{vmatrix} a_{11} & a_{12} \\ a_{21} & a_{22} \end{vmatrix} = a_{11}a_{22} - a_{12}a_{21}$

Example :

If $\mathbf{A} = \begin{pmatrix} 5 & -1 \\ 2 & 3 \end{pmatrix}$ then $\det(\mathbf{A}) = (5 \times 3) - (2 \times -1) = 15 + 2 = 17$

2.2 The determinant of a 3×3 matrix :

Let $\mathbf{A} = \begin{pmatrix} a_{11} & a_{12} & a_{13} \\ a_{21} & a_{22} & a_{23} \\ a_{31} & a_{32} & a_{33} \end{pmatrix}$ be a square matrix of order 3.

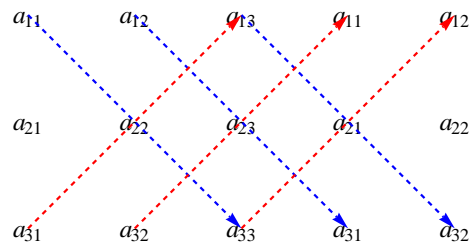
1). The determinant of \mathbf{A} is defined as :

$$\det(\mathbf{A}) = a_{11} \begin{vmatrix} a_{22} & a_{23} \\ a_{32} & a_{33} \end{vmatrix} - a_{12} \begin{vmatrix} a_{21} & a_{23} \\ a_{31} & a_{33} \end{vmatrix} + a_{13} \begin{vmatrix} a_{21} & a_{22} \\ a_{31} & a_{32} \end{vmatrix}$$

$$\det(\mathbf{A}) = a_{11} (a_{22}a_{33} - a_{23}a_{32}) - a_{12} (a_{21}a_{33} - a_{23}a_{31}) + a_{13} (a_{21}a_{32} - a_{22}a_{31})$$

2). Sarrus Method for calculating the determinant of a 3×3 matrix :

Write the first two columns to the right of the matrix to get a 3×5 matrix



$$\det(\mathbf{A}) = (a_{11}a_{22}a_{33} + a_{12}a_{23}a_{31} + a_{13}a_{21}a_{32}) - (a_{31}a_{22}a_{13} + a_{32}a_{23}a_{11} + a_{33}a_{21}a_{12})$$

Example : If $\mathbf{A} = \begin{pmatrix} 2 & 3 & -1 \\ 1 & 2 & 4 \\ -5 & 0 & 1 \end{pmatrix}$

1) Using the definition of the determinant of a 3×3 matrix

$$\det(\mathbf{A}) = 2 \begin{vmatrix} 2 & 4 \\ 0 & 1 \end{vmatrix} - 3 \begin{vmatrix} 1 & 4 \\ -5 & 1 \end{vmatrix} + (-1) \begin{vmatrix} 1 & 2 \\ -5 & 0 \end{vmatrix}$$

$$\det(\mathbf{A}) = 2(2 \times 1 - 4 \times 0) - 3(1 \times 1 - 4 \times -5) - 1(1 \times 0 - 2 \times -5)$$

$$\det(\mathbf{A}) = 2(2 - 0) - 3(1 + 20) - 1(0 + 10) = 4 - 63 - 10 = -69$$

2) Using Sarrus Method

$$\begin{array}{cccccc} 2 & 3 & -1 & 2 & 3 & \\ 1 & 2 & 4 & 1 & 2 & \\ -5 & 0 & 1 & -5 & 0 & \end{array}$$

$$\det(\mathbf{A}) = (2 \times 2 \times 1 + 3 \times 4 \times -5 + (-1) \times 1 \times 0) - (-5 \times 2 \times -1 + 0 \times 4 \times 2 + 1 \times 1 \times 3)$$

$$\det(\mathbf{A}) = (4 - 60 + 0) - (10 + 0 + 3) = -56 - 13 = -69 .$$

2.3 The determinant of a 4×4 matrix :

Let $\mathbf{A} = \begin{pmatrix} a_{11} & a_{12} & a_{13} & a_{14} \\ a_{21} & a_{22} & a_{23} & a_{24} \\ a_{31} & a_{32} & a_{33} & a_{34} \\ a_{41} & a_{42} & a_{43} & a_{44} \end{pmatrix}$ be a 4×4 matrix , then

$$\det(\mathbf{A}) = a_{11} \det(\mathbf{A}_1) - a_{12} \det(\mathbf{A}_2) + a_{13} \det(\mathbf{A}_3) - a_{14} \det(\mathbf{A}_4)$$

where

$$\mathbf{A}_1 = \begin{pmatrix} a_{22} & a_{23} & a_{24} \\ a_{32} & a_{33} & a_{34} \\ a_{42} & a_{43} & a_{44} \end{pmatrix} , \quad \mathbf{A}_2 = \begin{pmatrix} a_{21} & a_{23} & a_{24} \\ a_{31} & a_{33} & a_{34} \\ a_{41} & a_{43} & a_{44} \end{pmatrix}$$

$$\mathbf{A}_3 = \begin{pmatrix} a_{21} & a_{22} & a_{24} \\ a_{31} & a_{32} & a_{34} \\ a_{41} & a_{42} & a_{44} \end{pmatrix} , \quad \mathbf{A}_4 = \begin{pmatrix} a_{21} & a_{22} & a_{23} \\ a_{31} & a_{32} & a_{33} \\ a_{41} & a_{42} & a_{43} \end{pmatrix}$$

Example : If $\mathbf{A} = \begin{pmatrix} 3 & 1 & -2 & 1 \\ 0 & 4 & -1 & 5 \\ 2 & 1 & -3 & 0 \\ 1 & -2 & -1 & 3 \end{pmatrix}$

$$\det(\mathbf{A}) = (3) \det(\mathbf{A}_1) - (1) \det(\mathbf{A}_2) + (-2) \det(\mathbf{A}_3) - (1) \det(\mathbf{A}_4)$$

where

$$\mathbf{A}_1 = \begin{pmatrix} 4 & -1 & 5 \\ 1 & -3 & 0 \\ -2 & -1 & 3 \end{pmatrix} , \quad \mathbf{A}_2 = \begin{pmatrix} 0 & -1 & 5 \\ 2 & -3 & 0 \\ 1 & -1 & 3 \end{pmatrix}$$

$$\mathbf{A}_3 = \begin{pmatrix} 0 & 4 & 5 \\ 2 & 1 & 0 \\ 1 & -2 & 3 \end{pmatrix} , \quad \mathbf{A}_4 = \begin{pmatrix} 0 & 4 & -1 \\ 2 & 1 & -3 \\ 1 & -2 & -1 \end{pmatrix}$$

- To calculate $\det(\mathbf{A}_1)$

$$\begin{array}{cccccc} 4 & -1 & 5 & 4 & -1 & \\ 1 & -3 & 0 & 1 & -3 & \\ -2 & -1 & 3 & -2 & -1 & \end{array}$$

$$\det(\mathbf{A}_1) = (-36 + 0 - 5) - (30 + 0 - 3) = -36 - 5 - 30 + 3 = -68$$

- To calculate $\det(\mathbf{A}_2)$

$$\begin{array}{cccccc} 0 & -1 & 5 & 0 & -1 & \\ 2 & -3 & 0 & 2 & -3 & \\ 1 & -1 & 3 & 1 & -1 & \end{array}$$

$$\det(\mathbf{A}_2) = (0 + 0 - 10) - (-15 + 0 - 6) = -10 + 21 = 11$$

- To calculate $\det(\mathbf{A}_3)$

$$\begin{array}{ccccc} 0 & 4 & 5 & 0 & 4 \\ 2 & 1 & 0 & 2 & 1 \\ 1 & -2 & 3 & 1 & -2 \end{array}$$

$$\det(\mathbf{A}_3) = (0 + 0 - 20) - (5 + 0 + 24) = -20 - 29 = -49$$

- To calculate $\det(\mathbf{A}_4)$

$$\begin{array}{ccccc} 0 & 4 & -1 & 0 & 4 \\ 2 & 1 & -3 & 2 & 1 \\ 1 & -2 & -1 & 1 & -2 \end{array}$$

$$\det(\mathbf{A}_4) = (0 - 12 + 4) - (-1 + 0 - 8) = -8 + 9 = 1$$

$$\det(\mathbf{A}) = (3) \det(\mathbf{A}_1) - (1) \det(\mathbf{A}_2) + (-2) \det(\mathbf{A}_3) - (1) \det(\mathbf{A}_4)$$

$$\det(\mathbf{A}) = (3 \times -68) - (1 \times 11) + (-2 \times -49) - (1 \times 1)$$

$$\det(\mathbf{A}) = -204 - 11 + 98 - 1 = -216 + 98 = -118 .$$

2.4 Properties of determinants :

1. If \mathbf{A} is a square matrix that contains a zero row (or a zero column) then $\det(\mathbf{A}) = 0$.
2. If \mathbf{A} is a square matrix that contains two equal rows (or two equal columns) then $\det(\mathbf{A}) = 0$.
3. If \mathbf{A} is a square matrix that contains a row which is a multiple of another row (or a column which is a multiple of another column) then $\det(\mathbf{A}) = 0$.
4. If \mathbf{A} is a diagonal matrix or an upper triangular matrix or a lower triangular matrix the $\det(\mathbf{A})$ is the the product of the elements of the main diagonal.
5. The determinant of the null matrix is 0 and the determinant of the identity matrix is 1.
6. If \mathbf{A} is a square matrix and \mathbf{B} is the matrix formed by multiplying one of the rows (or columns) of \mathbf{A} by a non-zero constant λ then $\det(\mathbf{B}) = \lambda \det(\mathbf{A})$.
7. If \mathbf{A} is a square matrix and \mathbf{B} is the matrix formed by interchanging two rows (or two columns) of \mathbf{A} then $\det(\mathbf{B}) = -\det(\mathbf{A})$.
8. If \mathbf{A} is a square matrix and \mathbf{B} is the matrix formed by mutliplying a row by a non-zero constant and adding the result to another row (or mutliplying a column by a non-zero constant and adding the result to another column) then $\det(\mathbf{B}) = \det(\mathbf{A})$.

Examples : Use properties of determinants to calculate the derminants of the following matrices

$$1. \mathbf{A} = \begin{pmatrix} 3 & -1 & 1 \\ 0 & 0 & 0 \\ 2 & -2 & 4 \end{pmatrix}$$

Since the second row (R_2) is a zero row then $\det(\mathbf{A}) = 0$

$$2. \mathbf{A} = \begin{pmatrix} 4 & -5 & 4 \\ 0 & 2 & 0 \\ -3 & 1 & -3 \end{pmatrix}$$

Since the first column equals to the third column ($C_1 = C_3$) then

$\det(\mathbf{A}) = 0$.

$$3. \mathbf{A} = \begin{pmatrix} 2 & 1 & -3 \\ 0 & 5 & 1 \\ 6 & 3 & -9 \end{pmatrix}$$

Since the third row is a multiple of the first row ($R_3 = 3R_1$) then

$\det(\mathbf{A}) = 0$

$$4. \mathbf{A} = \begin{pmatrix} 3 & 0 & 4 \\ 6 & -1 & 2 \\ 0 & 0 & 5 \end{pmatrix}$$

Interchange the the first column and the second column ($C_1 \longleftrightarrow C_2$) , then interchange the first row and the second row ($R_1 \longleftrightarrow R_2$)

$$\begin{aligned} \det(\mathbf{A}) &= \begin{vmatrix} 3 & 0 & 4 \\ 6 & -1 & 2 \\ 0 & 0 & 5 \end{vmatrix} = (-1) \begin{vmatrix} 0 & 3 & 4 \\ -1 & 6 & 2 \\ 0 & 0 & 5 \end{vmatrix} \\ &= (-1)^2 \begin{vmatrix} -1 & 6 & 2 \\ 0 & 3 & 4 \\ 0 & 0 & 5 \end{vmatrix} = -1 \times 3 \times 5 = -15 \end{aligned}$$

$$5. \mathbf{A} = \begin{pmatrix} 5 & 2 & 3 \\ 15 & 8 & 1 \\ 10 & 6 & 2 \end{pmatrix}$$

$$\begin{aligned} \det(\mathbf{A}) &= \begin{vmatrix} 5 & 2 & 3 \\ 15 & 8 & 1 \\ 10 & 6 & 2 \end{vmatrix} \xrightarrow{-3R_1+R_2} \begin{vmatrix} 5 & 2 & 3 \\ 0 & 2 & -8 \\ 10 & 6 & 2 \end{vmatrix} \xrightarrow{-2R_1+R_3} \begin{vmatrix} 5 & 2 & 3 \\ 0 & 2 & -8 \\ 0 & 2 & -4 \end{vmatrix} \\ &\xrightarrow{-R_2+R_3} \begin{vmatrix} 5 & 2 & 3 \\ 0 & 2 & -8 \\ 0 & 0 & 4 \end{vmatrix} = 5 \times 2 \times 4 = 40 \end{aligned}$$

$$6. \mathbf{A} = \begin{pmatrix} 1 & 2 & 3 & 4 \\ 1 & 2 & 3 & -4 \\ 1 & 2 & 3 & 5 \\ 3 & 0 & 1 & 0 \end{pmatrix}$$

$$\det(\mathbf{A}) = \begin{vmatrix} 1 & 2 & 3 & 4 \\ 1 & 2 & 3 & -4 \\ 1 & 2 & 3 & 5 \\ 3 & 0 & 1 & 0 \end{vmatrix} \xrightarrow{-R_1+R_2} \begin{vmatrix} 1 & 2 & 3 & 4 \\ 0 & 0 & 0 & -8 \\ 1 & 2 & 3 & 5 \\ 3 & 0 & 1 & 0 \end{vmatrix}$$

$$\xrightarrow{-R_1+R_3} \begin{vmatrix} 1 & 2 & 3 & 4 \\ 0 & 0 & 0 & -8 \\ 0 & 0 & 0 & 1 \\ 3 & 0 & 1 & 0 \end{vmatrix} = 0 \quad (R_2 = -8R_3)$$

$$7. \mathbf{A} = \begin{pmatrix} 1 & 2 & 3 & 4 \\ 5 & 6 & 7 & 8 \\ 4 & 3 & 2 & 1 \\ 8 & 7 & 6 & 5 \end{pmatrix}$$

$$\det(\mathbf{A}) = \begin{vmatrix} 1 & 2 & 3 & 4 \\ 5 & 6 & 7 & 8 \\ 4 & 3 & 2 & 1 \\ 8 & 7 & 6 & 5 \end{vmatrix} \xrightarrow{-R_1+R_2} \begin{vmatrix} 1 & 2 & 3 & 4 \\ 4 & 4 & 4 & 4 \\ 4 & 3 & 2 & 1 \\ 8 & 7 & 6 & 5 \end{vmatrix}$$

$$\xrightarrow{-R_3+R_4} \begin{vmatrix} 1 & 2 & 3 & 4 \\ 4 & 4 & 4 & 4 \\ 4 & 3 & 2 & 1 \\ 4 & 4 & 4 & 4 \end{vmatrix} = 0 \quad (R_2 = R_4)$$

$$8. \begin{pmatrix} 1 & 2 & 3 & 4 \\ 0 & 2 & 3 & 0 \\ 1 & 2 & 3 & 5 \\ 3 & 0 & 0 & 0 \end{pmatrix}$$

Multiply C_2 by 3 and multiply C_3 by 2

$$\begin{vmatrix} 1 & 2 & 3 & 4 \\ 0 & 2 & 3 & 0 \\ 1 & 2 & 3 & 5 \\ 3 & 0 & 0 & 0 \end{vmatrix} = \begin{pmatrix} 1 \\ 2 \end{pmatrix} \begin{pmatrix} 1 \\ 3 \end{pmatrix} \begin{vmatrix} 1 & 6 & 6 & 4 \\ 0 & 6 & 6 & 0 \\ 1 & 6 & 6 & 5 \\ 3 & 0 & 0 & 0 \end{vmatrix} = 0 \quad (\text{since } C_2 = C_3)$$

CHAPTER THREE

SYSTEMS OF LINEAR EQUATIONS

1. Cramer's Rule
2. Gauss Elimination Method
3. Gauss-Jordan Method

Systems of Linear Equations

Consider the system of linear equations in n different variables

$$\begin{aligned} a_{11}x_1 + a_{12}x_2 + \dots + a_{1n}x_n &= b_1 \\ a_{21}x_1 + a_{22}x_2 + \dots + a_{2n}x_n &= b_2 \\ \vdots & \\ a_{n1}x_1 + a_{n2}x_2 + \dots + a_{nn}x_n &= b_n \end{aligned} \quad (*)$$

Using multiplication of matrices, the above system of linear equations can be written as : $\mathbf{A} \mathbf{X} = \mathbf{B}$

$$\text{where } \mathbf{A} = \begin{pmatrix} a_{11} & a_{12} & \dots & a_{1n} \\ a_{21} & a_{22} & \dots & a_{2n} \\ \vdots & \vdots & & \vdots \\ a_{n1} & a_{n2} & \dots & a_{nn} \end{pmatrix}, \mathbf{X} = \begin{pmatrix} x_1 \\ x_2 \\ \vdots \\ x_n \end{pmatrix} \text{ and } \mathbf{B} = \begin{pmatrix} b_1 \\ b_2 \\ \vdots \\ b_n \end{pmatrix}$$

\mathbf{A} is called the coefficients matrix

\mathbf{X} is called the column vector of variables (or column vector of the unknowns)

\mathbf{B} is called the column vector of constants (or column vector of the resultants)

Theorem : The system of linear equations (*) has a solution if $\det(\mathbf{A}) \neq 0$.

This chapter presents three methods of solving the system of linear equations (*), the first method is Cramer's rule, the second is Gauss elimination method, and the third is Gauss-Jordan method.

1. Cramer's rule

Consider the system of linear equations in n different variables

$$\begin{array}{cccccc} a_{11}x_1 & + & a_{12}x_2 & + & \dots & + & a_{1n}x_n & = & b_1 \\ a_{21}x_1 & + & a_{22}x_2 & + & \dots & + & a_{2n}x_n & = & b_2 \\ \vdots & & \vdots & & & & \vdots & & \vdots \\ a_{n1}x_1 & + & a_{n2}x_2 & + & \dots & + & a_{nn}x_n & = & b_n \end{array} \quad (*)$$

$$\mathbf{A} \mathbf{X} = \mathbf{B}$$

where $\mathbf{A} = \begin{pmatrix} a_{11} & a_{12} & \dots & a_{1n} \\ a_{21} & a_{22} & \dots & a_{2n} \\ \vdots & \vdots & & \vdots \\ a_{n1} & a_{n2} & \dots & a_{nn} \end{pmatrix}$, $\mathbf{X} = \begin{pmatrix} x_1 \\ x_2 \\ \vdots \\ x_n \end{pmatrix}$ and $\mathbf{B} = \begin{pmatrix} b_1 \\ b_2 \\ \vdots \\ b_n \end{pmatrix}$

If $\det(\mathbf{A}) \neq 0$ then the solution of the system (*) is given by

$$x_i = \frac{\det(\mathbf{A}_i)}{\det(\mathbf{A})} \text{ for every } i = 1, 2, \dots, n.$$

Where \mathbf{A}_i is the matrix formed by replacing the i^{th} column of \mathbf{A} by the column vector of constants.

$$\mathbf{A}_1 = \begin{pmatrix} b_1 & a_{12} & \dots & a_{1n} \\ b_2 & a_{22} & \dots & a_{2n} \\ \vdots & \vdots & & \vdots \\ b_n & a_{n2} & \dots & a_{nn} \end{pmatrix}, \mathbf{A}_2 = \begin{pmatrix} a_{11} & b_1 & \dots & a_{1n} \\ a_{21} & b_2 & \dots & a_{2n} \\ \vdots & \vdots & & \vdots \\ a_{n1} & b_n & \dots & a_{nn} \end{pmatrix}$$

$$\mathbf{A}_n = \begin{pmatrix} a_{11} & a_{12} & \dots & b_1 \\ a_{21} & a_{22} & \dots & b_2 \\ \vdots & \vdots & & \vdots \\ a_{n1} & a_{n2} & \dots & b_n \end{pmatrix}$$

Example 1: Use Cramer's rule to solve the system of linear equations

$$\begin{array}{r} 2x + 3y = 7 \\ -x + y = 4 \end{array}$$

Solution : In this system of linear equations

$$\mathbf{A} = \begin{pmatrix} 2 & 3 \\ -1 & 1 \end{pmatrix}, \mathbf{X} = \begin{pmatrix} x \\ y \end{pmatrix} \text{ and } \mathbf{B} = \begin{pmatrix} 7 \\ 4 \end{pmatrix}$$

$$\det(\mathbf{A}) = \begin{vmatrix} 2 & 3 \\ -1 & 1 \end{vmatrix} = (2 \times 1) - (-1 \times 3) = 2 - (-3) = 2 + 3 = 5$$

$$\mathbf{A}_1 = \begin{pmatrix} 7 & 3 \\ 4 & 1 \end{pmatrix} \implies \det(\mathbf{A}_1) = 7 - 12 = -5$$

$$\mathbf{A}_2 = \begin{pmatrix} 2 & 7 \\ -1 & 4 \end{pmatrix} \implies \det(\mathbf{A}_2) = 8 - (-7) = 15$$

$$x = \frac{\det(\mathbf{A}_1)}{\det(\mathbf{A})} = \frac{-5}{5} = -1 \text{ and } y = \frac{\det(\mathbf{A}_2)}{\det(\mathbf{A})} = \frac{15}{5} = 3$$

The solution of the system of linear equations is $\begin{pmatrix} x \\ y \end{pmatrix} = \begin{pmatrix} -1 \\ 3 \end{pmatrix}$

Example 2: Use Cramer's rule to solve the system of linear equations

$$\begin{aligned} 2x + y + z &= 3 \\ 4x + y - z &= -2 \\ 2x - 2y + z &= 6 \end{aligned}$$

Solution : In this system of linear equations

$$\mathbf{A} = \begin{pmatrix} 2 & 1 & 1 \\ 4 & 1 & -1 \\ 2 & -2 & 1 \end{pmatrix}, \mathbf{X} = \begin{pmatrix} x \\ y \\ z \end{pmatrix} \text{ and } \mathbf{B} = \begin{pmatrix} 3 \\ -2 \\ 6 \end{pmatrix}$$

To calculate $\det(\mathbf{A})$:

$$\begin{array}{cccccc} 2 & 1 & 1 & 2 & 1 & \\ 4 & 1 & -1 & 4 & 1 & \\ 2 & -2 & 1 & 2 & -2 & \end{array}$$

$$\det(\mathbf{A}) = (2 - 2 - 8) - (2 + 4 + 4) = -8 - 10 = -18$$

$$\mathbf{A}_1 = \begin{pmatrix} 3 & 1 & 1 \\ -2 & 1 & -1 \\ 6 & -2 & 1 \end{pmatrix}$$

To calculate $\det(\mathbf{A}_1)$:

$$\begin{array}{cccccc} 3 & 1 & 1 & 3 & 1 & \\ -2 & 1 & -1 & -2 & 1 & \\ 6 & -2 & 1 & 6 & -2 & \end{array}$$

$$\det(\mathbf{A}_1) = (3 - 6 + 4) - (6 + 6 - 2) = 1 - 10 = -9$$

$$\mathbf{A}_2 = \begin{pmatrix} 2 & 3 & 1 \\ 4 & -2 & -1 \\ 2 & 6 & 1 \end{pmatrix}$$

To calculate $\det(\mathbf{A}_2)$:

$$\begin{array}{cccccc} 2 & 3 & 1 & 2 & 3 & \\ 4 & -2 & -1 & 4 & -2 & \\ 2 & 6 & 1 & 2 & 6 & \end{array}$$

$$\det(\mathbf{A}_2) = (-4 - 6 + 24) - (-4 - 12 + 12) = 14 + 4 = 18$$

$$\mathbf{A}_3 = \begin{pmatrix} 2 & 1 & 3 \\ 4 & 1 & -2 \\ 2 & -2 & 6 \end{pmatrix}$$

To calculate $\det(\mathbf{A}_3)$:

$$\begin{array}{cccccc} 2 & 1 & 3 & 2 & 1 & \\ 4 & 1 & -2 & 4 & 1 & \\ 2 & -2 & 6 & 2 & -2 & \end{array}$$

$$\det(\mathbf{A}_3) = (12 - 4 - 24) - (6 + 8 + 24) = 1 - 10 = -16 - 38 = -54$$

$$x = \frac{\det(\mathbf{A}_1)}{\det(\mathbf{A})} = \frac{-9}{-18} = \frac{1}{2}$$

$$y = \frac{\det(\mathbf{A}_2)}{\det(\mathbf{A})} = \frac{18}{-18} = -1$$

$$z = \frac{\det(\mathbf{A}_3)}{\det(\mathbf{A})} = \frac{-54}{-18} = 3$$

The solution of the system of linear equations is $\begin{pmatrix} x \\ y \\ z \end{pmatrix} = \begin{pmatrix} \frac{1}{2} \\ -1 \\ 3 \end{pmatrix}$

2. Gauss elimination method

Consider the system of linear equations in n different variables

$$\begin{array}{cccccc}
 a_{11}x_1 & + & a_{12}x_2 & + & \dots & + & a_{1n}x_n & = & b_1 \\
 a_{21}x_1 & + & a_{22}x_2 & + & \dots & + & a_{2n}x_n & = & b_2 \\
 \vdots & & \vdots & & & & \vdots & & \vdots \\
 a_{n1}x_1 & + & a_{n2}x_2 & + & \dots & + & a_{nn}x_n & = & b_n
 \end{array} \quad (*)$$

$$\mathbf{A} \mathbf{X} = \mathbf{B}$$

where $\mathbf{A} = \begin{pmatrix} a_{11} & a_{12} & \dots & a_{1n} \\ a_{21} & a_{22} & \dots & a_{2n} \\ \vdots & \vdots & & \vdots \\ a_{n1} & a_{n2} & \dots & a_{nn} \end{pmatrix}$, $\mathbf{X} = \begin{pmatrix} x_1 \\ x_2 \\ \vdots \\ x_n \end{pmatrix}$ and $\mathbf{B} = \begin{pmatrix} b_1 \\ b_2 \\ \vdots \\ b_n \end{pmatrix}$

To solve the system of linear equations (*) by Gauss elimination method :

1. Construct the augmented matrix $[\mathbf{A}|\mathbf{B}]$

$$\left(\begin{array}{cccc|c}
 a_{11} & a_{12} & \dots & a_{1n} & b_1 \\
 a_{21} & a_{22} & \dots & a_{2n} & b_2 \\
 \vdots & \vdots & & \vdots & \vdots \\
 a_{n1} & a_{n2} & \dots & a_{nn} & b_n
 \end{array} \right)$$

2. Use **elementary row operations** on the augmented matrix to transform the matrix \mathbf{A} to an upper triangular matrix with leading coefficient of each row equals 1.

(Note: the leading coefficient of a row is the leftmost non-zero element of that row).

$$\left(\begin{array}{cccc|c}
 1 & c_{12} & c_{13} & c_{14} & \dots & c_{1n} & d_1 \\
 0 & 1 & c_{23} & c_{24} & \dots & a_{2n} & d_2 \\
 \vdots & \vdots & \vdots & & & \vdots & \vdots \\
 0 & 0 & 0 & \dots & 1 & c_{(n-1)n} & d_{n-1} \\
 0 & 0 & 0 & \dots & 0 & 1 & d_n
 \end{array} \right)$$

3. From the last augmented matrix, $x_n = d_n$ and the rest of the unknowns can be calculated by backward substitution.

Example 1: Use Gauss elimination method to solve the system

$$\begin{array}{rclcl}
 x & - & 2y & + & z & = & 4 \\
 -x & + & 2y & + & z & = & -2 \\
 4x & - & 3y & - & z & = & -4
 \end{array}$$

Solution : The augmented matrix is

$$\begin{pmatrix} 1 & -2 & 1 & | & 4 \\ -1 & 2 & 1 & | & -2 \\ 4 & -3 & -1 & | & -4 \end{pmatrix}$$

$$\begin{pmatrix} 1 & -2 & 1 & | & 4 \\ -1 & 2 & 1 & | & -2 \\ 4 & -3 & -1 & | & -4 \end{pmatrix} \xrightarrow{R_1+R_2} \begin{pmatrix} 1 & -2 & 1 & | & 4 \\ 0 & 0 & 2 & | & 2 \\ 4 & -3 & -1 & | & -4 \end{pmatrix}$$

$$\xrightarrow{R_2 \leftrightarrow R_3} \begin{pmatrix} 1 & -2 & 1 & | & 4 \\ 4 & -3 & -1 & | & -4 \\ 0 & 0 & 2 & | & 2 \end{pmatrix} \xrightarrow{-4R_1+R_2} \begin{pmatrix} 1 & -2 & 1 & | & 4 \\ 0 & 5 & -5 & | & -20 \\ 0 & 0 & 2 & | & 2 \end{pmatrix}$$

$$\xrightarrow{\frac{1}{5}R_2} \begin{pmatrix} 1 & -2 & 1 & | & 4 \\ 0 & 1 & -1 & | & -4 \\ 0 & 0 & 2 & | & 2 \end{pmatrix} \xrightarrow{\frac{1}{2}R_3} \begin{pmatrix} 1 & -2 & 1 & | & 4 \\ 0 & 1 & -1 & | & -4 \\ 0 & 0 & 1 & | & 1 \end{pmatrix}$$

Therefore, $z = 1$.

$$y - z = -4 \Rightarrow y - 1 = -4 \Rightarrow y = -4 + 1 = -3$$

$$x - 2y + z = 4 \Rightarrow x - 2(-3) + 1 = 4 \Rightarrow x + 6 + 1 = 4 \Rightarrow x = 4 - 7 = -3$$

The solution is $\begin{pmatrix} x \\ y \\ z \end{pmatrix} = \begin{pmatrix} -3 \\ -3 \\ 1 \end{pmatrix}$

Example 2: Use Gauss elimination method to solve the system

$$\begin{aligned} 2x - y + z + 3w &= 8 \\ x + 3y + 2z - w &= -2 \\ 3x + y - z - 2w &= 3 \\ x + y + z - w &= 0 \end{aligned}$$

Solution : The augmented matrix is

$$\begin{pmatrix} 2 & -1 & 1 & 3 & | & 8 \\ 1 & 3 & 2 & -1 & | & -2 \\ 3 & 1 & -1 & -2 & | & 3 \\ 1 & 1 & 1 & -1 & | & 0 \end{pmatrix}$$

$$\begin{pmatrix} 2 & -1 & 1 & 3 & | & 8 \\ 1 & 3 & 2 & -1 & | & -2 \\ 3 & 1 & -1 & -2 & | & 3 \\ 1 & 1 & 1 & -1 & | & 0 \end{pmatrix} \xrightarrow{R_1 \leftrightarrow R_4} \begin{pmatrix} 1 & 1 & 1 & -1 & | & 0 \\ 1 & 3 & 2 & -1 & | & -2 \\ 3 & 1 & -1 & -2 & | & 3 \\ 2 & -1 & 1 & 3 & | & 8 \end{pmatrix}$$

$$\xrightarrow{-R_1+R_2} \begin{pmatrix} 1 & 1 & 1 & -1 & | & 0 \\ 0 & 2 & 1 & 0 & | & -2 \\ 3 & 1 & -1 & -2 & | & 3 \\ 2 & -1 & 1 & 3 & | & 8 \end{pmatrix} \xrightarrow{-3R_1+R_3} \begin{pmatrix} 1 & 1 & 1 & -1 & | & 0 \\ 0 & 2 & 1 & 0 & | & -2 \\ 0 & -2 & -4 & 1 & | & 3 \\ 2 & -1 & 1 & 3 & | & 8 \end{pmatrix}$$

$$\begin{aligned}
&\xrightarrow{-2R_1+R_4} \left(\begin{array}{cccc|c} 1 & 1 & 1 & -1 & 0 \\ 0 & 2 & 1 & 0 & -2 \\ 0 & -2 & -4 & 1 & 3 \\ 0 & -3 & -1 & 5 & 8 \end{array} \right) \xrightarrow{R_2+R_3} \left(\begin{array}{cccc|c} 1 & 1 & 1 & -1 & 0 \\ 0 & 2 & 1 & 0 & -2 \\ 0 & 0 & -3 & 1 & 1 \\ 0 & -3 & -1 & 5 & 8 \end{array} \right) \\
&\xrightarrow{2R_4} \left(\begin{array}{cccc|c} 1 & 1 & 1 & -1 & 0 \\ 0 & 2 & 1 & 0 & -2 \\ 0 & 0 & -3 & 1 & 1 \\ 0 & -6 & -2 & 10 & 16 \end{array} \right) \xrightarrow{3R_2+R_4} \left(\begin{array}{cccc|c} 1 & 1 & 1 & -1 & 0 \\ 0 & 2 & 1 & 0 & -2 \\ 0 & 0 & -3 & 1 & 1 \\ 0 & 0 & 1 & 10 & 10 \end{array} \right) \\
&\xrightarrow{3R_4} \left(\begin{array}{cccc|c} 1 & 1 & 1 & -1 & 0 \\ 0 & 2 & 1 & 0 & -2 \\ 0 & 0 & -3 & 1 & 1 \\ 0 & 0 & 3 & 30 & 30 \end{array} \right) \xrightarrow{R_3+R_4} \left(\begin{array}{cccc|c} 1 & 1 & 1 & -1 & 0 \\ 0 & 2 & 1 & 0 & -2 \\ 0 & 0 & -3 & 1 & 1 \\ 0 & 0 & 0 & 31 & 31 \end{array} \right) \\
&\xrightarrow{\frac{1}{2}R_2} \left(\begin{array}{cccc|c} 1 & 1 & 1 & -1 & 0 \\ 0 & 1 & \frac{1}{2} & 0 & -1 \\ 0 & 0 & -3 & 1 & 1 \\ 0 & 0 & 0 & 31 & 31 \end{array} \right) \xrightarrow{-\frac{1}{3}R_3} \left(\begin{array}{cccc|c} 1 & 1 & 1 & -1 & 0 \\ 0 & 1 & \frac{1}{2} & 0 & -1 \\ 0 & 0 & 1 & -\frac{1}{3} & -\frac{1}{3} \\ 0 & 0 & 0 & 31 & 31 \end{array} \right) \\
&\xrightarrow{\frac{1}{31}R_4} \left(\begin{array}{cccc|c} 1 & 1 & 1 & -1 & 0 \\ 0 & 1 & \frac{1}{2} & 0 & -1 \\ 0 & 0 & 1 & -\frac{1}{3} & -\frac{1}{3} \\ 0 & 0 & 0 & 1 & 1 \end{array} \right)
\end{aligned}$$

Therefore, $w = 1$

$$z - \frac{1}{3}w = -\frac{1}{3} \Rightarrow z - \frac{1}{3} = -\frac{1}{3} \Rightarrow z = 0$$

$$y + \frac{1}{2}z = -1 \Rightarrow y + \frac{1}{2}(0) = -1 \Rightarrow y = -1$$

$$x + y + z - w = 0 \Rightarrow x - 1 + 0 - 1 = 0 \Rightarrow x = 2$$

The solution is $\begin{pmatrix} x \\ y \\ z \\ w \end{pmatrix} = \begin{pmatrix} 2 \\ -1 \\ 0 \\ 1 \end{pmatrix}$

3. Gauss-Jordan method

Consider the system of linear equations in n different variables

$$\begin{array}{cccccc} a_{11}x_1 & + & a_{12}x_2 & + & \dots & + & a_{1n}x_n & = & b_1 \\ a_{21}x_1 & + & a_{22}x_2 & + & \dots & + & a_{2n}x_n & = & b_2 \\ \vdots & & \vdots & & & & \vdots & & \vdots \\ a_{n1}x_1 & + & a_{n2}x_2 & + & \dots & + & a_{nn}x_n & = & b_n \end{array} \quad (*)$$

$$\mathbf{A} \mathbf{X} = \mathbf{B}$$

where $\mathbf{A} = \begin{pmatrix} a_{11} & a_{12} & \dots & a_{1n} \\ a_{21} & a_{22} & \dots & a_{2n} \\ \vdots & \vdots & & \vdots \\ a_{n1} & a_{n2} & \dots & a_{nn} \end{pmatrix}$, $\mathbf{X} = \begin{pmatrix} x_1 \\ x_2 \\ \vdots \\ x_n \end{pmatrix}$ and $\mathbf{B} = \begin{pmatrix} b_1 \\ b_2 \\ \vdots \\ b_n \end{pmatrix}$

To solve the system of linear equations (*) by Gauss-Jordan method :

1. Construct the augmented matrix $[\mathbf{A}|\mathbf{B}]$

$$\left(\begin{array}{cccc|c} a_{11} & a_{12} & \dots & a_{1n} & b_1 \\ a_{21} & a_{22} & \dots & a_{2n} & b_2 \\ \vdots & \vdots & & \vdots & \vdots \\ a_{n1} & a_{n2} & \dots & a_{nn} & b_n \end{array} \right)$$

2. Use elementary row operations on the augmented matrix to transform the matrix \mathbf{A} to the identity matrix .

$$\left(\begin{array}{cccc|c} 1 & 0 & \dots & 0 & 0 & d_1 \\ 0 & 1 & \dots & 0 & 0 & d_2 \\ \vdots & \vdots & & \vdots & \vdots & \vdots \\ 0 & 0 & \dots & 1 & 0 & d_{n-1} \\ 0 & 0 & \dots & 0 & 1 & d_n \end{array} \right)$$

3. From the last augmented matrix , $x_i = d_i$ for every $i = 1, 2, \dots, n$

Example 1: Use Gauss-Jordan method to solve the system

$$\begin{array}{cccc} x & + & y & + & z & = & 2 \\ x & - & y & + & 2z & = & 0 \\ 2x & & & + & z & = & 2 \end{array}$$

Solution : The augmented matrix is

$$\left(\begin{array}{ccc|c} 1 & 1 & 1 & 2 \\ 1 & -1 & 2 & 0 \\ 2 & 0 & 1 & 2 \end{array} \right)$$

$$\begin{aligned}
& \left(\begin{array}{ccc|c} 1 & 1 & 1 & 2 \\ 1 & -1 & 2 & 0 \\ 2 & 0 & 1 & 2 \end{array} \right) \xrightarrow{-R_1+R_2} \left(\begin{array}{ccc|c} 1 & 1 & 1 & 2 \\ 0 & -2 & 1 & -2 \\ 2 & 0 & 1 & 2 \end{array} \right) \\
& \xrightarrow{-2R_1+R_3} \left(\begin{array}{ccc|c} 1 & 1 & 1 & 2 \\ 0 & -2 & 1 & -2 \\ 0 & -2 & -1 & -2 \end{array} \right) \xrightarrow{-R_2+R_3} \left(\begin{array}{ccc|c} 1 & 1 & 1 & 2 \\ 0 & -2 & 1 & -2 \\ 0 & 0 & -2 & 0 \end{array} \right) \\
& \xrightarrow{-\frac{1}{2}R_3} \left(\begin{array}{ccc|c} 1 & 1 & 1 & 2 \\ 0 & -2 & 1 & -2 \\ 0 & 0 & 1 & 0 \end{array} \right) \xrightarrow{-R_3+R_2} \left(\begin{array}{ccc|c} 1 & 1 & 1 & 2 \\ 0 & -2 & 0 & -2 \\ 0 & 0 & 1 & 0 \end{array} \right) \\
& \xrightarrow{-R_3+R_1} \left(\begin{array}{ccc|c} 1 & 1 & 0 & 2 \\ 0 & -2 & 0 & -2 \\ 0 & 0 & 1 & 0 \end{array} \right) \xrightarrow{-\frac{1}{2}R_2} \left(\begin{array}{ccc|c} 1 & 1 & 0 & 2 \\ 0 & 1 & 0 & 1 \\ 0 & 0 & 1 & 0 \end{array} \right) \\
& \xrightarrow{-R_2+R_1} \left(\begin{array}{ccc|c} 1 & 0 & 0 & 1 \\ 0 & 1 & 0 & 1 \\ 0 & 0 & 1 & 0 \end{array} \right)
\end{aligned}$$

Therefore , $x = 1$, $y = 1$ and $z = 0$.

The solution is $\begin{pmatrix} x \\ y \\ z \end{pmatrix} = \begin{pmatrix} 1 \\ 1 \\ 0 \end{pmatrix}$

Example 2: Use Gauss-Jordan method to solve the system

$$\begin{aligned}
2x & - y + z + 3w = 8 \\
x & + 3y + 2z - w = -2 \\
3x & + y - z - 2w = 3 \\
x & + y + z - w = 0
\end{aligned}$$

Solution : (Note : This is example 2 in Gauss elimination method)

The augmented matrix is

$$\begin{aligned}
& \left(\begin{array}{cccc|c} 2 & -1 & 1 & 3 & 8 \\ 1 & 3 & 2 & -1 & -2 \\ 3 & 1 & -1 & -2 & 3 \\ 1 & 1 & 1 & -1 & 0 \end{array} \right) \\
& \xrightarrow{R_1 \leftrightarrow R_4} \left(\begin{array}{cccc|c} 1 & 1 & 1 & -1 & 0 \\ 1 & 3 & 2 & -1 & -2 \\ 3 & 1 & -1 & -2 & 3 \\ 2 & -1 & 1 & 3 & 8 \end{array} \right) \\
& \xrightarrow{-R_1+R_2} \left(\begin{array}{cccc|c} 1 & 1 & 1 & -1 & 0 \\ 0 & 2 & 1 & 0 & -2 \\ 3 & 1 & -1 & -2 & 3 \\ 2 & -1 & 1 & 3 & 8 \end{array} \right) \xrightarrow{-3R_1+R_3} \left(\begin{array}{cccc|c} 1 & 1 & 1 & -1 & 0 \\ 0 & 2 & 1 & 0 & -2 \\ 0 & -2 & -4 & 1 & 3 \\ 2 & -1 & 1 & 3 & 8 \end{array} \right) \\
& \xrightarrow{-2R_1+R_4} \left(\begin{array}{cccc|c} 1 & 1 & 1 & -1 & 0 \\ 0 & 2 & 1 & 0 & -2 \\ 0 & -2 & -4 & 1 & 3 \\ 0 & -3 & -1 & 5 & 8 \end{array} \right) \xrightarrow{R_2+R_3} \left(\begin{array}{cccc|c} 1 & 1 & 1 & -1 & 0 \\ 0 & 2 & 1 & 0 & -2 \\ 0 & 0 & -3 & 1 & 1 \\ 0 & -3 & -1 & 5 & 8 \end{array} \right)
\end{aligned}$$

$$\begin{aligned}
&\xrightarrow{2R_4} \left(\begin{array}{cccc|c} 1 & 1 & 1 & -1 & 0 \\ 0 & 2 & 1 & 0 & -2 \\ 0 & 0 & -3 & 1 & 1 \\ 0 & -6 & -2 & 10 & 16 \end{array} \right) \xrightarrow{3R_2+R_4} \left(\begin{array}{cccc|c} 1 & 1 & 1 & -1 & 0 \\ 0 & 2 & 1 & 0 & -2 \\ 0 & 0 & -3 & 1 & 1 \\ 0 & 0 & 1 & 10 & 10 \end{array} \right) \\
&\xrightarrow{3R_4} \left(\begin{array}{cccc|c} 1 & 1 & 1 & -1 & 0 \\ 0 & 2 & 1 & 0 & -2 \\ 0 & 0 & -3 & 1 & 1 \\ 0 & 0 & 3 & 30 & 30 \end{array} \right) \xrightarrow{R_3+R_4} \left(\begin{array}{cccc|c} 1 & 1 & 1 & -1 & 0 \\ 0 & 2 & 1 & 0 & -2 \\ 0 & 0 & -3 & 1 & 1 \\ 0 & 0 & 0 & 31 & 31 \end{array} \right) \\
&\xrightarrow{\frac{1}{31}R_4} \left(\begin{array}{cccc|c} 1 & 1 & 1 & -1 & 0 \\ 0 & 2 & 1 & 0 & -2 \\ 0 & 0 & -3 & 1 & 1 \\ 0 & 0 & 0 & 1 & 1 \end{array} \right) \xrightarrow{-R_4+R_3} \left(\begin{array}{cccc|c} 1 & 1 & 1 & -1 & 0 \\ 0 & 2 & 1 & 0 & -2 \\ 0 & 0 & -3 & 0 & 0 \\ 0 & 0 & 0 & 1 & 1 \end{array} \right) \\
&\xrightarrow{R_4+R_1} \left(\begin{array}{cccc|c} 1 & 1 & 1 & 0 & 1 \\ 0 & 2 & 1 & 0 & -2 \\ 0 & 0 & -3 & 0 & 0 \\ 0 & 0 & 0 & 1 & 1 \end{array} \right) \xrightarrow{-\frac{1}{3}R_3} \left(\begin{array}{cccc|c} 1 & 1 & 1 & 0 & 1 \\ 0 & 2 & 1 & 0 & -2 \\ 0 & 0 & 1 & 0 & 0 \\ 0 & 0 & 0 & 1 & 1 \end{array} \right) \\
&\xrightarrow{-R_3+R_2} \left(\begin{array}{cccc|c} 1 & 1 & 1 & 0 & 1 \\ 0 & 2 & 0 & 0 & -2 \\ 0 & 0 & 1 & 0 & 0 \\ 0 & 0 & 0 & 1 & 1 \end{array} \right) \xrightarrow{-R_3+R_1} \left(\begin{array}{cccc|c} 1 & 1 & 0 & 0 & 1 \\ 0 & 2 & 0 & 0 & -2 \\ 0 & 0 & 1 & 0 & 0 \\ 0 & 0 & 0 & 1 & 1 \end{array} \right) \\
&\xrightarrow{\frac{1}{2}R_2} \left(\begin{array}{cccc|c} 1 & 1 & 0 & 0 & 1 \\ 0 & 1 & 0 & 0 & -1 \\ 0 & 0 & 1 & 0 & 0 \\ 0 & 0 & 0 & 1 & 1 \end{array} \right) \xrightarrow{-R_2+R_1} \left(\begin{array}{cccc|c} 1 & 0 & 0 & 0 & 2 \\ 0 & 1 & 0 & 0 & -1 \\ 0 & 0 & 1 & 0 & 0 \\ 0 & 0 & 0 & 1 & 1 \end{array} \right)
\end{aligned}$$

Therefore, $x = 2$, $y = -1$, $z = 0$ and $w = 1$.

The solution is $\begin{pmatrix} x \\ y \\ z \\ w \end{pmatrix} = \begin{pmatrix} 2 \\ -1 \\ 0 \\ 1 \end{pmatrix}$

CHAPTER FOUR

INTEGRATION

1. Indefinite integral
2. Integration by substitution
3. Integration by parts
4. Integration of rational functions
(Method of partial fractions)

1. Indefinite integral

Definition (Antiderivative): A function G is called an antiderivative of the function f on the interval $[a, b]$ if $G'(x) = f(x)$ for all $x \in [a, b]$.

Examples : What is the antiderivative of the following functions

1. $f(x) = 2x$.

2. $f(x) = \cos x$.

3. $f(x) = \sec^2 x$

4. $f(x) = \frac{1}{x}$

5. $f(x) = e^x$

Solution :

1. $G(x) = x^2 + c$

$$G'(x) = \frac{d}{dx}G(x) = \frac{d}{dx}(x^2 + c) = 2x + 0 = 2x$$

2. $G(x) = \sin x + c$

$$G'(x) = \frac{d}{dx}G(x) = \frac{d}{dx}(\sin x + c) = \cos x$$

3. $G(x) = \tan x + c$

$$G'(x) = \frac{d}{dx}G(x) = \frac{d}{dx}(\tan x + c) = \sec^2 x$$

4. $G(x) = \ln|x| + c$

$$G'(x) = \frac{d}{dx}G(x) = \frac{d}{dx}(\ln|x| + c) = \frac{1}{x}$$

5. $G(x) = e^x + c$

$$G'(x) = \frac{d}{dx}G(x) = \frac{d}{dx}(e^x + c) = e^x$$

Note: If $G_1(x)$ and $G_2(x)$ are both antiderivatives of the function $f(x)$ then $G_1(x) - G_2(x) = \text{constant}$.

Definition (indefinite integral): If $G(x)$ is the antiderivative of $f(x)$ then $\int f(x) dx = G(x) + c$, $\int f(x) dx$ is called the indefinite integral of the function $f(x)$.

Basic Rules of integration :

1. $\int 1 \, dx = x + c$
2. $\int x^n \, dx = \frac{x^{n+1}}{n+1} + c$, where $n \neq -1$
3. $\int \cos x \, dx = \sin x + c$
4. $\int \sin x \, dx = -\cos x + c$
5. $\int \sec^2 x \, dx = \tan x + c$
6. $\int \csc^2 x \, dx = -\cot x + c$
7. $\int \sec x \tan x \, dx = \sec x + c$
8. $\int \csc x \cot x \, dx = -\csc x + c$
9. $\int \frac{1}{x} \, dx = \ln |x| + c$
10. $\int e^x \, dx = e^x + c$
11. $\int \frac{1}{\sqrt{1-x^2}} \, dx = \sin^{-1} x + c$, where $|x| < 1$
12. $\int \frac{1}{1+x^2} \, dx = \tan^{-1} x + c$
13. $\int \frac{1}{x\sqrt{x^2-1}} \, dx = \sec^{-1} x + c$, where $|x| > 1$

Properties of indefinite integral :

1. $\int k f(x) \, dx = k \int f(x) \, dx$, where $k \in \mathbb{R}$
2. $\int (f(x) \pm g(x)) \, dx = \int f(x) \, dx \pm \int g(x) \, dx$

Examples : Evaluate the following integrals

1. $\int \left(4x^2 - \frac{5}{x^3}\right) dx$

Solution : $\int \left(4x^2 - \frac{5}{x^3}\right) dx = \int 4x^2 dx - \int \frac{5}{x^3} dx$
 $= 4 \int x^2 dx - 5 \int x^{-3} dx = 4 \frac{x^3}{3} - 5 \frac{x^{-2}}{-2} + c = \frac{4}{3}x^3 + \frac{5}{2x^2} + c$

2. $\int \left(3x^{\frac{1}{3}} + \frac{1}{\sqrt{x}}\right) dx$

Solution : $\int \left(3x^{\frac{1}{3}} + \frac{1}{\sqrt{x}}\right) dx = 3 \int x^{\frac{1}{3}} dx + \int x^{-\frac{1}{2}} dx$
 $= 3 \left(\frac{x^{\frac{4}{3}}}{\frac{4}{3}}\right) + \left(\frac{x^{\frac{1}{2}}}{\frac{1}{2}}\right) + c = \frac{9}{4}x^{\frac{4}{3}} + 2x^{\frac{1}{2}} + c$

3. $\int (2 \cos x - 3 \sec^2 x) dx$

Solution : $\int (2 \cos x - 3 \sec^2 x) dx = 2 \int \cos x dx - 3 \int \sec^2 x dx$
 $= 2 \sin x - 3 \tan x + c$

4. $\int (7 \sec x \tan x + 5 \csc^2 x) dx$

Solution : $\int (7 \sec x \tan x + 5 \csc^2 x) dx = 7 \int \sec x \tan x dx + 5 \int \csc^2 x dx$
 $= 7 \sec x + 5(-\cot x) + c = 7 \sec x - 5 \cot x + c$

5. $\int \left(\frac{2}{x} - \frac{3}{x^2}\right) dx$

Solution : $\int \left(\frac{2}{x} - \frac{3}{x^2}\right) dx = 2 \int \frac{1}{x} dx - 3 \int x^{-2} dx$
 $= 2 \ln |x| - 3 \left(\frac{x^{-1}}{-1}\right) + c = 2 \ln |x| + \frac{3}{x} + c$

$$6. \int \left(9e^x - \frac{3}{1+x^2} \right) dx$$

$$\begin{aligned} \text{Solution : } \int \left(9e^x - \frac{3}{1+x^2} \right) dx &= 9 \int e^x dx - 3 \int \frac{1}{1+x^2} dx \\ &= 9e^x - 3 \tan^{-1} x + c \end{aligned}$$

$$7. \int \left(\frac{4}{\sqrt{1-x^2}} + \frac{1}{\sqrt[3]{x}} \right) dx$$

$$\begin{aligned} \text{Solution : } \int \left(\frac{4}{\sqrt{1-x^2}} + \frac{1}{\sqrt[3]{x}} \right) dx &= 4 \int \frac{1}{\sqrt{1-x^2}} dx + \int x^{-\frac{1}{3}} dx \\ &= 4 \sin^{-1} x + \left(\frac{x^{\frac{2}{3}}}{\frac{2}{3}} \right) + c = 4 \sin^{-1} x + \frac{3}{2} x^{\frac{2}{3}} + c \end{aligned}$$

The definite integral :

If f is a continuous function on the interval $[a, b]$ and G is the antiderivative of f on $[a, b]$ then the definite integral of f on $[a, b]$ is

$$\int_a^b f(x) dx = [G(x)]_a^b = G(b) - G(a)$$

Examples : Evaluate the following integrals :

$$1. \int_1^3 (3x^2 + 5) dx$$

$$\begin{aligned} \text{Solution : } \int_1^3 (3x^2 + 5) dx &= [x^3 + 5x]_1^3 \\ &= (3^3 + 5 \times 3) - (1^3 + 5 \times 1) = (27 + 15) - (1 + 5) = 36 \end{aligned}$$

$$2. \int_0^1 (2x + e^x) dx$$

$$\begin{aligned} \text{Solution : } \int_0^1 (2x + e^x) dx &= [x^2 + e^x]_0^1 \\ &= (1^2 + e^1) - (0^2 + e^0) = 1 + e - 1 = e \end{aligned}$$

2. Integration by substitution

The main idea of integration by substitution is to use a suitable substitution to transform the given integral to an easier integral that can be solved by one of the basic rules of integration.

Example : Evaluate the integral $\int x(x^2 + 3)^6 dx$

Solution : Use the substitution $u = x^2 + 3$

Then $du = 2x dx \Rightarrow \frac{1}{2} du = x dx$

$$\begin{aligned}\int x(x^2 + 3)^6 dx &= \int u^6 \frac{1}{2} du = \frac{1}{2} \int u^6 du \\ &= \frac{1}{2} \frac{u^7}{7} + c = \frac{(x^2 + 3)^7}{14} + c\end{aligned}$$

By the chain rule $\frac{d}{dx} [f(x)]^{n+1} = (n+1) [f(x)]^n f'(x)$, where $n \neq -1$

Hence $\int [f(x)]^n f'(x) dx = \frac{[f(x)]^{n+1}}{n+1} + c$, where $n \neq -1$

So, the above integral can be solved as follows

$$\int x(x^2 + 3)^6 dx = \frac{1}{2} \int (x^2 + 3)^6 (2x) dx = \frac{1}{2} \frac{(x^2 + 3)^7}{7} + c$$

Basic rules of integrations and their general forms :

1. $\int x^n dx = \frac{x^{n+1}}{n+1} + c$, where $n \neq -1$

$$\int [f(x)]^n f'(x) dx = \frac{[f(x)]^{n+1}}{n+1} + c, \text{ where } n \neq -1$$

2. $\int \frac{1}{x} dx = \ln |x| + c$

$$\int \frac{f'(x)}{f(x)} dx = \ln |f(x)| + c$$

3. $\int e^x dx = e^x + c$

$$\int e^{f(x)} f'(x) dx = e^{f(x)} + c$$

4. $\int \cos x dx = \sin x + c$

$$\int \cos (f(x)) f'(x) dx = \sin (f(x)) + c$$

$$5. \int \sin x \, dx = -\cos x + c$$

$$\int \sin(f(x)) f'(x) \, dx = -\cos(f(x)) + c$$

$$6. \int \sec^2 x \, dx = \tan x + c$$

$$\int \sec^2(f(x)) f'(x) \, dx = \tan(f(x)) + c$$

$$7. \int \csc^2 x \, dx = -\cot x + c$$

$$\int \csc^2(f(x)) f'(x) \, dx = -\cot(f(x)) + c$$

$$8. \int \sec x \tan x \, dx = \sec x + c$$

$$\int \sec(f(x)) \tan(f(x)) f'(x) \, dx = \sec(f(x)) + c$$

$$9. \int \csc x \cot x \, dx = -\csc x + c$$

$$\int \csc(f(x)) \cot(f(x)) f'(x) \, dx = -\csc(f(x)) + c$$

$$10. \int \frac{1}{\sqrt{a^2 - x^2}} \, dx = \sin^{-1}\left(\frac{x}{a}\right) + c, \text{ where } a > 0 \text{ and } |x| < a$$

$$\int \frac{f'(x)}{\sqrt{a^2 - [f(x)]^2}} \, dx = \sin^{-1}\left(\frac{f(x)}{a}\right) + c, \text{ where } a > 0 \text{ and } |f(x)| < a$$

$$11. \int \frac{1}{a^2 + x^2} \, dx = \frac{1}{a} \tan^{-1}\left(\frac{x}{a}\right) + c, \text{ where } a > 0$$

$$\int \frac{f'(x)}{a^2 + [f(x)]^2} \, dx = \frac{1}{a} \tan^{-1}\left(\frac{f(x)}{a}\right) + c, \text{ where } a > 0$$

$$12. \int \frac{1}{x\sqrt{x^2 - a^2}} \, dx = \frac{1}{a} \sec^{-1}\left(\frac{x}{a}\right) + c, \text{ where } a > 0 \text{ and } |x| > a$$

$$\int \frac{f'(x)}{f(x)\sqrt{[f(x)]^2 - a^2}} \, dx = \frac{1}{a} \sec^{-1}\left(\frac{f(x)}{a}\right) + c, \text{ where } |f(x)| > a$$

Examples : Evaluate the following integrals

1. $\int (x^2 + 2x)(x^3 + 3x^2 + 5)^{10} dx$

Solution :

$$\begin{aligned} \int (x^2 + 2x)(x^3 + 3x^2 + 5)^{10} dx &= \frac{1}{3} \int (x^3 + 3x^2 + 5)^{10} [3(x^2 + 2x)] dx \\ &= \frac{1}{3} \int (x^3 + 3x^2 + 5)^{10} (3x^2 + 6x) dx = \frac{1}{3} \frac{(x^3 + 3x^2 + 5)^{11}}{11} + c \end{aligned}$$

2. $\int \frac{x+1}{(x^2+2x+6)^5} dx$

Solution :

$$\begin{aligned} \int \frac{x+1}{(x^2+2x+6)^5} dx &= \int (x^2+2x+6)^{-5} (x+1) dx \\ &= \frac{1}{2} \int (x^2+2x+6)^{-5} (2x+2) dx = \frac{1}{2} \frac{(x^2+2x+6)^{-4}}{-4} + c \end{aligned}$$

3. $\int \frac{x^3+x}{\sqrt{x^4+2x^2+5}} dx$

Solution :

$$\begin{aligned} \int \frac{x^3+x}{\sqrt{x^4+2x^2+5}} dx &= \int (x^4+2x^2+5)^{-\frac{1}{2}} (x^3+x) dx \\ &= \frac{1}{4} \int (x^4+2x^2+5)^{-\frac{1}{2}} (4x^3+4x) dx = \frac{1}{4} \frac{(x^4+2x^2+5)^{\frac{1}{2}}}{\frac{1}{2}} + c \end{aligned}$$

4. $\int \frac{x^2+1}{x^3+3x+8} dx$

Solution :

$$\begin{aligned} \int \frac{x^2+1}{x^3+3x+8} dx &= \frac{1}{3} \int \frac{3(x^2+1)}{x^3+3x+8} dx \\ &= \frac{1}{3} \int \frac{3x^2+3}{x^3+3x+8} dx = \frac{1}{3} \ln|x^3+3x+8| + c \end{aligned}$$

5. $\int \frac{\sin x}{1+\cos x} dx$

Solution :

$$\int \frac{\sin x}{1+\cos x} dx = - \int \frac{-\sin x}{1+\cos x} dx = - \ln|1+\cos x| + c$$

$$6. \int \frac{e^{5x}}{e^{5x} - 2} dx$$

Solution :

$$\int \frac{e^{5x}}{e^{5x} - 2} dx = \frac{1}{5} \int \frac{5e^{5x}}{e^{5x} - 2} dx = \frac{1}{5} \ln |e^{5x} - 2| + c$$

$$7. \int (3x^2 + 1) \sin(x^3 + x + 1) dx$$

Solution :

$$\begin{aligned} \int (3x^2 + 1) \sin(x^3 + x + 1) dx &= \int \sin(x^3 + x + 1) (3x^2 + 1) dx \\ &= -\cos(x^3 + x + 1) + c \end{aligned}$$

$$8. \int \frac{\sec^2 \sqrt{x}}{\sqrt{x}} dx$$

Solution :

$$\begin{aligned} \int \frac{\sec^2 \sqrt{x}}{\sqrt{x}} dx &= \int \sec^2 \sqrt{x} \frac{1}{\sqrt{x}} dx \\ &= 2 \int \sec^2 \sqrt{x} \frac{1}{2\sqrt{x}} dx = 2 \tan \sqrt{x} + c \end{aligned}$$

$$9. \int x \csc(x^2 + 2) \cot(x^2 + 2) dx$$

Solution :

$$\begin{aligned} \int x \csc(x^2 + 2) \cot(x^2 + 2) dx &= \int \csc(x^2 + 2) \cot(x^2 + 2) x dx \\ \frac{1}{2} \int \csc(x^2 + 2) \cot(x^2 + 2) (2x) dx &= -\frac{1}{2} \csc(x^2 + 2) + c \end{aligned}$$

$$10. \int e^{7 \sin x} \cos x dx$$

Solution :

$$\int e^{7 \sin x} \cos x dx = \frac{1}{7} \int e^{7 \sin x} (7 \cos x) dx = \frac{1}{7} e^{7 \sin x} + c$$

$$11. \int \frac{e^{\frac{3}{x}}}{x^2} dx$$

Solution :

$$\int \frac{e^{\frac{3}{x}}}{x^2} dx = \int e^{\frac{3}{x}} \frac{1}{x^2} dx$$

$$= -\frac{1}{3} \int e^{\frac{3}{x}} \frac{-3}{x^2} dx = -\frac{1}{3} e^{\frac{3}{x}} + c$$

12. $\int \frac{x}{\sqrt{9-x^4}} dx$

Solution :

$$\begin{aligned} \int \frac{x}{\sqrt{9-x^4}} dx &= \int \frac{x}{\sqrt{3^2-(x^2)^2}} dx \\ &= \frac{1}{2} \int \frac{2x}{\sqrt{3^2-(x^2)^2}} dx = \frac{1}{2} \sin^{-1} \left(\frac{x^2}{3} \right) + c \end{aligned}$$

13. $\int \frac{1}{x^2-6x+10} dx$

Solution

$$\begin{aligned} \int \frac{1}{x^2-6x+10} dx &= \int \frac{1}{(x^2-6x+9)+(10-9)} dx \\ &= \int \frac{1}{(x-3)^2+1} dx = \tan^{-1}(x-3) + c \end{aligned}$$

14. $\int \frac{3}{x^2+2x+5} dx$

Solution

$$\begin{aligned} \int \frac{3}{x^2+2x+5} dx &= \int \frac{3}{(x^2+2x+1)+(5-1)} dx \\ &= 3 \int \frac{1}{(x+1)^2+2^2} dx = 3 \frac{1}{2} \tan^{-1} \left(\frac{x+1}{2} \right) + c \end{aligned}$$

15. $\int \frac{1}{x \ln|x|} dx$

Solution

$$\int \frac{1}{x \ln|x|} dx = \int \frac{\frac{1}{x}}{\ln|x|} dx = \ln|\ln|x|| + c$$

16. $\int \frac{2x-1}{x^2+1} dx$

Solution :

$$\begin{aligned} \int \frac{2x-1}{x^2+1} dx &= \int \frac{2x}{x^2+1} dx - \int \frac{1}{x^2+1} dx \\ &= \ln(x^2+1) - \tan^{-1} x + c \end{aligned}$$

3. Integration by parts

It is used to solve an integral of a product of two functions using the formula

$$\int u \, dv = u \, v - \int v \, du$$

Examples : Evaluate the following integrals

1. $\int x e^x \, dx$

Solution : Using integration by parts

$$\begin{aligned} u &= x & dv &= e^x \, dx \\ du &= dx & v &= e^x \end{aligned}$$

$$\int x e^x \, dx = x e^x - \int e^x \, dx = x e^x - e^x + c$$

2. $\int x^2 \sin x \, dx$

Solution : Using integration by parts

$$\begin{aligned} u &= x^2 & dv &= \sin x \, dx \\ du &= 2x \, dx & v &= -\cos x \end{aligned}$$

$$\int x^2 \sin x \, dx = -x^2 \cos x - \int 2x(-\cos x) \, dx$$

$$= -x^2 \cos x + 2 \int x \cos x \, dx$$

Using integration by parts again

$$\begin{aligned} u &= x & dv &= \cos x \, dx \\ du &= dx & v &= \sin x \end{aligned}$$

$$\int x^2 \sin x \, dx = -x^2 \cos x + 2 \left(x \sin x - \int \sin x \, dx \right)$$

$$= -x^2 \cos x + 2(x \sin x - (-\cos x)) + c$$

$$= -x^2 \cos x + 2x \sin x + 2 \cos x + c$$

3. $\int x \ln |x| \, dx$

Solution : Using integration by parts

$$\begin{aligned} u &= \ln |x| & dv &= x \, dx \\ du &= \frac{1}{x} \, dx & v &= \frac{x^2}{2} \end{aligned}$$

$$\begin{aligned}\int x \ln|x| dx &= \frac{x^2}{2} \ln|x| - \int \frac{1}{x} \frac{x^2}{2} dx \\ &= \frac{x^2}{2} \ln|x| - \frac{1}{2} \int x dx = \frac{x^2}{2} \ln|x| - \frac{1}{2} \frac{x^2}{2} + c = \frac{x^2}{2} \ln|x| - \frac{x^2}{4} + c\end{aligned}$$

4. $\int \ln|x| dx$

Solution : Using integration by parts

$$\begin{aligned}u &= \ln|x| & dv &= dx \\ du &= \frac{1}{x} dx & v &= x\end{aligned}$$

$$\begin{aligned}\int \ln|x| dx &= x \ln|x| - \int x \frac{1}{x} dx = x \ln|x| - \int 1 dx \\ &= x \ln|x| - x + c\end{aligned}$$

5. $\int \tan^{-1} x dx$

Solution : Using integration by parts

$$\begin{aligned}u &= \tan^{-1} x & dv &= dx \\ du &= \frac{1}{1+x^2} dx & v &= x\end{aligned}$$

$$\begin{aligned}\int \tan^{-1} x dx &= x \tan^{-1} x - \int x \frac{1}{1+x^2} dx \\ &= x \tan^{-1} x - \frac{1}{2} \int \frac{2x}{1+x^2} dx = x \tan^{-1} x - \frac{1}{2} \ln(1+x^2) + c\end{aligned}$$

6. $\int \sin^{-1} x dx$

Solution : Using integration by parts

$$\begin{aligned}u &= \sin^{-1} x & dv &= dx \\ du &= \frac{1}{\sqrt{1-x^2}} dx & v &= x\end{aligned}$$

$$\begin{aligned}\int \sin^{-1} x dx &= x \sin^{-1} x - \int \frac{x}{\sqrt{1-x^2}} dx \\ &= x \sin^{-1} x + \frac{1}{2} \int (1-x^2)^{-\frac{1}{2}} (-2x) dx = x \sin^{-1} x + \frac{1}{2} \frac{(1-x^2)^{\frac{1}{2}}}{-\frac{1}{2}} + c \\ &= x \sin^{-1} x + \sqrt{1-x^2} + c\end{aligned}$$

$$7. \int e^x \sin x \, dx$$

Solution : Using integration by parts

$$\begin{aligned} u &= \sin x & dv &= e^x \, dx \\ du &= \cos x \, dx & v &= e^x \end{aligned}$$

$$\int e^x \sin x \, dx = e^x \sin x - \int e^x \cos x \, dx$$

Using integration by parts again

$$\begin{aligned} u &= \cos x & dv &= e^x \, dx \\ du &= -\sin x \, dx & v &= e^x \end{aligned}$$

$$\int e^x \sin x \, dx = e^x \sin x - \left(e^x \cos x - \int e^x (-\sin x) \, dx \right)$$

$$\int e^x \sin x \, dx = e^x \sin x - \left(e^x \cos x + \int e^x \sin x \, dx \right)$$

$$\int e^x \sin x \, dx = e^x \sin x - e^x \cos x - \int e^x \sin x \, dx$$

$$2 \int e^x \sin x \, dx = e^x \sin x - e^x \cos x + c$$

$$\int e^x \sin x \, dx = \frac{1}{2} (e^x \sin x - e^x \cos x + c)$$

4. Integral of rational functions (The method of partial fractions)

Method of partial fractions is used to solve integrals of the form $\int \frac{P(x)}{Q(x)} dx$ where $P(x)$, $Q(x)$ are polynomials and degree $P(x) <$ degree $Q(x)$.
If degree $P(x) \geq$ degree $Q(x)$ use long division of polynomials .

Definition (linear factor) :

A linear factor is a polynomial of degree 1.
It has the form $ax + b$ where $a, b \in \mathbb{R}$ and $a \neq 0$.

Examples :

x , $3x$, $2x - 7$ are examples of linear factors .

Definition (irreducible quadratic) :

An irreducible quadratic is a polynomial of degree 2.
It has the form $ax^2 + bx + c$ where $a, b, c \in \mathbb{R}$, $a \neq 0$ and $b^2 - 4ac < 0$.

Examples :

1. $x^2 + 9$ and $x^2 + x + 1$ are examples of irreducible quadratics.
2. $x^2 = x \cdot x$ and $x^2 - 1 = (x - 1)(x + 1)$ are reducible quadratics .

How to write $\frac{P(x)}{Q(x)}$ as partial fractions decomposition ?

Write $Q(x)$ as a product of linear factors and irreducible quadratics (if possible).

If $Q(x) = (a_1x + a_2)^m (b_1x^2 + b_2x + b_3)^n$ where $m, n \in \mathbb{N}$ then

$$\frac{P(x)}{Q(x)} = \frac{A_1}{a_1x + a_2} + \frac{A_2}{(a_1x + a_2)^2} + \dots + \frac{A_m}{(a_1x + a_2)^m} + \frac{B_1x + C_1}{b_1x^2 + b_2x + b_3} + \frac{B_2x + C_2}{(b_1x^2 + b_2x + b_3)^2} + \dots + \frac{B_nx + C_n}{(b_1x^2 + b_2x + b_3)^n}$$

Where $A_1, A_2, \dots, A_m, B_1, B_2, \dots, B_n, C_1, C_2, \dots, C_n \in \mathbb{R}$.

Examples : Write the partial fractions decomposition of the following

1. $\frac{2x + 6}{x^2 - 2x - 3}$

Solution :

$$\frac{2x + 6}{x^2 - 2x - 3} = \frac{2x + 6}{(x - 3)(x + 1)} = \frac{A_1}{x - 3} + \frac{A_2}{x + 1}$$

$$2. \frac{x+5}{x^2+4x+4}$$

Solution :

$$\frac{x+5}{x^2+4x+4} = \frac{x+5}{(x+2)^2} = \frac{A_1}{x+2} + \frac{A_2}{(x+2)^2}$$

$$3. \frac{x^2+1}{x^4+4x^2}$$

Solution :

$$\frac{x^2+1}{x^4+4x^2} = \frac{x^2+1}{x^2(x^2+4)} = \frac{A_1}{x} + \frac{A_2}{x^2} + \frac{B_1x+C_1}{x^2+4}$$

$$4. \frac{2x+7}{(x+1)(x^2+9)^2}$$

Solution :

$$\frac{2x+7}{(x+1)(x^2+9)^2} = \frac{A_1}{x+1} + \frac{B_1x+C_1}{x^2+9} + \frac{B_2x+C_2}{(x^2+9)^2}$$

$$5. \frac{x}{(x-1)(x^2-1)}$$

Solution :

$$\frac{x}{(x-1)(x^2-1)} = \frac{x}{(x+1)(x-1)^2} = \frac{A_1}{x+1} + \frac{A_2}{x-1} + \frac{A_3}{(x-1)^2}$$

$$6. \frac{x^3+x}{x^2-1}$$

Solution : Using long division of polynomials

$$\frac{x^3+x}{x^2-1} = \frac{(x^3-x)+2x}{x^2-1} = \frac{x(x^2-1)+2x}{x^2-1} = x + \frac{2x}{x^2-1}$$

$$\frac{x^3+x}{x^2-1} = x + \frac{2x}{(x-1)(x+1)} = x + \frac{A_1}{x-1} + \frac{A_2}{x+1}$$

Examples : Evaluate the following integrals

$$1. \int \frac{x+3}{(x-3)(x-2)} dx$$

Solution : Using the method of partial fractions

$$\frac{x+3}{(x-3)(x-2)} = \frac{A_1}{x-3} + \frac{A_2}{x-2}$$

$$\frac{x+3}{(x-3)(x-2)} = \frac{A_1(x-2)}{(x-3)(x-2)} + \frac{A_2(x-3)}{(x-2)(x-3)}$$

$$\frac{x+3}{(x-3)(x-2)} = \frac{A_1(x-2) + A_2(x-3)}{(x-3)(x-2)}$$

$$x+3 = A_1(x-2) + A_2(x-3) = A_1x - 2A_1 + A_2x - 3A_2$$

$$x+3 = (A_1 + A_2)x + (-2A_1 - 3A_2)$$

By comparing the coefficients of the polynomials

$$\begin{cases} A_1 + A_2 = 1 & \longrightarrow (1) \\ -2A_1 - 3A_2 = 3 & \longrightarrow (2) \end{cases}$$

Multiplying equation (1) by 2 and adding it to equation (2) :

$$-A_2 = 5 \implies A_2 = -5$$

$$\text{From Equation (1) : } A_1 - 5 = 1 \implies A_1 = 1 + 5 = 6$$

$$\frac{x+3}{(x-3)(x-2)} = \frac{6}{x-3} + \frac{-5}{x-2}$$

$$\int \frac{x+3}{(x-3)(x-2)} dx = \int \left(\frac{6}{x-3} - \frac{5}{x-2} \right) dx$$

$$= 6 \int \frac{1}{x-3} dx - 5 \int \frac{1}{x-2} dx = 6 \ln|x-3| - 5 \ln|x-2| + c$$

$$2. \int \frac{x+1}{x^2-1} dx$$

Solution :

$$\int \frac{x+1}{x^2-1} dx = \int \frac{x+1}{(x-1)(x+1)} dx$$

$$= \int \frac{1}{x-1} dx = \ln|x-1| + c$$

$$3. \int \frac{x-1}{(x+1)(x+2)^2} dx$$

Solution : Using the method of partial fractions

$$\frac{x-1}{(x+1)(x+2)^2} = \frac{A_1}{x+1} + \frac{A_2}{x+2} + \frac{A_3}{(x+2)^2}$$

$$\frac{x-1}{(x+1)(x+2)^2} = \frac{A_1(x+2)^2}{(x+1)(x+2)^2} + \frac{A_2(x+1)(x+2)}{(x+1)(x+2)^2} + \frac{A_3(x+1)}{(x+1)(x+2)^2}$$

$$x-1 = A_1(x+2)^2 + A_2(x+1)(x+2) + A_3(x+1)$$

$$x-1 = A_1(x^2 + 4x + 4) + A_2(x^2 + 3x + 2) + A_3(x+1)$$

$$x-1 = A_1x^2 + 4A_1x + 4A_1 + A_2x^2 + 3A_2x + 2A_2 + A_3x + A_3$$

$$x-1 = (A_1 + A_2)x^2 + (4A_1 + 3A_2 + A_3)x + (4A_1 + 2A_2 + A_3)$$

By comparing the coefficients of the polynomials

$$\begin{cases} A_1 + A_2 = 0 & \rightarrow (1) \\ 4A_1 + 3A_2 + A_3 = 1 & \rightarrow (2) \\ 4A_1 + 2A_2 + A_3 = -1 & \rightarrow (3) \end{cases}$$

Subtracting equation (3) from equation (2) : $A_2 = 2$

From equation (1) : $A_1 + 2 = 0 \Rightarrow A_1 = -2$

From equation (2) :

$$(4 \times -2) + (3 \times 2) + A_3 = 1 \Rightarrow -8 + 6 + A_3 = 1 \Rightarrow A_3 = 3$$

$$\frac{x-1}{(x+1)(x+2)^2} = \frac{-2}{x+1} + \frac{2}{x+2} + \frac{3}{(x+2)^2}$$

$$\int \frac{x-1}{(x+1)(x+2)^2} dx = \int \left(\frac{-2}{x+1} + \frac{2}{x+2} + \frac{3}{(x+2)^2} \right) dx$$

$$= -2 \int \frac{1}{x+1} dx + 2 \int \frac{1}{x+2} dx + 3 \int (x+2)^{-2} dx$$

$$= -2 \ln|x+1| + 2 \ln|x+2| + 3 \frac{(x+2)^{-1}}{-1} + c$$

$$= -2 \ln|x+1| + 2 \ln|x+2| - \frac{3}{x+2} + c$$

4. $\int \frac{2x^2 + 3x + 2}{x^3 + x} dx$

Solution : Using the method of partial functions

$$\frac{2x^2 + 3x + 2}{x^3 + x} = \frac{2x^2 + 3x + 2}{x(x^2 + 1)} = \frac{A}{x} + \frac{Bx + C}{x^2 + 1}$$

$$\frac{2x^2 + 3x + 2}{x^3 + x} = \frac{A(x^2 + 1)}{x(x^2 + 1)} + \frac{x(Bx + C)}{x(x^2 + 1)}$$

$$2x^2 + 3x + 2 = A(x^2 + 1) + x(Bx + C) = Ax^2 + A + Bx^2 + Cx$$

$$2x^2 + 3x + 2 = (A + B)x^2 + Cx + A$$

By comparing the coefficients of the polynomials

$$\begin{cases} A + B = 2 & \rightarrow (1) \\ C = 3 & \rightarrow (2) \\ A = 2 & \rightarrow (3) \end{cases}$$

From equation (1) : $2 + B = 2 \Rightarrow B = 0$

$$\frac{2x^2 + 3x + 2}{x^3 + x} = \frac{2}{x} + \frac{3}{x^2 + 1}$$

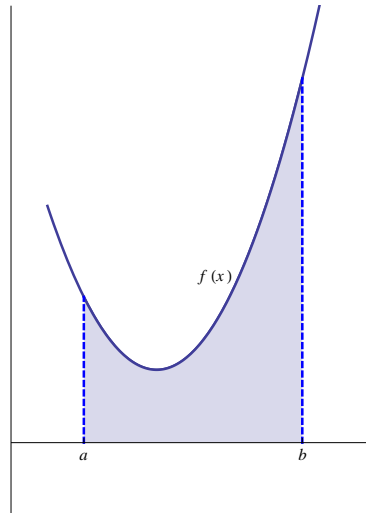
$$\begin{aligned}\int \frac{2x^2 + 3x + 2}{x^3 + x} dx &= \int \left(\frac{2}{x} + \frac{3}{x^2 + 1} \right) dx \\ &= 2 \int \frac{1}{x} dx + 3 \int \frac{1}{x^2 + 1} dx \\ &= 2 \ln |x| + 3 \tan^{-1} x + c\end{aligned}$$

CHAPTER FIVE

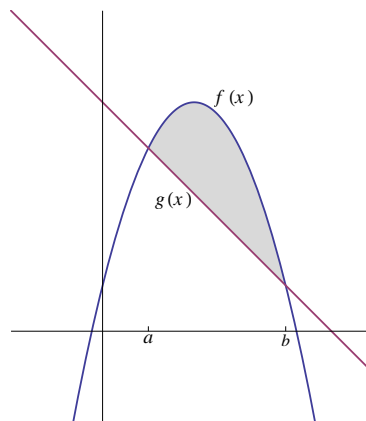
APPLICATIONS OF INTEGRATION

1. Area
2. Volume of a solid of revolution
(using disk or washer method)
3. Volume of a solid of revolution
(using cylindrical shells method)

1. Area



In the above figure the area under the graph of $f(x)$ on the interval $[a, b]$ is given by the definite integral $\int_a^b f(x) dx$



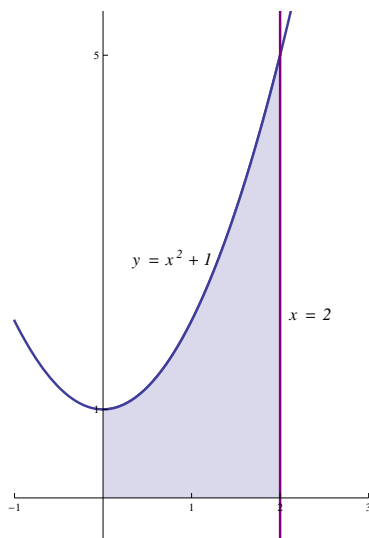
In the above figure the graphs of $f(x)$ and $g(x)$ intersect at the points $x = a$ and $x = b$.

The area bounded by the graphs of the curves of $f(x)$ and $g(x)$ equals

$$\int_a^b f(x) dx - \int_a^b g(x) dx = \int_a^b [f(x) - g(x)] dx$$

Examples :

1. Find the area of the region bounded by the graphs of $x = 0$, $y = 0$, $x = 2$ and $y = x^2 + 1$



$y = x^2 + 1$ is a parabola with vertex $(0, 1)$ and opens upwards.

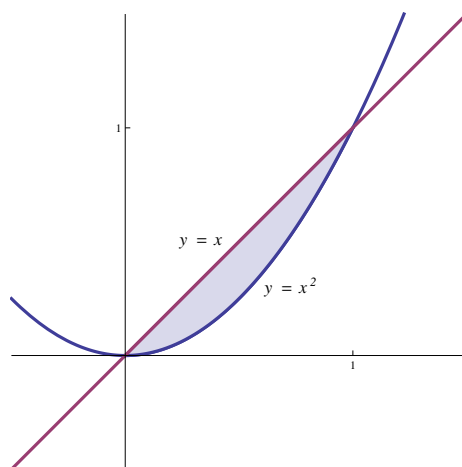
$x = 0$ is the y-axis and $y = 0$ is the x-axis.

$x = 2$ is a straight line parallel to the y-axis and passing through $(2, 0)$

$$\text{Area} = \int_0^2 (x^2 + 1) dx = \left[\frac{x^3}{3} + x \right]_0^2$$

$$\text{Area} = \left(\frac{2^3}{3} + 2 \right) - \left(\frac{0^3}{3} + 0 \right) = \frac{8}{3} + 2 = \frac{14}{3}$$

2. Find the area of the region bounded by the graphs of $y = x$ and $y = x^2$



$y = x^2$ is a parabola with vertex $(0, 0)$ and opens upwards.

$y = x$ is a straight line passing through the origin with slope equals 1.

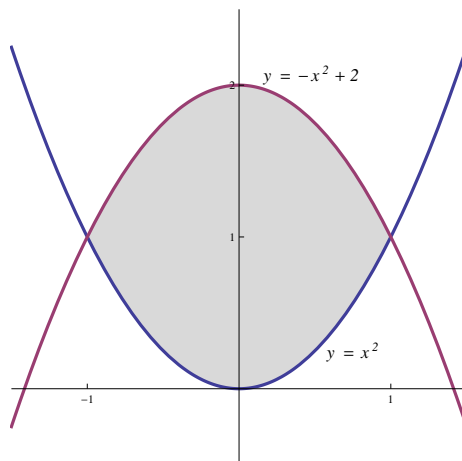
Points of intersection of $y = x^2$ and $y = x$:

$$x^2 = x \Rightarrow x^2 - x = 0 \Rightarrow x(x - 1) = 0 \Rightarrow x = 0, x = 1$$

$$\text{Area} = \int_0^1 (x - x^2) dx = \left[\frac{x^2}{2} - \frac{x^3}{3} \right]_0^1$$

$$\text{Area} = \left(\frac{1^2}{2} - \frac{1^3}{3} \right) - \left(\frac{0^2}{2} - \frac{0^3}{3} \right) = \frac{1}{2} - \frac{1}{3} = \frac{1}{6}$$

3. Find the area of the region bounded by the graphs of $y = x^2$ and $y = -x^2 + 2$



$y = -x^2 + 2$ is a parabola with vertex $(0, 2)$ and opens downwards

$y = x^2$ is a parabola with vertex $(0, 0)$ and opens upwards.

Points of intersection of $y = x^2$ and $y = -x^2 + 2$:

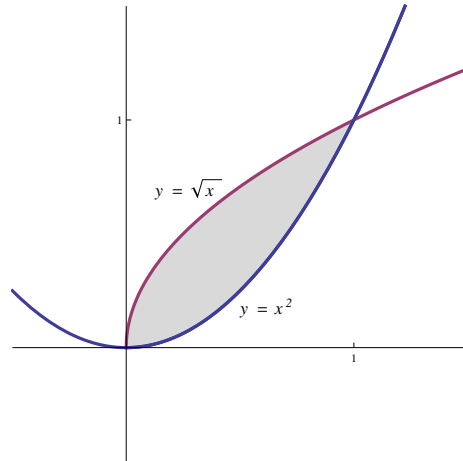
$$x^2 = -x^2 + 2 \Rightarrow 2x^2 = 2 \Rightarrow x^2 = 1 \Rightarrow x = \pm 1$$

$$\text{Area} = \int_{-1}^1 [(-x^2 + 2) - x^2] dx = \int_{-1}^1 (2 - 2x^2) dx$$

$$\text{Area} = \left[2x - \frac{2x^3}{3} \right]_{-1}^1 = \left[\left(2 - \frac{2}{3} \right) - \left(-2 + \frac{2}{3} \right) \right]$$

$$\text{Area} = 2 - \frac{2}{3} + 2 - \frac{2}{3} = 4 - \frac{4}{3} = \frac{12 - 4}{3} = \frac{8}{3}$$

4. Find the area of the region bounded by the graphs of $y = x^2$ and $y = \sqrt{x}$



$y = x^2$ is a parabola with vertex $(0, 0)$ and opens upwards.

$y = \sqrt{x} \Rightarrow x = y^2$ is the upper half of the parabola with vertex $(0, 0)$ and opens to the right.

Points of intersection of $y = x^2$ and $y = \sqrt{x}$:

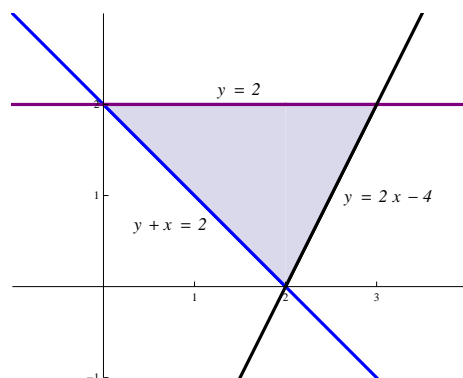
$$x^2 = \sqrt{x} \Rightarrow x^4 = x \Rightarrow x^4 - x = 0 \Rightarrow x(x^3 - 1) = 0$$

$$\Rightarrow x = 0, x^3 = 1 \Rightarrow x = 0, x = 1$$

$$\text{Area} = \int_0^1 (\sqrt{x} - x^2) dx = \left[\frac{x^{\frac{3}{2}}}{\frac{3}{2}} - \frac{x^3}{3} \right]_0^1 = \left[\frac{2}{3}x^{\frac{3}{2}} - \frac{x^3}{3} \right]_0^1$$

$$\text{Area} = \left(\frac{2}{3} - \frac{1}{3} \right) - (0 - 0) = \frac{1}{3}$$

5. Find the area of the region bounded by the graphs of $x + y = 2$, $y = 2$ and $y = 2x - 4$



$y = 2$, $y = 2x - 4$ and $y = -x + 2$ are three straight lines.

Point of intersection of $y = 2$ and $y = -x + 2$:

$$-x + 2 = 2 \Rightarrow x = 0$$

$y = 2$ and $y = -x + 2$ intersect at the point $(0, 2)$.

Point of intersection of $y = 2$ and $y = 2x - 4$:

$$2x - 4 = 2 \Rightarrow x = 3$$

$y = 2$ and $y = 2x - 4$ intersect at the point $(3, 2)$

Point of intersection of $y = -x + 2$ and $y = 2x - 4$:

$$2x - 4 = -x + 2 \Rightarrow 3x = 6 \Rightarrow x = 2$$

$y = -x + 2$ and $y = 2x - 4$ intersect at the point $(2, 0)$.

$$\text{Area} = \int_0^2 [2 - (-x + 2)] dx + \int_2^3 [2 - (2x - 4)] dx$$

$$\text{Area} = \int_0^2 x dx + \int_2^3 (6 - 2x) dx = \left[\frac{x^2}{2} \right]_0^2 + [6x - x^2]_2^3$$

$$\text{Area} = \left[\frac{2^2}{2} - \frac{0^2}{2} \right] + [(6 \times 3 - 3^2) - (6 \times 2 - 2^2)]$$

$$\text{Area} = (2 - 0) + [(18 - 9) - (12 - 4)] = 2 + (9 - 8) = 2 + 1 = 3$$

Another solution :

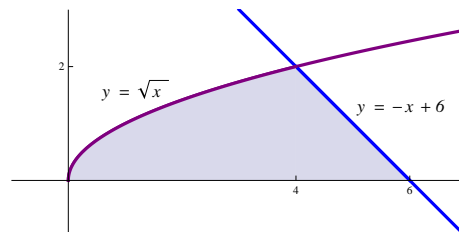
$$y + x = 2 \Rightarrow x = -y + 2 \text{ and } y = 2x - 4 \Rightarrow 2x = y + 4 \Rightarrow x = \frac{1}{2}y + 2$$

$$\text{Area} = \int_0^2 \left[\left(\frac{1}{2}y + 2 \right) - (-y + 2) \right] dy$$

$$\text{Area} = \int_0^2 \left(\frac{1}{2}y + y \right) dy = \int_0^2 \frac{3}{2}y dy$$

$$\text{Area} = \frac{3}{2} \left[\frac{y^2}{2} \right]_0^2 = \frac{3}{2} \left[\frac{2^2}{2} - \frac{0^2}{2} \right] = \frac{3}{2} \times 2 = 3$$

6. Find the area of the region bounded by the graphs of $y = 0$, $y = -x + 6$ and $y = \sqrt{x}$



$y = -x + 6$ is a straight line passing through $(0, 6)$ with slope equals -1 .

$y = \sqrt{x} \Rightarrow x = y^2$ is the upper half of the parabola with vertex $(0, 0)$ and opens to the right.

Points of intersection of $x = y^2$ and $x = -y + 6$:

$$y^2 = -y + 6 \Rightarrow y^2 + y - 6 = 0 \Rightarrow (y - 2)(y + 3) = 0 \Rightarrow y = 2, y = -3$$

(Note that $y = -3$ is not in the desired region).

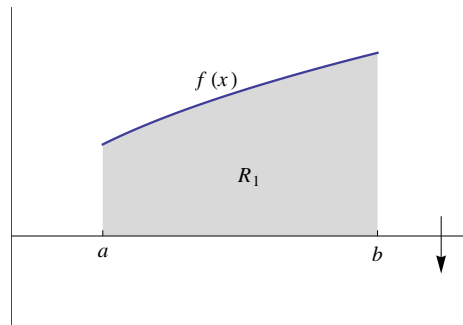
$$\text{Area} = \int_0^2 [(-y + 6) - y^2] dy = \left[6y - \frac{y^2}{2} - \frac{y^3}{3} \right]_0^2$$

$$\text{Area} = \left(12 - \frac{4}{2} - \frac{8}{3} \right) - (0 - 0 - 0) = 12 - 2 - \frac{8}{3} = 10 - \frac{8}{3} = \frac{30 - 8}{3} = \frac{22}{3}$$

2. Volume of a solid of revolution (using disk or washer method)

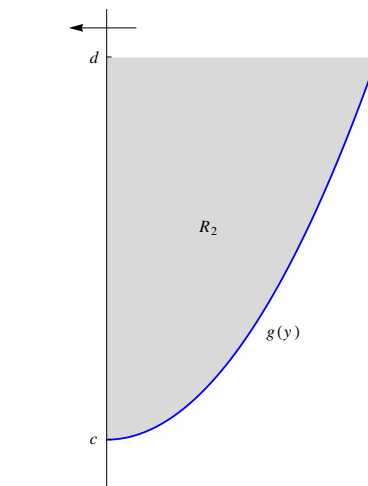
1. Disk Method

Recall that the volume of a right circular cylinder equals $\pi r^2 h$ where r is the radius of the base (which is a circle) and h is the height of the cylinder .



In the above figure R_1 is the region bounded by the graphs of the curves of $f(x)$, $x = a$, $x = b$ and the x -axis.

Using disk method , the volume of the solid of revolution generated by revolving the region R_1 around the x -axis is $V = \pi \int_a^b [f(x)]^2 dx$

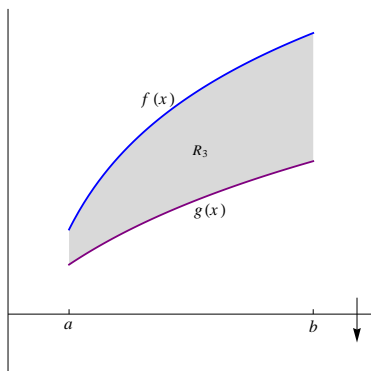


In the above figure R_2 is the region bounded by the graphs of the curves of $g(y)$, $y = d$ and the y -axis.

Using disk method , the volume of the solid of revolution generated by revolving the region R_2 around the y -axis is $V = \pi \int_c^d [g(y)]^2 dy$

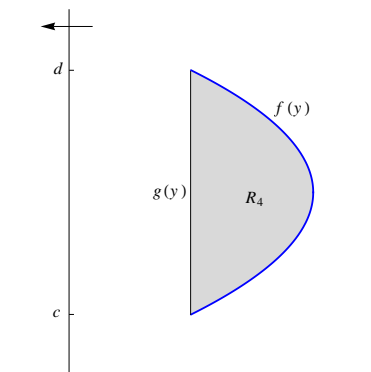
2. Washer Method

Volume of a washer = $\pi [(outer\ radius)^2 - (inner\ radius)^2]$ (thickness)



In the above figure R_3 is the region bounded by the graphs of the curves of $f(x)$, $g(x)$, $x = a$ and $x = b$.

Using washer method, the volume of the solid of revolution generated by revolving the region R_3 around the x -axis is $V = \pi \int_a^b [(f(x))^2 - (g(x))^2] dx$

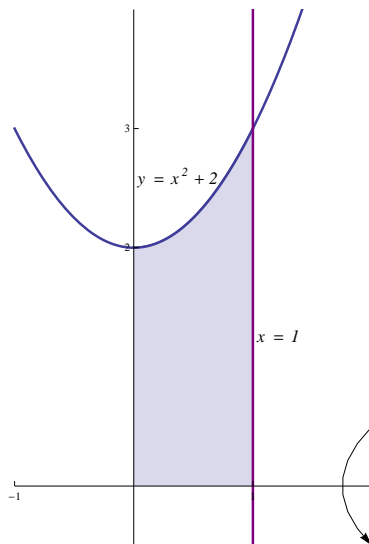


In the above figure R_4 is the region bounded by the graphs of the curves of $f(y)$ and $g(y)$, where $f(y)$ and $g(y)$ intersect at the points $y = c$ and $y = d$.

Using washer method, the volume of the solid of revolution generated by revolving the region R_4 around the y -axis is $V = \pi \int_c^d [(f(y))^2 - (g(y))^2] dy$

Examples : Use Disk or washer method to calculate the volume of the solid of revolution generated by revolving the region bounded by the graphs of :

1. $y = x^2 + 2$, $y = 0$, $x = 0$, $x = 1$, around the x -axis



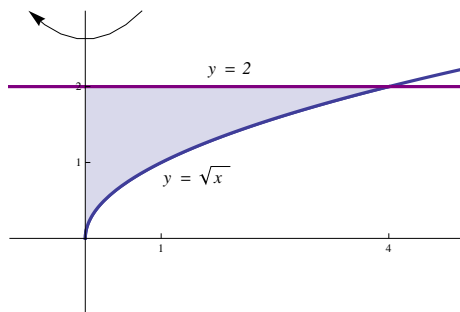
$y = x^2 + 2$ is a parabola with vertex $(0, 2)$ and opens upwards.

$x = 1$ is a straight line parallel to the y -axis and passing through $(1, 0)$

Using Disk method :

$$\begin{aligned} \text{Volume} &= \pi \int_0^1 (x^2 + 2)^2 dx = \pi \int_0^1 (x^4 + 4x^2 + 4) dx \\ &= \pi \left[\frac{x^5}{5} + \frac{4x^3}{3} + 4x \right]_0^1 = \pi \left[\left(\frac{1}{5} + \frac{4}{3} + 4 \right) - (0 + 0 + 0) \right] = \frac{83\pi}{15} \end{aligned}$$

2. $y = \sqrt{x}$, $y = 2$ and $x = 0$, around the y -axis



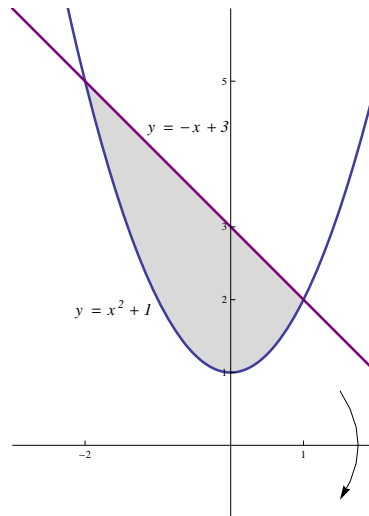
$y = \sqrt{x}$ is the upper half of the parabola $x = y^2$ with vertex $(0, 0)$ and opens to the right

$y = 2$ is a straight line parallel to the x -axis and passing through $(0, 2)$

Using Disk method :

$$\begin{aligned} \text{Volume} &= \pi \int_0^2 (y^2)^2 dy = \pi \int_0^2 y^4 dy \\ &= \pi \left[\frac{y^5}{5} \right]_0^2 = \pi \left[\frac{2^5}{5} - 0 \right] = \frac{32\pi}{5} \end{aligned}$$

3. $y = x^2 + 1$ and $y = -x + 3$, around the x -axis



$y = x^2 + 1$ is a parabola with vertex $(0, 1)$ and opens upwards.

$y = -x + 3$ is a straight line with slope -1 and passing through $(0, 3)$.

Points of intersection of $y = x^2 + 1$ and $y = -x + 3$:

$$x^2 + 1 = -x + 3 \Rightarrow x^2 + x - 2 = 0 \Rightarrow (x+2)(x-1) = 0 \Rightarrow x = -2, x = 1$$

Using Washer method :

$$\text{volume} = \pi \int_{-2}^1 [(-x + 3)^2 - (x^2 + 1)^2] dx$$

$$\text{Volume} = \pi \int_{-2}^1 [(x^2 - 6x + 9) - (x^4 + 2x^2 + 1)] dx$$

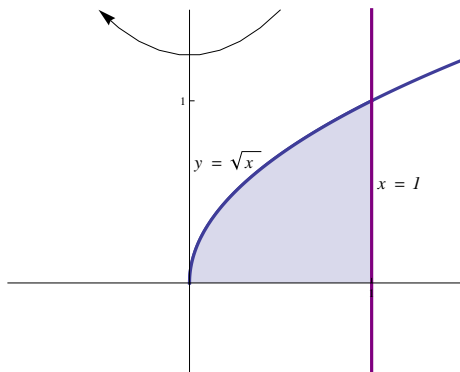
$$\text{Volume} = \pi \int_{-2}^1 (-x^4 - x^2 - 6x + 8) dx = \pi \left[-\frac{x^5}{5} - \frac{x^3}{3} - 3x^2 + 8x \right]_{-2}^1$$

$$= \pi \left[\left(-\frac{1}{5} - \frac{1}{3} - 3 + 8 \right) - \left(\frac{32}{5} + \frac{8}{3} - 12 - 16 \right) \right]$$

$$= \pi \left(-\frac{1}{5} - \frac{1}{3} + 5 - \frac{32}{5} - \frac{8}{3} + 28 \right)$$

$$= \pi \left(33 - 3 - \frac{33}{5} \right) = \pi \left(30 - \frac{33}{5} \right) = \frac{150 - 33}{5} \pi = \frac{117\pi}{5}$$

4. $y = \sqrt{x}$, $y = 0$ and $x = 1$, around the y -axis



$y = \sqrt{x}$ is the upper half of the parabola $x = y^2$ with vertex $(0, 0)$ and opens to the right

$x = 1$ is a straight line parallel to the y -axis and passing through $(1, 0)$

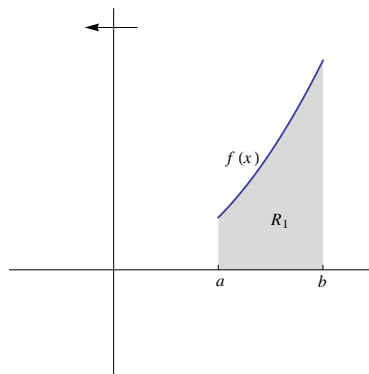
Note that $y = \sqrt{x}$ intersects $x = 1$ at the point $(1, 1)$.

Using Washer method :

$$\begin{aligned} \text{Volume} &= \pi \int_0^1 [(1)^2 - (y^2)^2] dy = \pi \int_0^1 (1 - y^4) dy \\ &= \pi \left[y - \frac{y^5}{5} \right]_0^1 = \pi \left[\left(1 - \frac{1}{5} \right) - (0 - 0) \right] = \pi \left(1 - \frac{1}{5} \right) = \frac{4\pi}{5} \end{aligned}$$

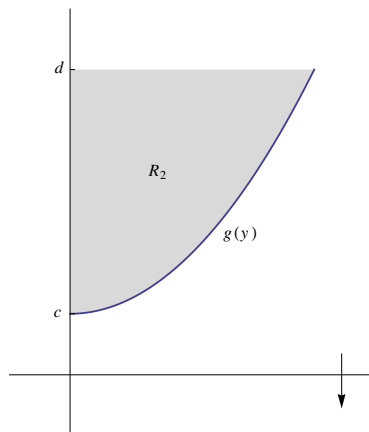
3. Volume of a solid of revolution (using cylindrical shells method)

Volume of a shell = 2π (average radius) (altitude) (thickness)



In the above figure R_1 is the region bounded by the graphs of the curves of $f(x)$, $x = a$, $x = b$ and the x -axis.

Using cylindrical shells method, the volume of the solid of revolution generated by revolving the region R_1 around the y -axis is $V = 2\pi \int_a^b x f(x) dx$

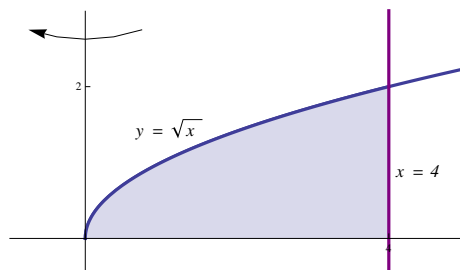


In the above figure R_2 is the region bounded by the graphs of the curves of $g(y)$, $y = d$ and the y -axis.

Using cylindrical shells method, the volume of the solid of revolution generated by revolving the region R_2 around the x -axis is $V = 2\pi \int_c^d y g(y) dy$

Examples : Use cylindrical shells method to calculate the volume of the solid of revolution generated by revolving the region bounded by the graphs of :

- $y = \sqrt{x}$, $y = 0$ and $x = 4$, around the y -axis.



$y = 0$ is the x -axis

$y = \sqrt{x}$ is the upper half of the parabola $x = y^2$ with vertex $(0, 0)$ and opens to the right.

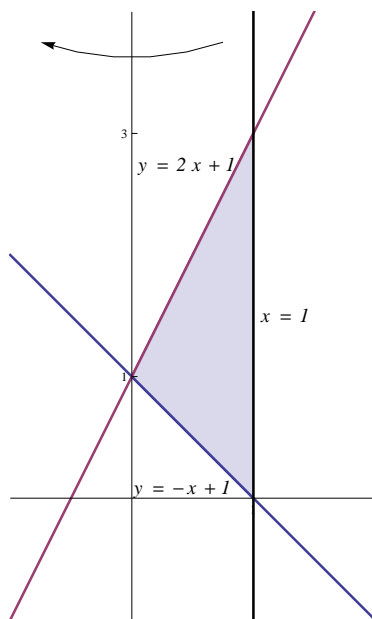
$x = 4$ is a straight line parallel to the y -axis and passing through $(4, 0)$.

Using Cylindrical shells method

$$\text{Volume} = 2\pi \int_0^4 x\sqrt{x} \, dx = 2\pi \int_0^4 x^{\frac{3}{2}} \, dx$$

$$\text{Volume} = 2\pi \left[\frac{2}{5}x^{\frac{5}{2}} \right]_0^4 = 2\pi \frac{2}{5} (4)^{\frac{5}{2}} = 2\pi \frac{2}{5} (32) = \frac{128\pi}{5}$$

- $x + y = 1$, $x = 1$ and $y = 2x + 1$, around the y -axis .



$y = -x + 1$ is a straight line with slope -1 and passing through $(0, 1)$.

$y = 2x + 1$ is a straight line with slope 2 and passing through $(0, 1)$.

$x = 1$ is a straight line parallel to the y -axis and passing through $(1, 0)$.

Point of intersection of $x = 1$ and $y = -x + 1$ is $(1, 0)$.

Point of intersection of $x = 1$ and $y = 2x + 1$ is $(1, 3)$.

Point of intersection of $y = -x + 1$ and $y = 2x + 1$:

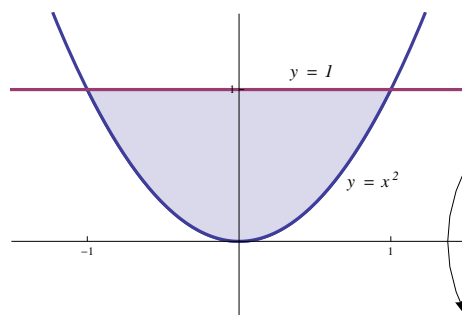
$$2x + 1 = -x + 1 \Rightarrow 3x = 0 \Rightarrow x = 0.$$

Using Cylindrical shells method

$$\text{Volume} = 2\pi \int_0^1 x[(2x + 1) - (-x + 1)] dx = 2\pi \int_0^1 x(3x) dx = 2\pi \int_0^1 3x^2 dx$$

$$\text{Volume} = 2\pi [x^3]_0^1 = 2\pi[1 - 0] = 2\pi$$

3. $y = x^2$ and $y = 1$, around the x -axis.



$y = x^2$ is a parabola with vertex $(0, 0)$ and opens upwards.

$y = 1$ is a straight line parallel to the x -axis and passing through $(0, 1)$.

Since the bounded region is symmetric with respect to the y -axis, consider the right half of the parabola $y = x^2$ which is $x = \sqrt{y}$.

Using Cylindrical shells method

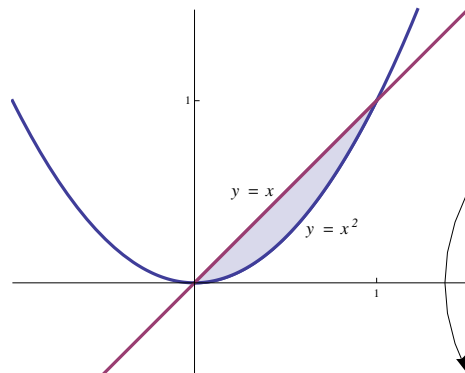
$$\text{Volume} = 2 \left(2\pi \int_0^1 y\sqrt{y} dy \right) = 4\pi \int_0^1 y^{\frac{3}{2}} dy$$

$$\text{Volume} = 4\pi \left[\frac{2}{5} y^{\frac{5}{2}} \right]_0^1 = 4\pi \left(\frac{2}{5} - 0 \right) = \frac{8\pi}{5}$$

4. $y = x^2$ and $y = x$, around the x -axis.

$y = x^2$ is a parabola with vertex $(0, 0)$ and opens upwards.

$y = x$ is a straight line passing through the origin with slope 1 .



Consider $x = \sqrt{y}$ which is the right half of the parabola $y = x^2$.

Points of intersection of $x = \sqrt{y}$ and $x = y$:

$$y = \sqrt{y} \Rightarrow y^2 = y \Rightarrow y^2 - y = 0 \Rightarrow y(y - 1) = 0 \Rightarrow y = 0, y = 1$$

Using Cylindrical shells method

$$\text{Volume} = 2\pi \int_0^1 y(\sqrt{y} - y) dy = 2\pi \int_0^1 (y^{\frac{3}{2}} - y^2) dy$$

$$\text{Volume} = 2\pi \left[\frac{2}{5}y^{\frac{5}{2}} - \frac{y^3}{3} \right]_0^1 = 2\pi \left[\left(\frac{2}{5} - \frac{1}{3} \right) - (0 - 0) \right]$$

$$\text{Volume} = 2\pi \left(\frac{2}{5} - \frac{1}{3} \right) = 2\pi \left(\frac{6 - 5}{15} \right) = \frac{2\pi}{15}$$

CHAPTER SIX

PARTIAL DERIVATIVES

1. Functions of several variables
2. Partial derivatives
3. Chain Rules
4. Implicit differentiation

1. Functions of several variables

1.1 Functions of two variables :

Definition: A function of two variables is a rule that assigns an ordered pair (x, y) (in the domain of the function) to a real number w .

$$\begin{aligned} f : \mathbb{R}^2 &\longrightarrow \mathbb{R} \\ (x, y) &\longrightarrow w \end{aligned}$$

Example :

$f(x, y) = \frac{y}{x^2 + y^2}$ is a function of two variables x and y

$$f(3, 1) = \frac{1}{3^2 + 1^2} = \frac{1}{10}.$$

Note that $f(x, y)$ takes $(3, 1) \in \mathbb{R}^2$ to $\frac{1}{10} \in \mathbb{R}$

1.2 Functions of three variables :

Definition: A function of three variables is a rule that assigns an ordered triple (x, y, z) (in the domain of the function) to a real number w .

$$\begin{aligned} f : \mathbb{R}^3 &\longrightarrow \mathbb{R} \\ (x, y, z) &\longrightarrow w \end{aligned}$$

Example :

$f(x, y, z) = \frac{z}{x + y^2 + 3}$ is a function of three variables x , y and z

$$f(1, -2, 4) = \frac{4}{1 + (-2)^2 + 3} = \frac{4}{8} = \frac{1}{2}.$$

Note that $f(x, y, z)$ takes $(1, -2, 4) \in \mathbb{R}^3$ to $\frac{1}{2} \in \mathbb{R}$

2. Partial derivatives

2.1 Partial derivatives of a function of two variables :

If $w = f(x, y)$ is a function of two variables, then :

1. The partial derivative of f with respect to x is denoted by $\frac{\partial f}{\partial x}$, $\frac{\partial w}{\partial x}$, f_x or w_x , and it is calculated by applying the rules of differentiation to x and regarding y as a constant .
2. The partial derivative of f with respect to y is denoted by $\frac{\partial f}{\partial y}$, $\frac{\partial w}{\partial y}$, f_y or w_y , and it is calculated by applying the rules of differentiation to y and regarding x as a constant .

Example 1: Calculate f_x and f_y of the function $f(x, y) = x^2y^3 + xy \ln(x + y)$

Solution:

$$1. f_x = \frac{\partial}{\partial x} (x^2y^3 + xy \ln(x + y))$$

$$f_x = (2x)y^3 + \left[(1)y \ln(x + y) + xy \frac{1}{x + y} \right] = 2xy^3 + y \ln(x + y) + \frac{xy}{x + y}$$

$$2. f_y = \frac{\partial}{\partial y} (x^2y^3 + xy \ln(x + y))$$

$$f_y = x^2(3y^2) + \left[x(1) \ln(x + y) + xy \frac{1}{x + y} \right] = 3x^2y^2 + x \ln(x + y) + \frac{xy}{x + y}$$

Example 2: Calculate f_x and f_y of the function $f(x, y) = \frac{x + y^2}{x + y}$

Solution:

$$1. f_x = \frac{\partial f}{\partial x} = \frac{(1 + 0)(x + y) - (x + y^2)(1 + 0)}{(x + y)^2} = \frac{x + y - (x + y^2)}{(x + y)^2}$$

$$f_x = \frac{x + y - x - y^2}{(x + y)^2} = \frac{y - y^2}{(x + y)^2}$$

$$2. f_y = \frac{\partial f}{\partial y} = \frac{(0 + 2y)(x + y) - (x + y^2)(0 + 1)}{(x + y)^2} = \frac{2y(x + y) - (x + y^2)}{(x + y)^2}$$

$$f_y = \frac{2xy + 2y^2 - x - y^2}{(x + y)^2} = \frac{2xy - x + y^2}{(x + y)^2}$$

2.2 Partial derivatives of a function of three variables :

If $w = f(x, y, z)$ is a function of three variables, then :

1. The partial derivative of f with respect to x is denoted by $\frac{\partial f}{\partial x}$, $\frac{\partial w}{\partial x}$, f_x or w_x , and it is calculated by applying the rules of differentiation to x and regarding y and z as constants .
2. The partial derivative of f with respect to y is denoted by $\frac{\partial f}{\partial y}$, $\frac{\partial w}{\partial y}$, f_y or w_y , and it is calculated by applying the rules of differentiation to y and regarding x and z as constants .
3. The partial derivative of f with respect to z is denoted by $\frac{\partial f}{\partial z}$, $\frac{\partial w}{\partial z}$, f_z or w_z , and it is calculated by applying the rules of differentiation to z and regarding x and y as constants .

Example : If $f(x, y, z) = 2z^3x - 4(x^2 + y^2)z$, then calculate f_x , f_y and f_z at $(0, 1, 2)$.

Solution :

$$1. f_x = \frac{\partial}{\partial x} (2z^3x - 4(x^2 + y^2)z) = 2z^3 - 4(2x)z = 2z^3 - 8xz$$

$$f_x(0, 1, 2) = 2(2^3) - 8(0)(2) = 16$$

$$2. f_y = \frac{\partial}{\partial y} (2z^3x - 4(x^2 + y^2)z) = 0 - 4(0 + 2y)z = -8yz$$

$$f_y(0, 1, 2) = -8(1)(2) = -16$$

$$3. f_z = \frac{\partial}{\partial z} (2z^3x - 4(x^2 + y^2)z) = 6z^2x - 4(x^2 + y^2)$$

$$f_z(0, 1, 2) = 6(2^2)(0) - 4(0^2 + 1^2) = -4$$

2.3 Second partial derivatives :

If $w = f(x, y)$ is a function of two variables, then :

$$1. \frac{\partial^2 f}{\partial x^2} = \frac{\partial}{\partial x} \left(\frac{\partial f}{\partial x} \right) = \frac{\partial}{\partial x} (f_x) = f_{xx} .$$

$$2. \frac{\partial^2 f}{\partial y^2} = \frac{\partial}{\partial y} \left(\frac{\partial f}{\partial y} \right) = \frac{\partial}{\partial y} (f_y) = f_{yy} .$$

$$3. \frac{\partial^2 f}{\partial x \partial y} = \frac{\partial}{\partial x} \left(\frac{\partial f}{\partial y} \right) = \frac{\partial}{\partial x} (f_y) = f_{yx} .$$

$$4. \frac{\partial^2 f}{\partial y \partial x} = \frac{\partial}{\partial y} \left(\frac{\partial f}{\partial x} \right) = \frac{\partial}{\partial y} (f_x) = f_{xy} .$$

Note : Second partial derivatives of a function of three variables are defined in a same manner.

Theorem : Let $f(x, y)$ be a function of two variables. If f , f_x , f_y , f_{xy} and f_{yx} are continuous, then $f_{xy} = f_{yx}$.

Note : If $f(x, y, z)$ is a function of three variables and f has continuous second partial derivatives, then $f_{xy} = f_{yx}$, $f_{xz} = f_{zx}$ and $f_{yz} = f_{zy}$.

Example 1: Let $f(x, y) = x^3y + xy^2 \sin(x + y)$, calculate $\frac{\partial^2 f}{\partial x \partial y}$ and $\frac{\partial^2 f}{\partial y \partial x}$

Solution :

$$f_x = 3x^2y + y^2 \sin(x + y) + xy^2 \cos(x + y)$$

$$f_y = x^3 + 2xy \sin(x + y) + xy^2 \cos(x + y)$$

$$f_{xy} = 3x^2 + 2y \sin(x + y) + y^2 \cos(x + y) + 2xy \cos(x + y) - xy^2 \sin(x + y)$$

$$f_{yx} = 3x^2 + 2y \sin(x + y) + 2xy \cos(x + y) + y^2 \cos(x + y) - xy^2 \sin(x + y)$$

Note : $f_{xy} = f_{yx}$ according to the theorem .

Example 2: Let $f(x, y, z) = x^3y^2z + xy \sin(y + z)$, calculate $\frac{\partial^2 f}{\partial y \partial x}$ and $\frac{\partial^2 f}{\partial x \partial z}$

Solution :

$$f_x = 3x^2y^2z + y \sin(y + z)$$

$$f_z = x^3y^2 + xy \cos(y + z)$$

$$\frac{\partial^2 f}{\partial y \partial x} = f_{xy} = 6x^2yz + \sin(y + z) + y \cos(y + z)$$

$$\frac{\partial^2 f}{\partial x \partial z} = f_{zx} = 3x^2y^2 + y \cos(y + z)$$

Example 3: Let $f(x, y, z) = 2z^3 - 3(x^2 + y^2)z$, Show that $\frac{\partial^2 f}{\partial x^2} + \frac{\partial^2 f}{\partial y^2} + \frac{\partial^2 f}{\partial z^2} = 0$

Solution :

$$f_x = 0 - 3z(2x) = -6xz$$

$$f_y = 0 - 3z(2y) = -6yz$$

$$f_z = 6z^2 - 3(x^2 + y^2)$$

$$\frac{\partial^2 f}{\partial x^2} = f_{xx} = -6z$$

$$\frac{\partial^2 f}{\partial y^2} = f_{yy} = -6z$$

$$\frac{\partial^2 f}{\partial z^2} = f_{zz} = 12z$$

$$\frac{\partial^2 f}{\partial x^2} + \frac{\partial^2 f}{\partial y^2} + \frac{\partial^2 f}{\partial z^2} = -6z - 6z + 12z = 0$$

3. Chain Rules

Theorem (Chain Rules):

1. If $w = f(x, y)$ and $x = g(t)$, $y = h(t)$, such that f , g and h are differentiable then

$$\frac{df}{dt} = \frac{dw}{dt} = \frac{\partial w}{\partial x} \frac{dx}{dt} + \frac{\partial w}{\partial y} \frac{dy}{dt}$$

2. If $w = f(x, y)$ and $x = g(t, s)$, $y = h(t, s)$, such that f , g and h are differentiable then

$$\frac{\partial f}{\partial t} = \frac{\partial w}{\partial t} = \frac{\partial w}{\partial x} \frac{\partial x}{\partial t} + \frac{\partial w}{\partial y} \frac{\partial y}{\partial t}$$

$$\frac{\partial f}{\partial s} = \frac{\partial w}{\partial s} = \frac{\partial w}{\partial x} \frac{\partial x}{\partial s} + \frac{\partial w}{\partial y} \frac{\partial y}{\partial s}$$

3. If $w = f(x, y, z)$ and $x = g(t, s)$, $y = h(t, s)$, $z = k(t, s)$ such that f , g , h and k are differentiable then

$$\frac{\partial w}{\partial t} = \frac{\partial w}{\partial x} \frac{\partial x}{\partial t} + \frac{\partial w}{\partial y} \frac{\partial y}{\partial t} + \frac{\partial w}{\partial z} \frac{\partial z}{\partial t}$$

$$\frac{\partial w}{\partial s} = \frac{\partial w}{\partial x} \frac{\partial x}{\partial s} + \frac{\partial w}{\partial y} \frac{\partial y}{\partial s} + \frac{\partial w}{\partial z} \frac{\partial z}{\partial s}$$

Example 1 : Let $f(x, y) = xy + y^2$, $x = s^2t$, and $y = s + t$, calculate $\frac{\partial f}{\partial s}$ and $\frac{\partial f}{\partial t}$.

Solution :

1. $\frac{\partial f}{\partial s} = \frac{\partial f}{\partial x} \frac{\partial x}{\partial s} + \frac{\partial f}{\partial y} \frac{\partial y}{\partial s}$

$$\frac{\partial f}{\partial x} = y, \quad \frac{\partial x}{\partial s} = 2st$$

$$\frac{\partial f}{\partial y} = x + 2y, \quad \frac{\partial y}{\partial s} = 1$$

$$\frac{\partial f}{\partial s} = y(2st) + (x + 2y)(1) = (s + t)2st + [s^2t + 2(s + t)]$$

$$= 2s^2t + 2st^2 + s^2t + 2s + 2t = 3s^2t + 2st^2 + 2s + 2t$$

2. $\frac{\partial f}{\partial t} = \frac{\partial f}{\partial x} \frac{\partial x}{\partial t} + \frac{\partial f}{\partial y} \frac{\partial y}{\partial t}$

$$\frac{\partial f}{\partial x} = y, \quad \frac{\partial x}{\partial t} = s^2$$

$$\frac{\partial f}{\partial y} = x + 2y, \quad \frac{\partial y}{\partial t} = 1$$

$$\begin{aligned}\frac{\partial f}{\partial t} &= ys^2 + (x + 2y)(1) = (s + t)s^2 + s^2t + 2(s + t) \\ &= s^3 + s^2t + s^2t + 2s + 2t = s^3 + 2s^2t + 2s + 2t\end{aligned}$$

Example 2 : Let $f(x, y, z) = x + \sin(xy) + \cos(xz)$, $x = ts$, $y = s + t$ and $z = \frac{s}{t}$, calculate $\frac{\partial f}{\partial s}$ and $\frac{\partial f}{\partial t}$.

Solution :

$$\begin{aligned}1. \quad \frac{\partial f}{\partial s} &= \frac{\partial f}{\partial x} \frac{\partial x}{\partial s} + \frac{\partial f}{\partial y} \frac{\partial y}{\partial s} + \frac{\partial f}{\partial z} \frac{\partial z}{\partial s} \\ \frac{\partial f}{\partial x} &= 1 + y \cos(xy) - z \sin(xz), \quad \frac{\partial x}{\partial s} = t \\ \frac{\partial f}{\partial y} &= x \cos(xy), \quad \frac{\partial y}{\partial s} = 1 \\ \frac{\partial f}{\partial z} &= -x \sin(xz), \quad \frac{\partial z}{\partial s} = \frac{1}{t} \\ \frac{\partial f}{\partial s} &= t [1 + y \cos(xy) - z \sin(xz)] + x \cos(xy) + \left(\frac{1}{t}\right) (-x \sin(xz)) \\ \frac{\partial f}{\partial s} &= t + ty \cos(xy) - tz \sin(xz) + x \cos(xy) - \frac{x \sin(xz)}{t} \\ 2. \quad \frac{\partial f}{\partial t} &= \frac{\partial f}{\partial x} \frac{\partial x}{\partial t} + \frac{\partial f}{\partial y} \frac{\partial y}{\partial t} + \frac{\partial f}{\partial z} \frac{\partial z}{\partial t} \\ \frac{\partial f}{\partial x} &= 1 + y \cos(xy) - z \sin(xz), \quad \frac{\partial x}{\partial t} = s \\ \frac{\partial f}{\partial y} &= x \cos(xy), \quad \frac{\partial y}{\partial t} = 1 \\ \frac{\partial f}{\partial z} &= -x \sin(xz), \quad \frac{\partial z}{\partial t} = \frac{-s}{t^2} \\ \frac{\partial f}{\partial t} &= s [1 + y \cos(xy) - z \sin(xz)] + x \cos(xy) + \left(\frac{-s}{t^2}\right) (-x \sin(xz)) \\ \frac{\partial f}{\partial t} &= s + sy \cos(xy) - sz \sin(xz) + x \cos(xy) + \frac{sx \sin(xz)}{t^2}\end{aligned}$$

4. Implicit differentiation

1. Suppose that the equation $F(x, y) = 0$ defines y implicitly as a function of x say $y = f(x)$, then

$$\frac{dy}{dx} = -\frac{F_x}{F_y}$$

2. Suppose that the equation $F(x, y, z) = 0$ implicitly defines a function $z = f(x, y)$, where f is differentiable, then

$$\frac{\partial z}{\partial x} = -\frac{F_x}{F_z} \text{ and } \frac{\partial z}{\partial y} = -\frac{F_y}{F_z}$$

Example 1 : Let $y^2 - xy + 3x^2 = 0$, find $\frac{dy}{dx}$.

Solution 1 : Let $F(x, y) = x^2 - xy + 3x^2$ then $F(x, y) = 0$

$$F_x = -y + 6x \text{ and } F_y = 2y - x .$$

$$\frac{dy}{dx} = -\frac{F_x}{F_y} = -\frac{(-y + 6x)}{2y - x} = \frac{y - 6x}{2y - x} .$$

Solution 2 : $y^2 - xy + 3x^2 = 0$

Differentiate both sides implicitly

$$2yy' - (y + xy') + 6x = 0 \Rightarrow 2yy' - y - xy' + 6x = 0$$

$$\Rightarrow 2yy' - xy' = y - 6x \Rightarrow (2y - x)y' = y - 6x$$

$$\Rightarrow \frac{dy}{dx} = y' = \frac{y - 6x}{2y - x}$$

Example 2 : Let $F(x, y, z) = x^2y + z^2 + \sin(xyz) = 0$, find $\frac{\partial z}{\partial x}$ and $\frac{\partial z}{\partial y}$.

Solution :

$$F_x = 2xy + yz \cos(xyz)$$

$$F_y = x^2 + xz \cos(xyz)$$

$$F_z = 2z + xy \cos(xyz)$$

$$\frac{\partial z}{\partial x} = -\frac{F_x}{F_z} = -\frac{2xy + yz \cos(xyz)}{2z + xy \cos(xyz)}$$

$$\frac{\partial z}{\partial y} = -\frac{F_y}{F_z} = -\frac{x^2 + xz \cos(xyz)}{2z + xy \cos(xyz)}$$

CHAPTER SEVEN

DIFFERENTIAL EQUATIONS

1. Definition of a differential equation
2. Separable Differential equations
3. First-order linear differential equations

1. Definition of a differential equation

Definition : An equation that involves $x, y, y', y'', \dots, y^{(n)}$ for a function $y(x)$ with n^{th} derivative $y^{(n)}$ of y with respect to x is an ordinary differential Equation of order n .

Examples :

1. $y' = x^2 + 5$ is a differential equation of order 1.
2. $y'' + x(y')^4 - y = x$ is a differential equation of order 2
3. $(y^{(4)})^3 + x^2 y'' = 2x$ is a differential equation of order 4

$y = y(x)$ is called a **solution** of a differential equation if $y = y(x)$ satisfies that differential equation.

Consider the differential equation $y' = 6x + 4$, then $y = 3x^2 + 4x + c$ is the **general solution** of that differential equation.

If an **initial condition** was added to the differential equation to assign a certain value for c then $y = y(x)$ is called the **particular solution** of the differential equation .

Consider the differential equation $y' = 6x + 4$ with the initial condition $y(0) = 2$, $y = 3x^2 + 4x + c$ is the general solution of the differential equation ,
 $y(0) = 2 \Rightarrow 3(0)^2 + 4 \times 0 + c = 2 \Rightarrow c = 2$, hence $y = 3x^2 + 4x + 2$ is the particular solution of the differential equation.

2. Separable Differential equations

The separable differential equation has the form $M(x) + N(y) y' = 0$.
where $M(x)$ and $N(y)$ are continuous functions.

To solve the separable differential equation :

1. Write it as $M(x) dx + N(y) dy = 0 \implies N(y) dy = -M(x) dx$.
2. Integrate the left-hand side with respect to y and the right-hand side with respect to x

$$\int N(y) dy = - \int M(x) dx$$

Example 1 : Solve the differential equation $y' + y^3 e^x = 0$.

Solution :

$$\begin{aligned} y' + y^3 e^x = 0 &\implies \frac{dy}{dx} = -y^3 e^x , \\ \implies -\frac{1}{y^3} dy = e^x dx &\implies -y^{-3} dy = e^x dx \\ \implies -\int y^{-3} dy = \int e^x dx &\implies -\frac{y^{-2}}{-2} = e^x + c \\ \implies \frac{1}{2y^2} = e^x + c &\implies \frac{1}{y^2} = 2(e^x + c) \\ \implies y^2 = \frac{1}{2(e^x + c)} &\implies y = \sqrt{\frac{1}{2(e^x + c)}} \end{aligned}$$

Example 2 : Solve the differential equation $\frac{dy}{dx} = y^2 e^x$, $y(0) = 1$.

Solution :

$$\begin{aligned} \frac{dy}{dx} = y^2 e^x &\implies \frac{1}{y^2} dy = e^x dx \\ \implies y^{-2} dy = e^x dx &\implies \int y^{-2} dy = \int e^x dx \\ \implies \frac{y^{-1}}{-1} = e^x + c &\implies y = \frac{-1}{e^x + c} \end{aligned}$$

Using the initial condition $y(0) = 1 \implies 1 = \frac{-1}{e^0 + c}$

$$\implies 1 = \frac{-1}{1 + c} \implies 1 + c = -1 \implies c = -2$$

The particular solution is $y = \frac{-1}{e^x - 2}$

Example 3 : Solve the differential equation $dy - \sin x(1 + y^2)dx = 0$.

Solution :

$$\begin{aligned} dy - \sin x(1 + y^2)dx = 0 &\implies dy = \sin x(1 + y^2)dx \\ \implies \frac{1}{1 + y^2} dy = \sin x dx &\implies \int \frac{1}{1 + y^2} dy = \int \sin x dx \\ \implies \tan^{-1} y = -\cos x + c &\implies y = \tan(-\cos x + c) \end{aligned}$$

Example 4 : Solve the differential equation $e^{-y} \sin x - y' \cos^2 x = 0$.

Solution :

$$\begin{aligned} e^{-y} \sin x - y' \cos^2 x = 0 &\implies -\cos^2 x \frac{dy}{dx} = -e^{-y} \sin x \\ \implies \frac{1}{e^{-y}} dy = \frac{-\sin x}{-\cos^2 x} dx &\implies e^y dy = \frac{1}{\cos x} \frac{\sin x}{\cos x} dx \\ \implies e^y dy = \sec x \tan x dx &\implies \int e^y dy = \int \sec x \tan x dx \\ \implies e^y = \sec x + c &\implies y = \ln |\sec x + c| \end{aligned}$$

Example 5 : Solve the differential equation $y' = 1 - y + x^2 - yx^2$.

Solution :

$$\begin{aligned} y' = 1 - y + x^2 - yx^2 &\implies \frac{dy}{dx} = 1 - y + x^2(1 - y) \\ \implies \frac{dy}{dx} = (1 - y)(1 + x^2) &\implies \frac{1}{1 - y} dy = (1 + x^2) dx \\ \implies \int \frac{1}{1 - y} dy = \int (1 + x^2) dx &\implies -\int \frac{-1}{1 - y} dy = \int (1 + x^2) dx \\ \implies -\ln |1 - y| = x + \frac{x^3}{3} + c &\implies \ln |1 - y| = -x - \frac{x^3}{3} - c \\ \implies 1 - y = e^{-x - \frac{x^3}{3} - c} &\implies y = 1 - e^{-x - \frac{x^3}{3} - c} \end{aligned}$$

3. First-order linear differential equations

The first-order linear differential equation has the form $y' + P(x)y = Q(x)$, where $P(x)$ and $Q(x)$ are continuous functions of x

To solve the first-order linear differential equation :

1. Compute the integrating factor $u(x) = e^{\int P(x) dx}$
2. The general solution of the first-order linear differential equation is

$$y(x) = \frac{1}{u(x)} \int u(x) Q(x) dx$$

Example 1 : Solve the differential equation $x \frac{dy}{dx} + y = x^2 + 1$.

Solution :

$$x \frac{dy}{dx} + y = x^2 + 1 \implies y' + \left(\frac{1}{x}\right)y = \frac{x^2 + 1}{x}$$

$$\implies y' + \left(\frac{1}{x}\right)y = x + \frac{1}{x}$$

$$P(x) = \frac{1}{x} \text{ and } Q(x) = x + \frac{1}{x}$$

The integrating factor is $u(x) = e^{\int \frac{1}{x} dx} = e^{\ln x} = x$

The general solution is $y = \frac{1}{x} \int x \left(x + \frac{1}{x}\right) dx$

$$y = \frac{1}{x} \int (x^2 + 1) dx = \frac{1}{x} \left(\frac{x^3}{3} + x + c\right) = \frac{x^2}{3} + 1 + \frac{c}{x}$$

Example 2 : Solve the differential equation $y' - \frac{2}{x}y = x^2 e^x$, $y(1) = e$.

Solution :

$$P(x) = -\frac{2}{x} \text{ and } Q(x) = x^2 e^x$$

The integrating factor is

$$u(x) = e^{\int -\frac{2}{x} dx} = e^{-2 \int \frac{1}{x} dx} = e^{-2 \ln x} = e^{\ln x^{-2}} = x^{-2}$$

The general solution is $y = \frac{1}{x^{-2}} \int x^{-2} x^2 e^x dx$

$$y = x^2 \int e^x dx = x^2(e^x + c) = x^2 e^x + cx^2$$

Using the initial condition $y(1) = e$

$$y(1) = e \implies e = (1)^2 e^1 + c (1)^2 \implies e = e + c \implies c = 0$$

The particular solution is $y = x^2 e^x$

Example 3 : Solve the differential equation $y' + y = \cos(e^x)$

Solution :

$$P(x) = 1 \text{ and } Q(x) = \cos(e^x)$$

The integrating factor is $u(x) = e^{\int 1 dx} = e^x$

The general solution is $y = \frac{1}{e^x} \int e^x \cos(e^x) dx$

$$y = e^{-x} \int \cos(e^x) e^x dx = e^{-x} (\sin(e^x) + c) = e^{-x} \sin(e^x) + c e^{-x}$$

Example 4 : Solve the differential equation $xy' - 3y = x^2$

Solution :

$$xy' - 3y = x^2 \implies y' - \frac{3}{x}y = x$$

$$P(x) = -\frac{3}{x} \text{ and } Q(x) = x$$

The integrating factor is

$$u(x) = e^{\int -\frac{3}{x} dx} = e^{-3 \int \frac{1}{x} dx} = e^{-3 \ln x} = e^{\ln x^{-3}} = x^{-3}$$

The general solution is $y = \frac{1}{x^{-3}} \int x^{-3} x dx$

$$y = x^3 \int x^{-2} dx = x^3 \left(\frac{x^{-1}}{-1} + c \right)$$

$$y = x^3 \left(-\frac{1}{x} + c \right) = -x^2 + c x^3$$