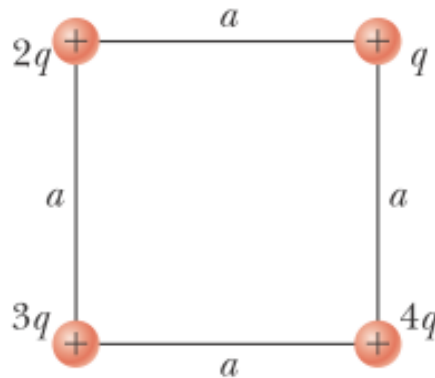


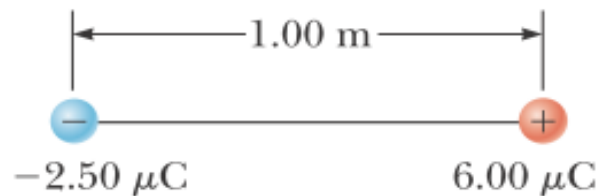
HW (3)

Electric Field

- 25.** Four charged particles are at the corners of a square of side  $a$  as shown in Figure P23.25. Determine (a) the electric field at the location of charge  $q$  and (b) the total electric force exerted on  $q$ .

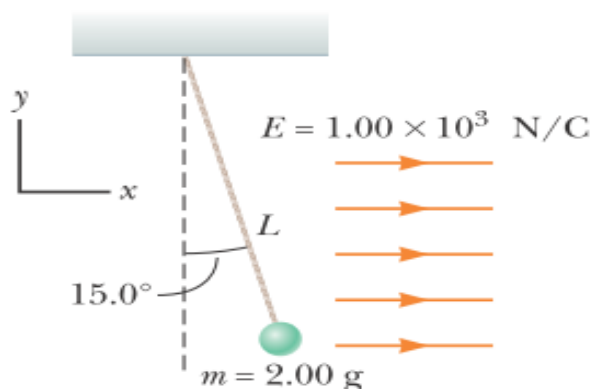


- 29.** In Figure P23.29, determine the point (other than infinity) at which the electric field is zero.  
**M**



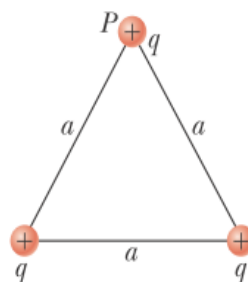
- 34.** Two  $2.00\text{-}\mu\text{C}$  point charges are located on the  $x$  axis. One is at  $x = 1.00 \text{ m}$ , and the other is at  $x = -1.00 \text{ m}$ .  
 (a) Determine the electric field on the  $y$  axis at  $y = 0.500 \text{ m}$ .  
 (b) Calculate the electric force on a  $-3.00\text{-}\mu\text{C}$  charge placed on the  $y$  axis at  $y = 0.500 \text{ m}$ .

- 33.** A small, 2.00-g plastic ball is suspended by a 20.0-cm-long string in a uniform electric field as shown in Figure P23.33. If the ball is in equilibrium when the string makes a  $15.0^\circ$  angle with the vertical, what is the net charge on the ball?



**Figure P23.33**

- 50.** Three equal positive charges  $q$  are at the corners of an equilateral triangle of side  $a$  as shown in Figure P23.50. Assume the three charges together create an electric field. (a) Sketch the field lines in the plane of the charges. (b) Find the location of one point (other than  $\infty$ ) where the electric field is zero. What are (c) the magnitude and (d) the direction of the electric field at  $P$  due to the two charges at the base?



**Figure P23.50**

**51.** A proton accelerates from rest in a uniform electric field of  $640 \text{ N/C}$ . At one later moment, its speed is **AMT** **M**  $1.20 \text{ Mm/s}$  (nonrelativistic because  $v$  is much less than the speed of light). (a) Find the acceleration of the proton. (b) Over what time interval does the proton reach this speed? (c) How far does it move in this time interval? (d) What is its kinetic energy at the end of this interval?

**47.** A negatively charged rod of finite length carries charge with a uniform charge per unit length. Sketch the electric field lines in a plane containing the rod.

**57.** A proton moves at  $4.50 \times 10^5 \text{ m/s}$  in the horizontal direction. It enters a uniform vertical electric field with a magnitude of  $9.60 \times 10^3 \text{ N/C}$ . Ignoring any gravitational effects, find (a) the time interval required for the proton to travel  $5.00 \text{ cm}$  horizontally, (b) its vertical displacement during the time interval in which it travels  $5.00 \text{ cm}$  horizontally, and (c) the horizontal and vertical components of its velocity after it has traveled  $5.00 \text{ cm}$  horizontally.