




(HW4)

1. In a particular cathode ray tube, the measured beam current is $30.0 \mu\text{A}$. How many electrons strike the tube screen every 40.0 s ?



11. An aluminum wire having a cross-sectional area of $4.00 \times 10^{-6} \text{ m}^2$ carries a current of 5.00 A. Find the drift speed of the electrons in the wire. The density of aluminum is 2.70 g/cm^3 . Assume that one conduction electron is supplied by each atom.

15.  A 0.900-V potential difference is maintained across a 1.50-m length of tungsten wire that has a cross-sectional area of 0.600 mm^2 . What is the current in the wire?





17. Suppose that you wish to fabricate a uniform wire out of 1.00 g of copper. If the wire is to have a resistance of $R = 0.500 \, \Omega$, and if all of the copper is to be used, what will be (a) the length and (b) the diameter of this wire?




31. An aluminum wire with a diameter of 0.100 mm has a uniform electric field of 0.200 V/m imposed along its entire length. The temperature of the wire is 50.0°C. Assume one free electron per atom. (a) Use the information in Table 27.1 and determine the resistivity. (b) What is the current density in the wire? (c) What is the total current in the wire? (d) What is the drift speed of the conduction electrons? (e) What potential difference must exist between the ends of a 2.00-m length of the wire to produce the stated electric field?



35. The temperature of a sample of tungsten is raised while a sample of copper is maintained at 20.0°C . At what temperature will the resistivity of the tungsten be four times that of the copper?



39.  What is the required resistance of an immersion heater that increases the temperature of 1.50 kg of water from 10.0°C to 50.0°C in 10.0 min while operating at 110 V?



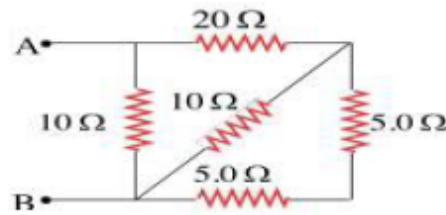
41. Suppose that a voltage surge produces 140 V for a moment. By what percentage does the power output of a 120-V, 100-W lightbulb increase? Assume that its resistance does not change.



51. A certain toaster has a heating element made of Nichrome wire. When the toaster is first connected to a 120-V source (and the wire is at a temperature of 20.0°C), the initial current is 1.80 A. However, the current begins to decrease as the heating element warms up. When the toaster reaches its final operating temperature, the current drops to 1.53 A. (a) Find the power delivered to the toaster when it is at its operating temperature. (b) What is the final temperature of the heating element?



1. Calculate the effective resistance between the points A and B in the figure below.



2. A copper wire has a resistance of 25 mΩ at 20 °C. When the wire is carrying a current, heat produced by the current causes the temperature of the wire to increase by 27 °C
 - (a). Calculate the change in the wire's resistance.
 - (b). If its original current was 10.0 mA and the potential difference across wire remains constant, what is its final current? (Given the temperature coefficient of resistivity for copper is $6.80 \times 10^{-3} \text{ } ^\circ\text{C}^{-1}$).
3. Three resistors are connected in parallel as shown in the figure below, A potential difference of 18.0V is maintained between points a and b.
 - (a). Find the current in each resistor.
 - (b). Calculate the power delivered to each resistor.

