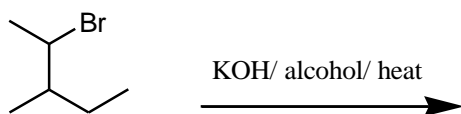
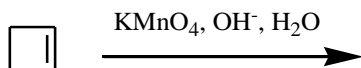
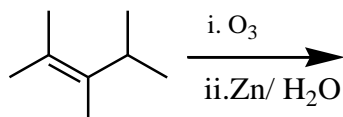
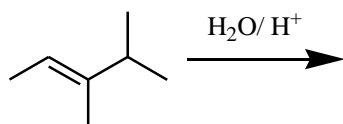
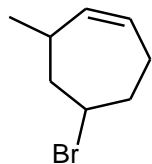
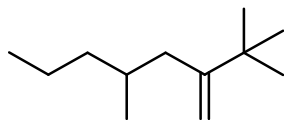
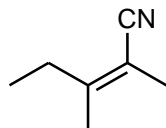


Exercise 2 109 chem

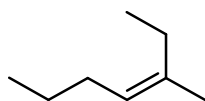
What is the major product of the following reaction?



Write the IUPAC name for each of the following structure?



Which of the following compounds have geometrical isomers (explain the type)?



2-Methyl-3-heptene

3-Hexene

2-Methyl-2-pentene