

**M 106 - INTEGRAL CALCULUS**  
**Solution of the first mid-term exam**  
**First semester 1441 H**  
*Dr. Tariq A. Alfadhel*

**Q1.** (2+3+3 Marks)

(a) Find the number  $c$  so that  $\sum_{k=11}^{30} (k^2 - c) = 0$ .

$$\text{Solution : } \sum_{k=11}^{30} (k^2 - c) = 0 \iff \sum_{k=11}^{30} k^2 - \sum_{k=11}^{30} c = 0$$

$$\iff \sum_{k=11}^{30} c = \sum_{k=11}^{30} k^2 \iff c \sum_{k=11}^{30} 1 = \sum_{k=11}^{30} k^2 - \sum_{k=1}^{10} k^2$$

$$\iff 20c = \left( \frac{(30)(31)(61)}{6} \right) - \left( \frac{(10)(11)(21)}{6} \right)$$

$$\iff 20c = \frac{30}{6} ((31)(61) - (11)(7))$$

$$\iff c = \frac{5}{20} (1891 - 77) = \frac{1814}{4} = \frac{907}{2}$$

(b) Approximate the integral  $\int_0^{2\pi} (\cos x)^4 dx$  using Simpson's rule with  $n = 8$ .

Solution :  $[a, b] = [0, 2\pi]$ ,  $n = 8$ , and  $f(x) = (\cos x)^4$ .

$$\Delta x = \frac{b - a}{n} = \frac{2\pi - 0}{8} = \frac{\pi}{4}$$

$n$	$x_n$	$f(x_n)$	$m$	$mf(x_n)$
0	0	1	1	1
1	$\frac{\pi}{4}$	$\frac{1}{4}$	4	1
2	$\frac{\pi}{2}$	0	2	0
3	$\frac{3\pi}{4}$	$\frac{1}{4}$	4	1
4	$\pi$	1	2	2
5	$\frac{5\pi}{4}$	$\frac{1}{4}$	4	1
6	$\frac{3\pi}{2}$	0	2	0
7	$\frac{7\pi}{4}$	$\frac{1}{4}$	4	1
8	$2\pi$	1	1	1
				8

$$\int_0^{2\pi} (\cos x)^4 dx \approx \frac{2\pi - 0}{3(8)}(8) \approx \frac{2\pi}{3} \approx 2.0944$$

(c) Use Riemann sums to evaluate  $\int_0^1 x^3 dx$ .

Solution :  $[a, b] = [0, 1]$  ,  $f(x) = x^3$  .

$$\Delta_x = \frac{b-a}{n} = \frac{1-0}{n} = \frac{1}{n}$$

$$x_k = a + k \Delta_x = 0 + k \left( \frac{1}{n} \right) = \frac{k}{n}$$

Using the right-end point of the sub-intervals.

$$\begin{aligned} R_n &= \sum_{k=1}^n f(x_k) \Delta_x = \sum_{k=1}^n \left[ \left( \frac{k}{n} \right)^3 \frac{1}{n} \right] = \frac{1}{n^4} \sum_{k=1}^n k^3 = \frac{1}{n^4} \left( \frac{n(n+1)}{2} \right)^2 \\ &= \frac{1}{n^4} \frac{n^2(n+1)^2}{4} = \frac{1}{4} \frac{(n+1)^2}{n^2} = \frac{1}{4} \frac{n^2 + 2n + 1}{n^2} \end{aligned}$$

$$\int_0^1 x^3 dx = \lim_{n \rightarrow \infty} R_n = \lim_{n \rightarrow \infty} \left[ \frac{1}{4} \frac{n^2 + 2n + 1}{n^2} \right] = \frac{1}{4} (1) = \frac{1}{4}$$

**Q2.** (3+2+3 Marks)

(a) Evaluate the integral  $\int \frac{5^{\tan x}}{(\cos x)^2} dx$

$$\text{Solution : } \int \frac{5^{\tan x}}{(\cos x)^2} dx = \int 5^{\tan x} \sec^2 x dx = \frac{5^{\tan x}}{\ln 5} + c$$

Using the formula  $\int a^{f(x)} f'(x) dx = \frac{a^{f(x)}}{\ln a} + c$  , where  $a > 0$

(b) If  $y = 2^{(\sin x)^2} + x^\pi \pi^x$  , find  $y'$ .

$$\text{Solution : } y' = 2^{(\sin x)^2} 2 \sin x \cos x \ln 2 + (\pi x^{\pi-1}) \pi^x + x^\pi (\pi^x \ln \pi)$$

$$y' = 2 \ln 2 2^{(\sin x)^2} \sin x \cos x + \pi x^{\pi-1} \pi^x + x^\pi \pi^x \ln \pi$$

(c) Compute  $\int \frac{dx}{\sqrt{x}(2+x)}$

$$\text{Solution : } \int \frac{dx}{\sqrt{x}(2+x)} = 2 \int \frac{dx}{2\sqrt{x} [(\sqrt{2})^2 + (\sqrt{x})^2]}$$

$$= 2 \int \frac{\left( \frac{1}{2\sqrt{x}} \right) dx}{(\sqrt{2})^2 + (\sqrt{x})^2} = 2 \frac{1}{\sqrt{2}} \tan^{-1} \left( \frac{\sqrt{x}}{\sqrt{2}} \right) + c$$

Using the formula  $\int \frac{f'(x)}{a^2 + [f(x)]^2} dx = \frac{1}{a} \tan^{-1} \left( \frac{f(x)}{a} \right) + c$  , where  $a > 0$

**Q3.** (3+3+3 Marks)

(a) Find  $\int \frac{(\ln x + 1)}{\sqrt{16(x \ln x)^2 - 9}} dx$

Solution :  $\int \frac{(\ln x + 1)}{\sqrt{16(x \ln x)^2 - 9}} dx = \frac{1}{4} \int \frac{4(\ln x + 1)}{\sqrt{[4(x \ln x)]^2 - (3)^2}} dx$

$= \cosh^{-1} \left( \frac{4(x \ln x)}{3} \right) + c$

Using the formula  $\int \frac{f'(x)}{\sqrt{[f(x)]^2 - a^2}} dx = \cosh^{-1} \left( \frac{f(x)}{a} \right) + c$ , where  $a > 0$

(b) Evaluate the integral  $\int \frac{dx}{x\sqrt{x^5 - 4}}$

Solution :  $\int \frac{dx}{x\sqrt{x^5 - 4}} = \int \frac{dx}{x\sqrt{\left(x^{\frac{5}{2}}\right)^2 - (2)^2}} = \int \frac{\left(x^{\frac{3}{2}}\right)}{x \left(x^{\frac{3}{2}}\right) \sqrt{\left(x^{\frac{5}{2}}\right)^2 - (2)^2}} dx$

$= \frac{2}{5} \int \frac{\left(\frac{5}{2} x^{\frac{3}{2}}\right)}{x^{\frac{5}{2}} \sqrt{\left(x^{\frac{5}{2}}\right)^2 - (2)^2}} dx = \frac{2}{5} \frac{1}{2} \sec^{-1} \left( \frac{x^{\frac{5}{2}}}{2} \right) + c$

Using the formula  $\int \frac{f'(x)}{f(x) \sqrt{[f(x)]^2 - a^2}} dx = \frac{1}{a} \sec^{-1} \left( \frac{f(x)}{a} \right) + c$ , where  $a > 0$

(c) Compute  $\int \frac{2e^{-3x}}{1 - e^{-6x}} dx$

Solution :  $\int \frac{2e^{-3x}}{1 - e^{-6x}} dx = 2 \int \frac{e^{-3x}}{(1)^2 - (e^{-3x})^2} dx = \frac{2}{-3} \int \frac{-3 e^{-3x}}{(1)^2 - (e^{-3x})^2} dx$

$= -\frac{2}{3} \tanh^{-1} (e^{-3x}) + c$

Using the formula  $\int \frac{f'(x)}{a^2 - [f(x)]^2} dx = \frac{1}{a} \tanh^{-1} \left( \frac{f(x)}{a} \right) + c$ , where  $a > 0$

**M 106 - INTEGRAL CALCULUS**  
**Solution of the second mid-term exam**  
**First semester 1441 H**  
*Dr. Tariq A. Alfadhel*

**Q1.** (2+3+3 Marks)

(a) Find  $\lim_{x \rightarrow 0} (1 + 8x^2)^{\frac{1}{x^2}}$

Solution :  $\lim_{x \rightarrow 0} (1 + 8x^2)^{\frac{1}{x^2}} \quad (1^\infty)$

Put  $y = (1 + 8x^2)^{\frac{1}{x^2}} \iff \ln |y| = \ln \left| (1 + 8x^2)^{\frac{1}{x^2}} \right| = \frac{\ln |1 + 8x^2|}{x^2}$

$\lim_{x \rightarrow 0} \ln |y| = \lim_{x \rightarrow 0} \frac{\ln |1 + 8x^2|}{x^2} \quad \left( \frac{0}{0} \right)$

Using L'Hôpital's rule

$\lim_{x \rightarrow 0} \ln |y| = \lim_{x \rightarrow 0} \frac{\ln |1 + 8x^2|}{x^2} = \lim_{x \rightarrow 0} \frac{\left( \frac{16x}{1+8x^2} \right)}{2x} = \lim_{x \rightarrow 0} \frac{8}{1 + 8x^2} = \frac{8}{1} = 8$

Therefore,  $\lim_{x \rightarrow 0} (1 + 8x^2)^{\frac{1}{x^2}} = e^8$

(b) Compute the integral  $\int e^{4x} \sin x \, dx$

Solution : Using integration by parts twice.

$$u = \sin x \quad dv = e^{4x} \, dx$$

$$du = \cos x \, dx \quad v = \frac{1}{4} e^{4x}$$

$$\int e^{4x} \sin x \, dx = \frac{1}{4} e^{4x} \sin x - \int \frac{1}{4} e^{4x} \cos x \, dx = \frac{1}{4} e^{4x} \sin x - \frac{1}{4} \int e^{4x} \cos x \, dx$$

$$u = \cos x \quad dv = e^{4x} \, dx$$

$$du = -\sin x \, dx \quad v = \frac{1}{4} e^{4x}$$

$$\int e^{4x} \sin x \, dx = \frac{1}{4} e^{4x} \sin x - \frac{1}{4} \left[ \frac{1}{4} e^{4x} \cos x - \int \frac{1}{4} e^{4x} (-\sin x) \, dx \right]$$

$$\int e^{4x} \sin x \, dx = \frac{1}{4} e^{4x} \sin x - \frac{1}{16} e^{4x} \cos x - \frac{1}{16} \int e^{4x} \sin x \, dx$$

$$\int e^{4x} \sin x \, dx + \frac{1}{16} \int e^{4x} \sin x \, dx = \frac{1}{4} e^{4x} \sin x - \frac{1}{16} e^{4x} \cos x + c$$

$$\frac{17}{16} \int e^{4x} \sin x \, dx = \frac{1}{4} e^{4x} \sin x - \frac{1}{16} e^{4x} \cos x + c$$

$$\int e^{4x} \sin x \, dx = \frac{16}{17} \left[ \frac{1}{4} e^{4x} \sin x - \frac{1}{16} e^{4x} \cos x + c \right]$$

(c) Evaluate  $\int (\sin x)^2 (\cos x)^2 \, dx$

$$\begin{aligned} \text{Solution : } \int (\sin x)^2 (\cos x)^2 \, dx &= \int \left( \frac{1 - \cos 2x}{2} \right) \left( \frac{1 + \cos 2x}{2} \right) \, dx \\ &= \frac{1}{4} \int (1 - \cos^2 2x) \, dx = \frac{1}{4} \int \left[ 1 - \left( \frac{1 + \cos 4x}{2} \right) \right] \, dx \\ &= \frac{1}{4} \int \left( 1 - \frac{1}{2} - \frac{\cos 4x}{2} \right) \, dx = \frac{1}{4} \int \left( \frac{1}{2} - \frac{\cos 4x}{2} \right) \, dx \\ &= \frac{1}{4} \int \frac{1}{2} \, dx - \frac{1}{4} \int \frac{\cos 4x}{2} \, dx = \frac{1}{8} \int dx - \frac{1}{4} \cdot \frac{1}{2} \cdot \frac{1}{4} \int \cos 4x \, dx \\ &= \frac{1}{8} x - \frac{1}{32} \sin 4x + c \end{aligned}$$

**Q2.** (3+3+2 Marks)

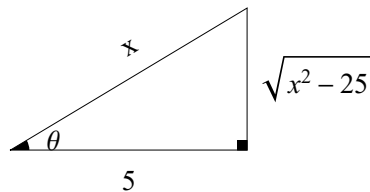
(a) Evaluate the integral  $\int \frac{\sqrt{x^2 - 25}}{x} \, dx$

Solution : Using Trigonometric substitutions.

$$\text{Put } x = 5 \sec \theta \implies \sec \theta = \frac{x}{5}$$

$$dx = 5 \sec \theta \tan \theta \, d\theta$$

$$\begin{aligned} \int \frac{\sqrt{x^2 - 25}}{x} \, dx &= \int \frac{\sqrt{25 \sec^2 \theta - 25} \cdot 5 \sec \theta \tan \theta}{5 \sec \theta} \, d\theta \\ &= \int \sqrt{25(\sec^2 \theta - 1)} \tan \theta \, d\theta = \int 5 \sqrt{\tan^2 \theta} \tan \theta \, d\theta = 5 \int \tan^2 \theta \, d\theta \\ &= 5 \int (\sec^2 \theta - 1) \, d\theta = 5(\tan \theta - \theta) + c = 5 \tan \theta - 5\theta + c \end{aligned}$$



$$\text{From the triangle : } \tan \theta = \frac{\sqrt{x^2 - 25}}{5}$$

$$\text{Note that } \sec \theta = \frac{x}{5} \implies \theta = \sec^{-1} \left( \frac{x}{5} \right)$$

$$\int \frac{\sqrt{x^2 - 25}}{x} dx = 5 \frac{\sqrt{x^2 - 25}}{5} - 5 \sec^{-1} \left( \frac{x}{5} \right) + c$$

$$= \sqrt{x^2 - 25} - 5 \sec^{-1} \left( \frac{x}{5} \right) + c$$

(b) Find  $\int \frac{3x^2 + 7x + 2}{(x+1)^2(x+3)} dx$

Solution : Using the method of partial fractions.

$$\frac{3x^2 + 7x + 2}{(x+1)^2(x+3)} = \frac{A_1}{x+3} + \frac{A_2}{x+1} + \frac{A_3}{(x+1)^2}$$

$$3x^2 + 7x + 2 = A_1(x+1)^2 + A_2(x+1)(x+3) + A_3(x+3)$$

$$3x^2 + 7x + 2 = A_1(x^2 + 2x + 1) + A_2(x^2 + 4x + 3) + A_3(x+3)$$

$$3x^2 + 7x + 2 = A_1x^2 + 2A_1x + A_1 + A_2x^2 + 4A_2x + 3A_2 + A_3x + 3A_3$$

$$3x^2 + 7x + 2 = (A_1 + A_2)x^2 + (2A_1 + 4A_2 + A_3)x + (A_1 + 3A_2 + 3A_3)$$

By comparing the coefficients of the two polynomials in both sides :

$$A_1 + A_2 = 3 \quad \rightarrow (1)$$

$$2A_1 + 4A_2 + A_3 = 7 \quad \rightarrow (2)$$

$$A_1 + 3A_2 + 3A_3 = 2 \quad \rightarrow (3)$$

Multiplying Eq(2) by 3 and subtracting Eq (3) :  $5A_1 + 9A_2 = 19 \quad \rightarrow (4)$

Multiplying Eq(1) by 5 and subtracting Eq (4) :  $-4A_2 = -4 \implies A_2 = 1$

From Eq(1) :  $A_1 = 2$

From Eq(2) :  $2(2) + 4(1) + A_3 = 7 \implies A_3 = 7 - 8 = -1$

$$\int \frac{3x^2 + 7x + 2}{(x+1)^2(x+3)} dx = \int \left( \frac{2}{x+3} + \frac{1}{x+1} + \frac{-1}{(x+1)^2} \right) dx$$

$$= 2 \int \frac{1}{x+3} dx + \int \frac{1}{x+1} dx - \int (x+1)^{-2} dx$$

$$= 2 \ln|x+3| + \ln|x+1| - \frac{(x+1)^{-1}}{-1} + c = 2 \ln|x+3| + \ln|x+1| + \frac{1}{x+1} + c$$

(c) Compute  $\int \frac{dx}{\sqrt{x(x+1)+1}}$

Solution :  $\int \frac{dx}{\sqrt{x(x+1)+1}} = \int \frac{dx}{\sqrt{x^2 + x + 1}}$

$$= \int \frac{1}{\left(x^2 + x + \frac{1}{4}\right) + \frac{3}{4}} dx = \int \frac{1}{\sqrt{\left(x + \frac{1}{2}\right)^2 + \left(\frac{\sqrt{3}}{2}\right)^2}} dx$$

$$= \sinh\left(\frac{x + \frac{1}{2}}{\frac{\sqrt{3}}{2}}\right) + c = \sinh\left(\frac{2x + 1}{\sqrt{3}}\right) + c$$

**Q3.** (3+3+3 Marks)

(a)  $\int \frac{dx}{x^{\frac{1}{2}} + x^{\frac{1}{3}}}$

Solution : Put  $u = x^{\frac{1}{6}} \Rightarrow x = u^6 \Rightarrow dx = 6u^5 du$

$$\begin{aligned} \int \frac{1}{x^{\frac{1}{2}} + x^{\frac{1}{3}}} dx &= \int \frac{6u^5}{(u^6)^{\frac{1}{2}} + (u^6)^{\frac{1}{3}}} du = \int \frac{6u^5}{u^3 + u^2} du \\ &= \int \frac{6u^5}{u^2(u+1)} du = \int \frac{6u^3}{u+1} du \end{aligned}$$

Using long division of polynomials

$$\int \frac{6u^3}{u+1} du = \int \left(6u^2 - 6u + 6 - \frac{6}{u+1}\right) du$$

$$= 2u^3 - 3u^2 + 6u - 6 \ln|u+1| + c$$

$$\int \frac{1}{x^{\frac{1}{2}} + x^{\frac{1}{3}}} dx = 2x^{\frac{1}{2}} - 3x^{\frac{1}{3}} + 6x^{\frac{1}{6}} - 6 \ln|x^{\frac{1}{6}} + 1| + c$$

(b) Does the integral  $\int_0^{\infty} \frac{x dx}{1+x^4}$  converge? Find its value if it does.

$$\text{Solution : } \int_0^{\infty} \frac{x dx}{1+x^4} = \lim_{t \rightarrow \infty} \int_0^t \frac{x dx}{1+x^4} = \lim_{t \rightarrow \infty} \left( \frac{1}{2} \int_0^t \frac{2x}{1+(x^2)^2} dx \right)$$

$$= \lim_{t \rightarrow \infty} \left( \frac{1}{2} [\tan^{-1}(x^2)]_0^t \right) = \lim_{t \rightarrow \infty} \left( \frac{1}{2} [\tan^{-1}(t^2) - \tan^{-1}(0)] \right)$$

$$= \frac{1}{2} \left[ \frac{\pi}{2} - 0 \right] = \frac{\pi}{4}$$

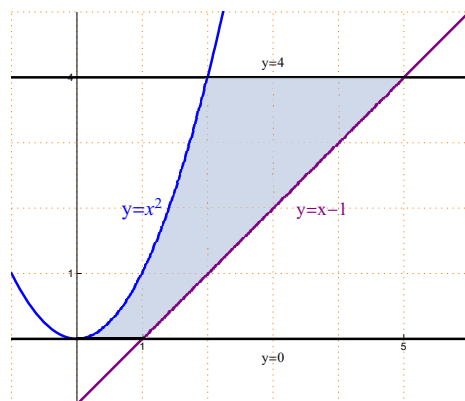
(c) Compute the area of the region bounded by the curves :  $y = x^2$ ,  $y = x - 1$ ,  $y = 0$  and  $y = 4$ .

Solution :  $y = x^2$  is a parabola with vertex  $(0, 0)$  and open upwards.

$y = x - 1$  is a straight line passing through  $(0, -1)$  and its slope is 1.

$y = 0$  is the  $x$ -axis.

$y = 4$  is a straight line parallel to the  $x$ -axis and passing through  $(0, 4)$



$$y = x - 1 \implies x = y + 1$$

$y = x^2 \implies x = \pm\sqrt{y}$ , but since the desired region is in the first quadrant then  $x = \sqrt{y}$

$$\begin{aligned} \text{Area} &= \int_0^4 \int_{\sqrt{y}}^{y+1} [(y+1) - \sqrt{y}] \, dy = \int_0^4 \int [y - y^{\frac{1}{2}} + 1] \, dy \\ &= \left[ \frac{y^2}{2} - \frac{2}{3} y^{\frac{3}{2}} + y \right]_0^4 = \left( \frac{(4)^2}{2} - \frac{2}{3} (4)^{\frac{3}{2}} + 4 \right) - (0 - 0 + 0) \\ &= 8 - \frac{16}{3} + 4 = 12 - \frac{16}{3} = \frac{36 - 16}{3} = \frac{20}{3} \end{aligned}$$



**M 106 - INTEGRAL CALCULUS**

**Solution of the final exam**

**First semester 1441 H**

*Dr. Tariq A. Alfadhel*

**Q1.** (2+2+3 Marks)

- (a) Find the number  $c$  in the mean value theorem for  $f(x) = -x^2 + 4x$  on  $[0, 3]$

Solution : Using the formula  $(b - a) f(c) = \int_a^b f(x) dx$

$$(3 - 0)(-c^2 + 4c) = \int_0^3 (-x^2 + 4x) dx = \left[ -\frac{x^3}{3} + 2x^2 \right]_0^3$$

$$3(-c^2 + 4c) = \left( -\frac{3^3}{3} + 2(3^2) \right) - (0 + 0) = -9 + 18 = 9$$

$$\implies -c^2 + 4c = 3 \implies c^2 - 4c + 3 = 0$$

$$\implies (c - 1)(c - 3) = 0 \implies c = 1, c = 3$$

Note that  $1 \in (0, 3)$  while  $3 \notin (0, 3)$ .

The number that satisfies the mean value theorem is  $c = 1$ .

- (b) Compute the integral  $\int \frac{dx}{\sqrt{5^x - 16}}$

Solution :  $\int \frac{dx}{\sqrt{5^x - 16}} = \int \frac{1}{\sqrt{(5^{\frac{x}{2}})^2 - (4)^2}} dx$

$$= 2 \int \frac{\frac{1}{2} 5^{\frac{x}{2}}}{5^{\frac{x}{2}} \sqrt{(5^{\frac{x}{2}})^2 - (4)^2}} dx = 2 \frac{1}{4} \sec^{-1} \left( \frac{5^{\frac{x}{2}}}{4} \right) + c = \frac{1}{2} \sec^{-1} \left( \frac{5^{\frac{x}{2}}}{4} \right) + c$$

Using the formula  $\int \frac{f'(x)}{f(x) \sqrt{[f(x)]^2 - a^2}} dx = \frac{1}{a} \sec^{-1} \left( \frac{f(x)}{a} \right) + c$

where  $a > 0$  and  $|f(x)| > a$

- (c) Evaluate  $\int \frac{\cot x}{\sqrt{9 - (\sin x)^4}} dx$

Solution :  $\int \frac{\cot x}{\sqrt{9 - (\sin x)^4}} dx = \int \frac{\cos x}{\sin x \sqrt{(3)^2 - (\sin^2 x)^2}} dx$

$$= \frac{1}{2} \int \frac{2 \sin x \cos x}{\sin^2 x \sqrt{(3)^2 - (\sin^2 x)^2}} dx = \frac{1}{2} \left(-\frac{1}{3}\right) \operatorname{sech}^{-1} \left(\frac{\sin^2 x}{3}\right) + c$$

Using the formula  $\int \frac{f'(x)}{f(x)\sqrt{a^2 - [f(x)]^2}} dx = -\frac{1}{a} \operatorname{sech}^{-1} \left(\frac{f(x)}{a}\right) + c$

where  $a > 0$  and  $|f(x)| < a$

**Q2.** (3+3+3 Marks)

(a) Compute  $\lim_{x \rightarrow 3^+} \left( \frac{1}{x-3} - \frac{1}{\ln(x-2)} \right)$

Solution :  $\lim_{x \rightarrow 3^+} \left( \frac{1}{x-3} - \frac{1}{\ln(x-2)} \right) \quad (\infty - \infty)$

$$= \lim_{x \rightarrow 3^+} \left( \frac{\ln(x-2) - (x-3)}{(x-3) \ln(x-2)} \right) \quad \left( \frac{0}{0} \right)$$

Using L'Hôpital's rule

$$\lim_{x \rightarrow 3^+} \left( \frac{\ln(x-2) - (x-3)}{(x-3) \ln(x-2)} \right) = \lim_{x \rightarrow 3^+} \left( \frac{\frac{1}{x-2} - 1}{\ln(x-2) + (x-3) \frac{1}{x-2}} \right)$$

$$= \lim_{x \rightarrow 3^+} \left( \frac{\frac{1-(x-2)}{x-2}}{\frac{(x-2) \ln(x-2) + (x-3)}{x-2}} \right)$$

$$= \lim_{x \rightarrow 3^+} \left( \frac{-x+1}{(x-2) \ln(x-2) + (x-3)} \right) = -\infty$$

Note that  $-x+1 \rightarrow -2$  and  $(x-2) \ln(x-2) + (x-3) \rightarrow 0^+$  when  $x \rightarrow 3^+$

(b) Find  $\int x^2 \tan^{-1} x dx$

Solution : Using integration by parts.

$$u = \tan^{-1} x \quad dv = x^2 dx$$

$$du = \frac{1}{1+x^2} dx \quad v = \frac{x^3}{3}$$

$$\int x^2 \tan^{-1} x dx = \frac{x^3}{3} \tan^{-1} x - \int \frac{x^3}{3} \frac{1}{1+x^2} dx$$

$$= \frac{x^3}{3} \tan^{-1} x - \frac{1}{3} \int \frac{x^3}{1+x^2} dx = \frac{x^3}{3} \tan^{-1} x - \frac{1}{3} \int \frac{(x^3+x) - x}{1+x^2} dx$$

$$= \frac{x^3}{3} \tan^{-1} x - \frac{1}{3} \left[ \int \frac{x^3+x}{1+x^2} dx - \int \frac{x}{1+x^2} dx \right]$$

$$\begin{aligned}
&= \frac{x^3}{3} \tan^{-1} x - \frac{1}{3} \int \frac{x(x^2+1)}{1+x^2} dx + \frac{1}{3} \int \frac{x}{1+x^2} dx \\
&= \frac{x^3}{3} \tan^{-1} x - \frac{1}{3} \int x dx + \frac{1}{3} \frac{1}{2} \int \frac{2x}{1+x^2} dx \\
&= \frac{x^3}{3} \tan^{-1} x - \frac{1}{3} \frac{x^2}{2} + \frac{1}{6} \ln|1+x^2| + c
\end{aligned}$$

(c) Evaluate the integral  $\int (\tan x)^4 (\sec x)^6 dx$

Solution : Put  $u = \tan x \implies du = \sec^2 x dx$

$$\begin{aligned}
\int (\tan x)^4 (\sec x)^6 dx &= \int \tan^4 x \sec^4 x \sec^2 x dx \\
&= \int \tan^4 x (\sec^2 x)^2 \sec^2 x dx = \int \tan^4 x (1 + \tan^2 x)^2 \sec^2 x dx \\
&= \int u^4 (1 + u^2)^2 du = \int u^4 (1 + 2u^2 + u^4) du = \int (u^4 + 2u^6 + u^8) du \\
&= \frac{u^5}{5} + 2 \frac{u^7}{7} + \frac{u^9}{9} + c = \frac{\tan^5 x}{5} + 2 \frac{\tan^7 x}{7} + \frac{\tan^9 x}{9} + c
\end{aligned}$$

**Q3.** (3+3+3 Marks)

(a) Compute the integral  $\int \frac{x^2}{(x^2+9)^{\frac{3}{2}}} dx$

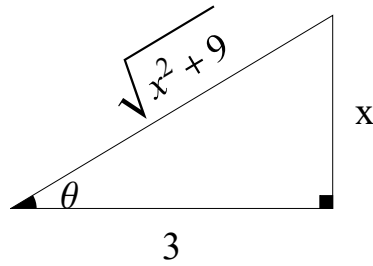
Solution :  $\int \frac{x^2}{(x^2+9)^{\frac{3}{2}}} dx = \int \frac{x^2}{(x^2+3^2)^{\frac{3}{2}}} dx$

Using Trigonometric substitutions.

Put  $x = 3 \tan \theta \implies \tan \theta = \frac{x}{3}$

$dx = 3 \sec^2 \theta d\theta$

$$\begin{aligned}
\int \frac{x^2}{(x^2+9)^{\frac{3}{2}}} dx &= \int \frac{(3 \tan \theta)^2 3 \sec^2 \theta}{((3 \tan \theta)^2 + 9)^{\frac{3}{2}}} d\theta = \int \frac{(9 \tan^2 \theta) (3 \sec^2 \theta)}{(9 \tan^2 \theta + 9)^{\frac{3}{2}}} d\theta \\
&= 27 \int \frac{\tan^2 \theta \sec^2 \theta}{[9(\tan^2 \theta + 1)]^{\frac{3}{2}}} d\theta = 27 \int \frac{\tan^2 \theta \sec^2 \theta}{(9 \sec^2 \theta)^{\frac{3}{2}}} d\theta = 27 \int \frac{\tan^2 \theta \sec^2 \theta}{(9)^{\frac{3}{2}} (\sec^2 \theta)^{\frac{3}{2}}} d\theta \\
&= 27 \int \frac{\tan^2 \theta \sec^2 \theta}{27 \sec^3 \theta} d\theta = \int \frac{\tan^2 \theta}{\sec \theta} d\theta = \int \frac{\sec^2 \theta - 1}{\sec \theta} d\theta \\
&= \int \left( \frac{\sec^2 \theta}{\sec \theta} - \frac{1}{\sec \theta} \right) d\theta = \int (\sec \theta - \cos \theta) d\theta \\
&= \ln |\sec \theta + \tan \theta| - \sin \theta + c
\end{aligned}$$



From the triangle :  $\sin \theta = \frac{x}{\sqrt{x^2 + 9}}$  and  $\sec \theta = \frac{\sqrt{x^2 + 9}}{3}$

$$\int \frac{x^2}{(x^2 + 9)^{\frac{3}{2}}} dx = \ln \left| \frac{\sqrt{x^2 + 9}}{3} + \frac{x}{3} \right| - \frac{x}{\sqrt{x^2 + 9}} + c$$

(b) Find the integral  $\int \frac{3x - 2}{(x^2 + 4)(x + 2)} dx$

Solution : Using the method of partial fractions.

$$\frac{3x - 2}{(x^2 + 4)(x + 2)} = \frac{A}{x + 2} + \frac{Bx + C}{x^2 + 4}$$

$$3x - 2 = A(x^2 + 4) + (Bx + C)(x + 2)$$

$$3x - 2 = Ax^2 + 4A + Bx^2 + 2Bx + Cx + 2C$$

$$3x - 2 = (A + B)x^2 + (2B + C)x + (4A + 2C)$$

By comparing the coefficients of the two polynomials in both sides :

$$A + B = 0 \quad \rightarrow (1)$$

$$2B + C = 3 \quad \rightarrow (2)$$

$$4A + 2C = -2 \quad \rightarrow (3)$$

$$\text{Dividing Eq(3) by 2 : } 2A + C = -1 \quad \rightarrow (4)$$

$$\text{Subtracting Eq(2) from Eq(4) : } 2A - 2B = -4 \implies A - B = -2 \quad \rightarrow (5)$$

$$\text{Adding Eq(1) to Eq(5) : } 2A = -2 \implies A = -1$$

$$\text{From Eq(1) : } -1 + B = 0 \implies B = 1$$

$$\text{From Eq (2) : } 2 + C = 3 \implies C = 1$$

$$\int \frac{3x - 2}{(x^2 + 4)(x + 2)} dx = \int \left( \frac{-1}{x + 2} + \frac{x + 1}{x^2 + 4} \right) dx$$

$$= \int \frac{-1}{x + 2} dx + \int \frac{x}{x^2 + 4} dx + \int \frac{1}{x^2 + 4} dx$$

$$= - \int \frac{1}{x + 2} dx + \frac{1}{2} \int \frac{2x}{x^2 + 4} dx + \int \frac{1}{x^2 + 2^2} dx$$

$$= - \ln |x + 2| + \frac{1}{2} \ln |x^2 + 4| + \frac{1}{2} \tan^{-1} \left( \frac{x}{2} \right) + c$$

(c) Evaluate the integral  $\int \frac{dx}{3 - \sin x + \cos x}$

Solution : Using half-angle substitution.

Put  $u = \tan\left(\frac{x}{2}\right)$

$$\sin x = \frac{2u}{1+u^2}, \quad \cos x = \frac{1-u^2}{1+u^2}, \quad dx = \frac{2}{1+u^2} du$$

$$\begin{aligned} \int \frac{dx}{3 - \sin x + \cos x} &= \int \frac{\left(\frac{2}{1+u^2}\right)}{3 - \frac{2u}{1+u^2} + \frac{1-u^2}{1+u^2}} du \\ &= \int \frac{\left(\frac{2}{1+u^2}\right)}{\left(\frac{3(1+u^2)-2u+(1-u^2)}{1+u^2}\right)} du = \int \frac{2}{3+3u^2-2u+1-u^2} du \\ &= \int \frac{2}{2u^2-2u+4} du = \int \frac{2}{2(u^2-u+2)} du = \int \frac{1}{u^2-u+2} du \\ &= \int \frac{1}{\left(u^2-u+\frac{1}{4}\right)+\frac{7}{4}} du = \int \frac{1}{\left(u-\frac{1}{2}\right)^2+\left(\frac{\sqrt{7}}{2}\right)^2} du \\ &= \frac{1}{\left(\frac{\sqrt{7}}{2}\right)} \tan^{-1} \left( \frac{\left(u-\frac{1}{2}\right)}{\left(\frac{\sqrt{7}}{2}\right)} \right) + c = \frac{2}{\sqrt{7}} \tan^{-1} \left( \frac{2u-1}{\sqrt{7}} \right) + c \\ &= \frac{2}{\sqrt{7}} \tan^{-1} \left( \frac{2 \tan\left(\frac{x}{2}\right) - 1}{\sqrt{7}} \right) + c \end{aligned}$$

**Q4.** (3+2+1 Marks)

(a) Sketch the region bounded by the curves :  $y = 4 - x^2$ ,  $y = x + 2$ ,  $x = -3$ ,  $x = 0$  and find its area.

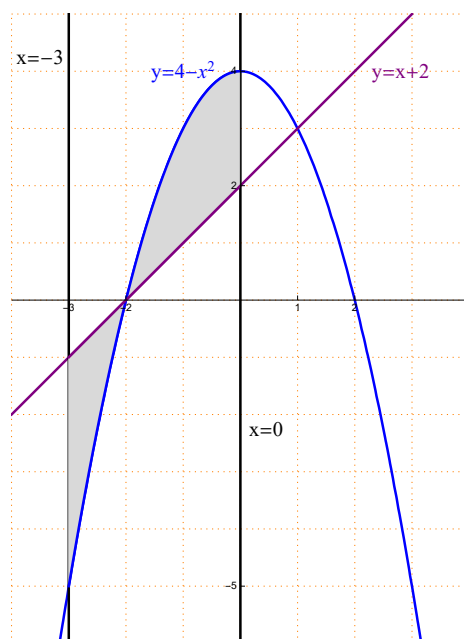
Solution :

$y = 4 - x^2$  is a parabola opens downwards with vertex  $(0, 4)$

$y = x + 2$  is a straight line passing through  $(0, 2)$  with slope equals 1.

$x = -3$  is a straight line parallel to the  $y$ -axis and passing through  $(-3, 0)$

$x = 0$  is the  $y$ -axis.



Points of intersection of  $y = 4 - x^2$  and  $y = x + 2$  :

$$x + 2 = 4 - x^2 \implies x^2 + x - 2 = 0 \implies (x + 2)(x - 1) = 0$$

$$\implies x = -2, x = 1$$

Note that  $-2 \in [-3, 0]$  while  $1 \notin [-3, 0]$

$$\text{Area} = \int_{-3}^{-2} [(x + 2) - (4 - x^2)] dx + \int_{-2}^0 [(4 - x^2) - (x + 2)] dx$$

$$= \int_{-3}^{-2} (x^2 + x - 2) dx + \int_{-2}^0 (-x^2 - x + 2) dx$$

$$= \left[ \frac{x^3}{3} + \frac{x^2}{2} - 2x \right]_{-3}^{-2} + \left[ -\frac{x^3}{3} - \frac{x^2}{2} + 2x \right]_{-2}^0$$

$$= \left[ \left( \frac{-8}{3} + \frac{4}{2} - 4 \right) - \left( \frac{-27}{3} + \frac{9}{2} - 6 \right) \right] + \left[ (0 - 0 + 0) - \left( \frac{8}{3} - \frac{4}{2} - 4 \right) \right]$$

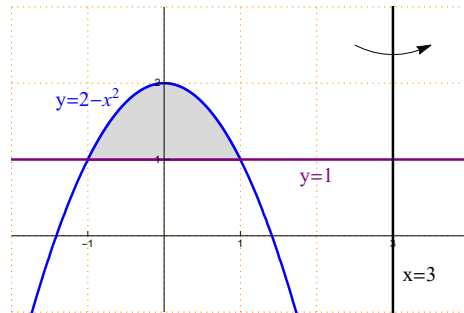
$$= \frac{-8}{3} + 6 + 9 - \frac{9}{2} - 6 - \frac{8}{3} + 6 = 15 - \frac{16}{3} - \frac{9}{2} = \frac{90 - 32 - 27}{6} = \frac{31}{6}$$

- (b) Find the volume obtained by revolving the region bounded by the curves  $y = -x^2 + 2$ ,  $y = 1$  about the line of equation  $x = 3$ .

Solution :

$y = -x^2 + 2$  is a parabola opens downwards with vertex  $(0, 2)$

$y = 1$  is a straight line parallel to the  $x$ -axis and passing through  $(0, 1)$



Points of intersections of  $y = 2 - x^2$  and  $y = 1$  :

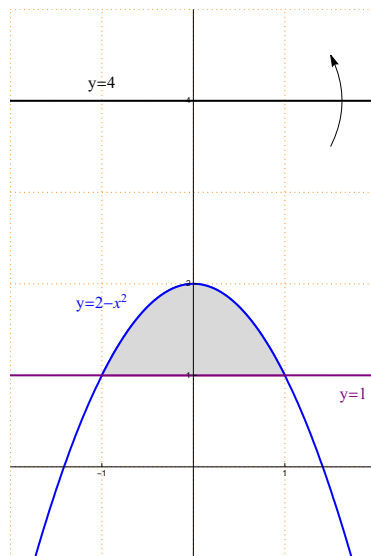
$$1 = 2 - x^2 \implies x^2 - 1 = 0 \implies (x - 1)(x + 1) = 0 \implies x = \pm 1$$

Using Cylindrical shells method :

$$\begin{aligned} \text{Volume} &= 2\pi \int_{-1}^1 (3 - x) [(2 - x^2) - 1] dx = 2\pi \int_{-1}^1 (3 - x)(1 - x^2) dx \\ &= 2\pi \int (3 - 3x^2 - x + x^3) dx = 2\pi \int (x^3 - 3x^2 - x + 3) dx \\ &= 2\pi \left[ \frac{x^4}{4} - x^3 - \frac{x^2}{2} + 3x \right]_{-1}^1 = 2\pi \left[ \left( \frac{1}{4} - 1 - \frac{1}{2} + 3 \right) - \left( \frac{1}{4} + 1 - \frac{1}{2} - 3 \right) \right] \\ &= 2\pi \left[ \left( 2 - \frac{1}{4} \right) - \left( -2 - \frac{1}{4} \right) \right] = 2\pi \left( 2 - \frac{1}{4} + 2 + \frac{1}{4} \right) = 8\pi \end{aligned}$$

- (c) Setup an integral for the volume obtained by revolving the region in part (b) about the line of equation  $y = 4$ .

Solution :



Using Washer Method :

$$\begin{aligned} \text{Volume} &= \pi \int_{-1}^1 \left[ (4-1)^2 - (4-(2-x^2))^2 \right] dx = \pi \int_{-1}^1 \left[ (3)^2 - (x^2+2)^2 \right] dx \\ &= \pi \int_{-1}^1 [9 - (x^4 + 2x^2 + 4)] dx = \pi \int_{-1}^1 (-x^4 - 2x^2 + 5) dx \end{aligned}$$

**Q5.** (3+3+3 Marks)

- (a) Find the length of the curve given by  $r = \left( \cos \left( \frac{\theta}{2} \right) \right)^2$ ,  $0 \leq \theta \leq \pi$ .

Solution :

$$\frac{dr}{d\theta} = 2 \cos \left( \frac{\theta}{2} \right) \left( -\sin \left( \frac{\theta}{2} \right) \frac{1}{2} \right) = -\cos \left( \frac{\theta}{2} \right) \sin \left( \frac{\theta}{2} \right)$$

$$\begin{aligned} L &= \int_0^\pi \sqrt{(r(\theta))^2 + \left( \frac{dr}{d\theta} \right)^2} d\theta \\ &= \int_0^\pi \sqrt{\left( \cos^2 \left( \frac{\theta}{2} \right) \right)^2 + \left( -\cos \left( \frac{\theta}{2} \right) \sin \left( \frac{\theta}{2} \right) \right)^2} d\theta \\ &= \int_0^\pi \sqrt{\cos^4 \left( \frac{\theta}{2} \right) + \cos^2 \left( \frac{\theta}{2} \right) \sin^2 \left( \frac{\theta}{2} \right)} d\theta \\ &= \int_0^\pi \sqrt{\cos^2 \left( \frac{\theta}{2} \right) \left[ \cos^2 \left( \frac{\theta}{2} \right) + \sin^2 \left( \frac{\theta}{2} \right) \right]} d\theta = \int_0^\pi \sqrt{\cos^2 \left( \frac{\theta}{2} \right)} d\theta \\ &= \int_0^\pi \left| \cos \left( \frac{\theta}{2} \right) \right| d\theta = \int_0^\pi \cos \left( \frac{\theta}{2} \right) d\theta = 2 \int_0^\pi \cos \left( \frac{\theta}{2} \right) \left( \frac{1}{2} \right) d\theta \\ &= 2 \left[ \sin \left( \frac{\theta}{2} \right) \right]_0^\pi = 2 \left[ \sin \left( \frac{\pi}{2} \right) - \sin(0) \right] 2(1-0) = 2 \end{aligned}$$

- (b) Sketch the region  $R$  that lies inside the curve  $r = 1 - \sin \theta$  and outside the curve  $r = 1$  and find its area.

Solution :

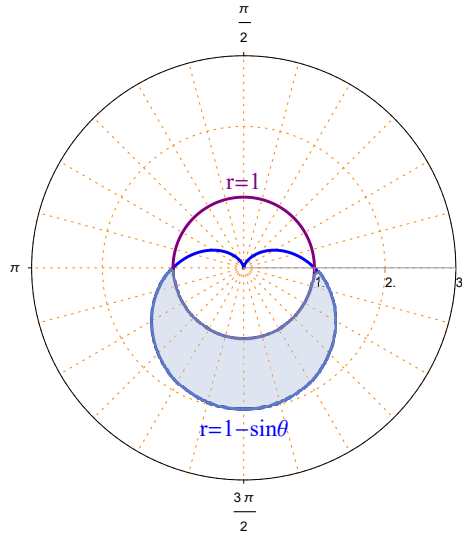
$r = r = 1 - \sin \theta$  is a cardioid, symmetric with respect to the line  $\theta = \frac{\pi}{2}$

$r = 1$  is the unit circle.

Points of intersection of  $r = 1 - \sin \theta$  and  $r = 1$  :

$$1 = 1 - \sin \theta \implies \sin \theta = 0 \implies \theta = \pi, \theta = 2\pi$$





$$\begin{aligned}
 \text{Area} &= \frac{1}{2} \int_{\pi}^{2\pi} \left[ (1 - \sin \theta)^2 - (1)^2 \right] d\theta = \frac{1}{2} \int_{\pi}^{2\pi} [1 - 2 \sin \theta + \sin^2 \theta - 1] d\theta \\
 &= \frac{1}{2} \int_{\pi}^{2\pi} [\sin^2 \theta - 2 \sin \theta] d\theta = \frac{1}{2} \int_{\pi}^{2\pi} \left[ \left( \frac{1 - \cos 2\theta}{2} \right) - 2 \sin \theta \right] d\theta \\
 &= \frac{1}{2} \int_{\pi}^{2\pi} \left[ \frac{1}{2} - \frac{\cos 2\theta}{2} - 2 \sin \theta \right] d\theta = \frac{1}{2} \left[ \frac{\theta}{2} - \frac{\sin 2\theta}{4} + 2 \cos \theta \right]_{\pi}^{2\pi} \\
 &= \frac{1}{2} \left[ (\pi - 0 + 2) - \left( \frac{\pi}{2} - 0 - 2 \right) \right] = \frac{1}{2} \left( \pi + 2 - \frac{\pi}{2} + 2 \right) \\
 &= \frac{1}{2} \left( 4 + \frac{\pi}{2} \right) = 2 + \frac{\pi}{4}
 \end{aligned}$$

- (c) Find the area of the surface obtained by revolving the curve  $r = 2 \cos \theta$ ,  $0 \leq \theta \leq \frac{\pi}{4}$  about the  $y$ -axis.

Solution :  $\frac{dr}{d\theta} = -2 \sin \theta$

$$\begin{aligned}
 S.A &= 2\pi \int_0^{\frac{\pi}{4}} |2 \cos \theta \cos \theta| \sqrt{(2 \cos \theta)^2 + (-2 \sin \theta)^2} d\theta \\
 &= 2\pi \int_0^{\frac{\pi}{4}} |2 \cos^2 \theta| \sqrt{4 \cos^2 \theta + 4 \sin^2 \theta} d\theta = 2\pi \int_0^{\frac{\pi}{4}} 2 \cos^2 \theta \sqrt{4 (\cos^2 \theta + \sin^2 \theta)} d\theta \\
 &= 2\pi \int_0^{\frac{\pi}{4}} 2 \cos^2 \theta (2) d\theta = 4\pi \int_0^{\frac{\pi}{4}} 2 \left( \frac{1 + \cos 2\theta}{2} \right) d\theta = 4\pi \int_0^{\frac{\pi}{4}} (1 + \cos 2\theta) d\theta \\
 &= 4\pi \left[ \theta + \frac{\sin 2\theta}{2} \right]_0^{\frac{\pi}{4}} = 4\pi \left[ \left( \frac{\pi}{4} + \frac{1}{2} \right) - (0 + 0) \right] = \pi^2 + 2\pi
 \end{aligned}$$

**M 106 - INTEGRAL CALCULUS**

**Solution of Home Work No. 1**

**Second semester 1441 H**

*Dr. Tariq A. Alfadhel*

Q.1 If  $\int_0^x g(t) dt = \frac{4x}{x+1}$  and  $g$  is continuous on  $[0, \infty)$ , find  $g(1)$ .

Solution :

Using Fundamental Theorem of Calculus

$$\frac{d}{dx} \int_0^x g(t) dt = \frac{d}{dx} \left( \frac{4x}{x+1} \right)$$

$$g(x) = \frac{4(x+1) - (1)4x}{(x+1)^2} = \frac{4x+4-4x}{(x+1)^2} = \frac{4}{(x+1)^2}$$

$$g(1) = \frac{4}{(1+1)^2} = \frac{4}{4} = 1$$

Q.2 Find the value of  $\alpha$  so that  $\sum_{k=5}^{15} (k^2 - \alpha k) = 990$ .

Solution :

$$\sum_{k=5}^{15} (k^2 - \alpha k) = 990 \implies \sum_{k=1}^{15} (k^2 - \alpha k) - \sum_{k=1}^4 (k^2 - \alpha k) = 990$$

$$\implies \sum_{k=1}^{15} k^2 - \alpha \sum_{k=1}^{15} k - \left( \sum_{k=1}^4 k^2 - \alpha \sum_{k=1}^4 k \right) = 990$$

$$\implies \left( \sum_{k=1}^{15} k^2 - \sum_{k=1}^4 k^2 \right) + \alpha \left( \sum_{k=1}^4 k - \sum_{k=1}^{15} k \right) = 990$$

$$\implies \left( \frac{15 \times 16 \times 31}{6} + \frac{4 \times 5 \times 9}{6} \right) - \left( \frac{15 \times 16}{2} - \frac{4 \times 5}{2} \right) \alpha = 990$$

$$\implies (1240 - 30) + (10 - 120)\alpha = 990$$

$$\implies 1210 - 110\alpha = 990 \implies -110\alpha = -220 \implies \alpha = \frac{-220}{-110} = 2$$

Q.3 Find the value of  $c$  in the mean value theorem for  $f(x) = \sqrt{x+1}$  on  $[-1, 8]$ .

Solution :

$$\text{Using the formula } (b-a) f(c) = \int_a^b f(x) dx$$

where  $f(x) = \sqrt{x+1}$  and  $[a, b] = [-1, 8]$

$$(8 - (-1)) \sqrt{c+1} = \int_{-1}^8 \sqrt{x+1} dx = \int_{-1}^8 (x+1)^{\frac{1}{2}} dx$$

$$9 \sqrt{c+1} = \left[ \frac{2}{3} (x+1)^{\frac{3}{2}} \right]_{-1}^8 = \frac{2}{3} (9)^{\frac{3}{2}} - 0 = \frac{2}{3} (27) = 18$$

$$\implies 9 \sqrt{c+1} = 18 \implies \sqrt{c+1} = 2 \implies c+1 = 4 \implies c = 3 \in (-1, 8)$$

Q.4 If  $y = e^x (\cos x)^{x^2}$ , find  $y'$ .

Solution :

$$\ln |y| = \ln \left| e^x (\cos x)^{x^2} \right| = \ln |e^x| + \ln \left| (\cos x)^{x^2} \right|$$

$$\ln |y| = x \ln e + x^2 \ln |\cos x| = x + x^2 \ln |\cos x|$$

Differentiating both sides with respect to  $x$  :

$$\frac{y'}{y} = 1 + (2x) \ln |\cos x| + x^2 \left( \frac{-\sin x}{\cos x} \right) = 1 + 2x \ln |\cos x| - \frac{x^2 \sin x}{\cos x}$$

$$y' = y [1 + 2x \ln |\cos x| - x^2 \tan x]$$

$$y' = e^x (\cos x)^{x^2} [1 + 2x \ln |\cos x| - x^2 \tan x]$$

Q.5 Evaluate the following integrals :

$$(a) \int \frac{x^2}{\sqrt[3]{7-6x^3}} dx$$

Solution :

$$\int \frac{x^2}{\sqrt[3]{7-6x^3}} dx = \int x^2 (7-6x^3)^{-\frac{1}{3}} dx = \frac{1}{-18} \int (7-6x^3)^{-\frac{1}{3}} (-18x^2) dx$$

$$= -\frac{1}{18} \frac{(7-6x^3)^{\frac{2}{3}}}{\frac{2}{3}} + c = -\frac{(7-6x^3)^{\frac{2}{3}}}{12} + c$$

$$(b) \int 5^x 2^{5^x} dx$$

Solution :

$$\int 5^x 2^{5^x} dx = \frac{1}{\ln 5} \int 2^{5^x} (5^x \ln 5) dx = \frac{1}{\ln 5} \frac{2^{5^x}}{\ln 2} + c$$

$$(c) \int \frac{\sqrt{x}}{\sqrt{1+4x^3}} dx$$

Solution :

$$\begin{aligned}\int \frac{\sqrt{x}}{\sqrt{1+4x^3}} dx &= \int \frac{x^{\frac{1}{2}}}{\sqrt{(1)^2 + (2x^{\frac{3}{2}})^2}} dx = \frac{1}{3} \int \frac{3x^{\frac{1}{2}}}{\sqrt{(1)^2 + (2x^{\frac{3}{2}})^2}} dx \\ &= \frac{1}{3} \sinh^{-1} \left( 2x^{\frac{3}{2}} \right) + c\end{aligned}$$

$$(d) \int \frac{dx}{x\sqrt{x^6-16}}$$

Solution :

$$\begin{aligned}\int \frac{dx}{x\sqrt{x^6-16}} &= \int \frac{1}{x\sqrt{(x^3)^2-(4)^2}} dx = \int \frac{x^2}{x^2 \cdot x \sqrt{(x^3)^2-(4)^2}} dx \\ &= \frac{1}{3} \int \frac{3x^2}{x^3 \sqrt{(x^3)^2-(4)^2}} dx = \frac{1}{3} \frac{1}{4} \sec^{-1} \left( \frac{x^3}{4} \right) + c = \frac{1}{12} \sec^{-1} \left( \frac{x^3}{4} \right) + c\end{aligned}$$

$$(e) \int \frac{dx}{\sqrt{25+e^{4x}}}$$

Solution :

$$\begin{aligned}\int \frac{dx}{\sqrt{25+e^{4x}}} &= \int \frac{1}{\sqrt{(5)^2+(e^{2x})^2}} dx = \int \frac{e^{2x}}{e^{2x} \sqrt{(5)^2+(e^{2x})^2}} dx \\ &= \frac{1}{2} \int \frac{2e^{2x}}{e^{2x} \sqrt{(5)^2+(e^{2x})^2}} dx = \frac{1}{2} \left( -\frac{1}{5} \operatorname{csch}^{-1} \left( \frac{e^{2x}}{5} \right) \right) + c \\ &= -\frac{1}{10} \operatorname{csch}^{-1} \left( \frac{e^{2x}}{5} \right) + c\end{aligned}$$

**M 106 - INTEGRAL CALCULUS**

**Solution of Home Work No.2**

**Second semester 1441 H**

*Dr. Tariq A. Alfadhel*

Q.1 Find  $\lim_{x \rightarrow 0^+} (\sin x)^{2x}$

Solution :  $\lim_{x \rightarrow 0^+} (\sin x)^{2x} \quad (0^0)$

Put  $y = (\sin x)^{2x} \iff \ln |y| = \ln |(\sin x)^{2x}| = 2x \ln |\sin x|$

$\lim_{x \rightarrow 0^+} \ln |y| = \lim_{x \rightarrow 0^+} 2x \ln |\sin x| \quad (0.(-\infty))$

$\lim_{x \rightarrow 0^+} \ln |y| = \lim_{x \rightarrow 0^+} 2x \ln |\sin x| = \lim_{x \rightarrow 0^+} \frac{2 \ln |\sin x|}{\left(\frac{1}{x}\right)} \quad \left(\frac{-\infty}{\infty}\right)$

Using L'Hôpital's rule

$\lim_{x \rightarrow 0^+} \ln |y| = \lim_{x \rightarrow 0^+} \frac{2 \left(\frac{\cos x}{\sin x}\right)}{\left(-\frac{1}{x^2}\right)} = \lim_{x \rightarrow 0^+} \frac{-2x^2 \cos x}{\sin x}$

$= \lim_{x \rightarrow 0^+} \left(-2x \frac{x}{\sin x} \cos x\right) = -2(0).(1).(1) = 0$

Therefore,  $\lim_{x \rightarrow 0^+} (\sin x)^{2x} = e^0 = 1$

Q.2 Evaluate the following integrals :

(1)  $\int x^2 \ln |x| dx$

Solution : Using integration by parts.

$$u = \ln |x| \quad dv = x^2 dx$$

$$du = \frac{1}{x} dx \quad v = \frac{x^3}{3}$$

$$\int x^2 \ln |x| dx = \frac{x^3}{3} \ln |x| - \int \frac{x^3}{3} \frac{1}{x} dx = \frac{x^3}{3} \ln |x| - \frac{1}{3} \int x^2 dx$$

$$= \frac{x^3}{3} \ln |x| - \frac{1}{3} \frac{x^3}{3} + c = \frac{x^3}{3} \ln |x| - \frac{x^3}{9} + c$$

(2)  $\int \sin^4 x \cos^5 x dx$

Solution : Using the substitution  $u = \sin x$

$$du = \cos x dx$$

$$\begin{aligned}
\int \sin^4 x \cos^5 x \, dx &= \int \sin^4 x \cos^4 x \cos x \, dx = \int \sin^4 x (\cos^2 x)^2 \cos x \, dx \\
&= \int \sin^4 x (1 - \sin^2 x)^2 \cos x \, dx = \int u^4 (1 - u^2)^2 \, du = \int u^4 (1 - 2u^2 + u^4) \, du \\
&= \int (u^4 - 2u^6 + u^8) \, du = \frac{u^5}{5} - 2\frac{u^7}{7} + \frac{u^9}{9} + c = \frac{\sin^5 x}{5} - \frac{2\sin^7 x}{7} + \frac{\sin^9 x}{9} + c
\end{aligned}$$

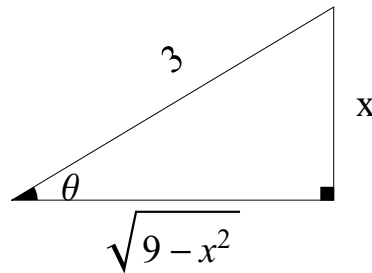
$$(3) \int \frac{x^2}{\sqrt{9-x^2}} \, dx$$

Solution : Using Trigonometric substitutions.

$$\text{Put } x = 3 \sin \theta \implies \sin \theta = \frac{x}{3}$$

$$dx = 3 \cos \theta \, d\theta$$

$$\begin{aligned}
\int \frac{x^2}{\sqrt{9-x^2}} \, dx &= \int \frac{(3 \sin \theta)^2 3 \cos \theta}{\sqrt{9-9 \sin^2 \theta}} \, d\theta = \int \frac{3^3 \sin^2 \theta \cos \theta}{\sqrt{9(1-\sin^2 \theta)}} \, d\theta \\
&= \int \frac{3^3 \sin^2 \theta \cos \theta}{\sqrt{9 \cos^2 \theta}} \, d\theta = \int \frac{3^3 \sin^2 \theta \cos \theta}{3 \cos \theta} \, d\theta = 9 \int \sin^2 \theta \, d\theta \\
&= 9 \int \frac{1}{2} (1 - \cos 2\theta) \, d\theta = \frac{9}{2} \left[ \theta - \frac{\sin 2\theta}{2} \right] + c = \frac{9}{2} \left[ \theta - \frac{2 \sin \theta \cos \theta}{2} \right] + c \\
&= \frac{9}{2} (\theta - \sin \theta \cos \theta) + c
\end{aligned}$$



$$\text{From the triangle : } \cos \theta = \frac{\sqrt{9-x^2}}{3}$$

$$\text{Note that } \sin \theta = \frac{x}{3} \implies \theta = \sin^{-1} \left( \frac{x}{3} \right)$$

$$\int \frac{x^2}{\sqrt{9-x^2}} \, dx = \frac{9}{2} \left[ \sin^{-1} \left( \frac{x}{3} \right) - \frac{x}{3} \frac{\sqrt{9-x^2}}{3} \right] + c$$

$$(4) \int \frac{x^2 + 3x + 8}{x^3 + 4x} \, dx$$

Solution : Using the method of partial fractions.

$$\frac{x^2 + 3x + 8}{x^3 + 4x} = \frac{x^2 + 3x + 8}{x(x^2 + 4)} = \frac{A}{x} + \frac{Bx + C}{x^2 + 4}$$

$$x^2 + 3x + 8 = A(x^2 + 4) + (Bx + C)x = Ax^2 + 4A + Bx^2 + Cx$$

$$x^2 + 3x + 8 = (A + B)x^2 + Cx + 4A$$

By comparing the coefficients of the two polynomials in both sides :

$$A + B = 1 \quad \longrightarrow (1)$$

$$C = 3 \quad \longrightarrow (2)$$

$$4A = 8 \quad \longrightarrow (3)$$

$$\text{From Equation (3) : } 4A = 8 \implies A = 2$$

$$\text{From Equation (1) : } A + B = 1 \implies 2 + B = 1 \implies B = -1$$

$$\begin{aligned} \int \frac{x^2 + 3x + 8}{x^3 + 4x} dx &= \int \left( \frac{2}{x} + \frac{-x + 3}{x^2 + 4} \right) dx \\ &= \int \frac{2}{x} dx + \int \left( \frac{-x}{x^2 + 4} + \frac{3}{x^2 + 4} \right) dx \\ &= 2 \int \frac{1}{x} - \frac{1}{2} \int \frac{2x}{x^2 + 4} dx + 3 \int \frac{1}{(x)^2 + (2)^2} dx \\ &= 2 \ln|x| - \frac{1}{2} \ln(x^2 + 4) + \frac{3}{2} \tan^{-1} \left( \frac{x}{2} \right) + c \end{aligned}$$

$$(5) \int \frac{dx}{\sqrt{-x^2 + 6x}}$$

Solution : By completing the square.

$$\begin{aligned} \int \frac{dx}{\sqrt{-x^2 + 6x}} &= \int \frac{dx}{\sqrt{-(x^2 - 6x + 9) + 9}} = \int \frac{dx}{\sqrt{9 - (x - 3)^2}} \\ &= \int \frac{1}{\sqrt{(3)^2 - (x - 3)^2}} dx = \sin^{-1} \left( \frac{x - 3}{3} \right) + c \end{aligned}$$

$$(6) \int \frac{dx}{4 + 5 \cos x}$$

Solution : Using Half-angle substitution.

$$\text{Put } u = \tan \left( \frac{x}{2} \right), \text{ then } \cos x = \frac{1 - u^2}{1 + u^2} \text{ and } dx = \frac{2}{1 + u^2} du$$

$$\begin{aligned} \int \frac{dx}{4 + 5 \cos x} &= \int \frac{1}{4 + 5 \left( \frac{1 - u^2}{1 + u^2} \right)} \frac{2}{1 + u^2} du = \int \frac{1 + u^2}{4(1 + u^2) + 5(1 - u^2)} \frac{2}{1 + u^2} du \\ &= \int \frac{2}{4 + 4u^2 + 5 - 5u^2} du = \int \frac{2}{9 - u^2} du = 2 \int \frac{1}{(3)^2 - (u)^2} du \end{aligned}$$

$$= 2 \left[ \frac{1}{3} \tanh^{-1} \left( \frac{u}{3} \right) \right] + c = \frac{2}{3} \tanh^{-1} \left( \frac{1}{3} \tan \left( \frac{x}{2} \right) \right) + c$$

Q.3 Does the integral  $\int_0^{\infty} \frac{x}{(1+x^2)^3} dx$  converge? Find its value if it does.

$$\begin{aligned} \text{Solution : } \int_0^{\infty} \frac{x}{(1+x^2)^3} dx &= \lim_{t \rightarrow \infty} \int_0^t \frac{x}{(1+x^2)^3} dx \\ &= \lim_{t \rightarrow \infty} \left( \frac{1}{2} \int_0^t 2x (1+x^2)^{-3} \right) = \lim_{t \rightarrow \infty} \left( \frac{1}{2} \left[ \frac{(1+x^2)^{-2}}{-2} \right]_0^t \right) \\ &= \lim_{t \rightarrow \infty} \left( -\frac{1}{4} \left[ \frac{1}{(1+x^2)^2} \right]_0^t \right) = \lim_{t \rightarrow \infty} \left( -\frac{1}{4} \left[ \frac{1}{(1+t^2)^2} - \frac{1}{(1+0)^2} \right] \right) \\ &= -\frac{1}{4} (0 - 1) = \frac{1}{4} \end{aligned}$$

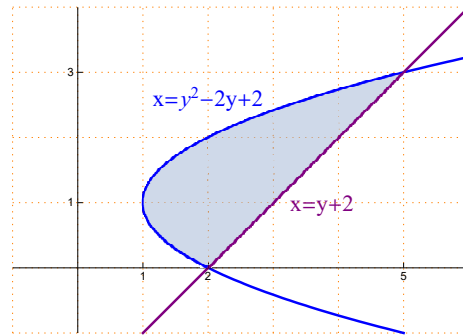
Hence, the improper integral  $\int_0^{\infty} \frac{x}{(1+x^2)^3} dx$  converges to  $\frac{1}{4}$ .

Q.4 Sketch the region bounded by the graph of the curves  $x = y^2 - 2y + 2$ ,  $x = y + 2$  and calculate its area.

Solution :

$x = y^2 - 2y + 2 = (y^2 - 2y + 1) + 1 = (y - 1)^2 + 1$  is a parabola opens to the right with vertex  $(1, 1)$

$x = y + 2 \implies y = x - 2$  is a straight line passing through  $(2, 0)$  with slope equals 1 .



Points of intersection of  $x = y^2 - 2y + 2$  and  $x = y + 2$  :

$$y^2 - 2y + 2 = y + 2 \implies y^2 - 3y = 0 \implies y(y - 3) = 0 \implies y = 0, y = 3$$

$$\begin{aligned} \text{Area} &= \int_0^3 [(y + 2) - (y^2 - 2y + 2)] dy = \int_0^3 (3y - y^2) dy \\ &= \left[ 3 \frac{y^2}{2} - \frac{y^3}{3} \right]_0^3 = \left( 3 \left( \frac{9}{2} \right) - \frac{27}{3} \right) - (0 - 0) = \frac{27}{2} - 9 = \frac{9}{2} \end{aligned}$$