

Chapter 2

Continuous Random Variable

Department of Statistics and Operations Research



Edited by: Reem Alghamdi

February 2020

- 1 Probability Density Function
 - Probability Density Function Definition and Examples
 - Cumulative Distribution Function
 - Mean of the Random Variable
 - Variance of Random Variable

- 2 Some Continuous Probability Distributions
 - Continuous Uniform Distribution
 - Normal Distribution
 - Exponential Distribution
 - Chi-square Distribution
 - T-Distribution
 - F-Distribution

- 1 Probability Density Function
 - Probability Density Function Definition and Examples
 - Cumulative Distribution Function
 - Mean of the Random Variable
 - Variance of Random Variable

- 2 Some Continuous Probability Distributions
 - Continuous Uniform Distribution
 - Normal Distribution
 - Exponential Distribution
 - Chi-square Distribution
 - T-Distribution
 - F-Distribution

1.1) Probability Density Function

Definition

The function $f(x)$ is a probability density function (pdf) for the continuous random variable X , defined over the set of real numbers, if

- ① $f(x) \geq 0$, for all $x \in R$.
- ② $\int_{-\infty}^{\infty} f(x)dx = 1$.
- ③ $P(a \leq X \leq b) = \int_a^b f(x)dx$.

Example 1 Suppose that the error in the reaction temperature, in $^{\circ}\text{C}$, for a controlled laboratory experiment is a continuous random variable X having the probability density function

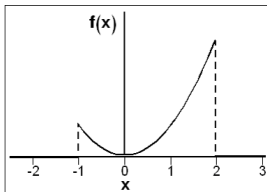
$$f(x) = \begin{cases} \frac{x^2}{3}, & -1 < x < 2 \\ 0, & \text{elsewhere} \end{cases}$$

- (a) Verify that $f(x)$ is a density function.
- (b) Find $P(0 \leq X \leq 1)$.
- (c) Find $P(0 < X < 1)$.

Solution

Let X = the error in the reaction temperature, in $^{\circ}\text{C}$.

$$f(x) = \begin{cases} \frac{x^2}{3}, & -1 < x < 2 \\ 0, & \text{elsewhere.} \end{cases}$$

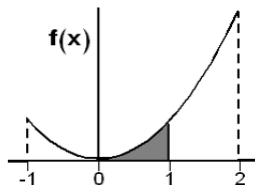


(a) $f(x) > 0$ because $f(x)$ is quadratic function.

$$\begin{aligned} \int_{-\infty}^{+\infty} f(x) dx &= \int_{-1}^2 f(x) dx \\ &= \int_{-1}^2 \frac{x^2}{3} dx \\ &= \frac{1}{3} \times \frac{1}{3} [x^3]_{-1}^2 = 1 \end{aligned}$$

(b)

$$\begin{aligned}P(0 \leq X \leq 1) &= \int_0^1 f(x) dx \\&= \int_0^1 \frac{x^2}{3} dx \\&= \frac{1}{3} \times \frac{1}{3} [x^3]_0^1 = \frac{1}{9}\end{aligned}$$



(c) By the same way, we have

$$P(0 < X < 1) = \frac{1}{9}$$

1.2) Cumulative Distribution Function

Definition

The cumulative distribution function $F(x)$ of a continuous random variable X with density function $f(x)$ is

$$F(x) = P(X \leq x) = \int_{-\infty}^x f(t)dt, \quad \text{for } -\infty < x < \infty.$$

Example 2

For the density function of Example 1, find $F(x)$, and use it to evaluate $P(0 < X \leq 1)$.

Solution

By definition, we have

$$\begin{aligned} F(x) &= P(X \leq x) = \int_{-\infty}^x f(t) dt \\ &= \int_{-1}^x \frac{t^2}{3} dt = \frac{1}{3} \int_{-1}^x t^3 dt \\ &= \frac{1}{9} t^3 \Big|_{-1}^x = \frac{1}{9} x^3 + \frac{1}{9} \end{aligned}$$

Therefore,

$$\begin{aligned} P(0 < X \leq 1) &= P(X \leq 1) - P(X < 0) \\ &= F(1) - F(0) \\ &= \frac{1}{9} \end{aligned}$$

1.3) Mean of the Random Variable

Definition

Let X be a random variable with probability distribution $f(x)$. The mean, or expected value, of X is

$$\mu = E(X) = \int_{-\infty}^{+\infty} xf(x)dx$$

Example 3

For the density function of Example 1, find $E(X)$.

Solution

$$\begin{aligned} E(X) &= \int_{-\infty}^{+\infty} xf(x)dx = \int_{-1}^2 xf(x)dx = \int_{-1}^2 x \frac{x^2}{3} dx \\ &= \frac{1}{3} \int_{-1}^2 x^3 dx = \frac{1}{12} (16 - 1) = \frac{15}{12} \end{aligned}$$

Theorem

Let X be a random variable with probability distribution $f(x)$.
The expected value of the random variable $g(X)$ is

$$\mu_{g(X)} = E[g(X)] = \int_{-\infty}^{+\infty} g(x)f(x)dx$$

Example 4

For the density function of Example 1, Find the expected value of the random variable $g(X)$ where $g(X) = 2X + 1$.

Solution

$$\begin{aligned} E[g(X)] &= \int_{-\infty}^{+\infty} g(x)f(x)dx = E[g(X)] = \int_{-1}^2 (2x + 1)\frac{x^2}{3}dx \\ &= \frac{21}{6} \end{aligned}$$

1.4) Variance of Random Variable

Theorem

Let X be a random variable with probability distribution $f(x)$ and mean μ . The variance of X is

$$\sigma^2 = E[(X - \mu)^2] = \int_{-\infty}^{\infty} (x - \mu)^2 f(x)$$

Theorem

Let X a random variable. The variance of a random variable X is

$$\sigma^2 = E(X^2) - E(X)^2.$$

Theorems

Let X a random variable. If a and b are constants, then

- $E(aX + b) = aE(X) + b.$
- $Var(aX + b) = a^2 Var(X).$

Theorem

The expected value of the sum or difference of two or more functions of a random variable X is the sum or difference of the expected values of the functions. That is,

$$E[g(X) \pm h(X)] = E[g(X)] \pm E[h(X)].$$

Example 5

Find the expected value of the random variable $g(X)$ where $g(X) = 2X + 1$ by the previous properties of the mean theorems and compare your result with the solution in Example 4. (H.W)

- 1 Probability Density Function
 - Probability Density Function Definition and Examples
 - Cumulative Distribution Function
 - Mean of the Random Variable
 - Variance of Random Variable

- 2 Some Continuous Probability Distributions
 - Continuous Uniform Distribution
 - Normal Distribution
 - Exponential Distribution
 - Chi-square Distribution
 - T-Distribution
 - F-Distribution

Continuous Uniform Distribution

Definition

The density function of the continuous uniform random variable X on the interval $[a, b]$, and denoted by $U(a, b)$, is

$$f(x) = \begin{cases} \frac{1}{b-a}, & a \leq x \leq b \\ 0, & \text{otherwise.} \end{cases}$$

Definition

The cumulative distribution function (CDF) of $U(a, b)$ is:

$$F(x) = \begin{cases} 0, & x < a \\ \frac{x-a}{b-a}, & a \leq x \leq b \\ 1, & x > b. \end{cases}$$

Theorem

The mean and variance of the uniform distribution $U(a, b)$ are

$$\mu = E(X) = \frac{a + b}{2} \text{ and } \sigma^2 = \frac{(b - a)^2}{12}$$

Example

A delivery company divides their packages into weight classes. Suppose packages in the 10 to 20 pound class are uniformly distributed, meaning that all weights within that class are equally likely to occur. If we are interested in studying packages within weights of 10 to 20 pound class,

- 1 Write the pdf of the random variable represents the weight of package 10 to 20 class.
- 2 Find the probability that the package weights are between 12 and 16.5 pounds
- 3 Find the probability that a package weights is at most 15 pounds
- 4 Find the probability that a package weights is at least 18 pounds
- 5 Find the probability that a package weights is exactly 17 pounds
- 6 Find the expected value and the variance
- 7 Derive the cumulative distribution function CDF of X

Solution

1. Let X represents the weight of package 10 to 20 class. Then the pdf is given by

$$f(x) = \begin{cases} \frac{1}{10}, & 10 \leq x \leq 20 \\ 0, & \text{elsewhere.} \end{cases}$$

2. $P(12 < X < 16.5) = \int_{12}^{16.5} \frac{1}{10} dt = \frac{t}{10} \Big|_{12}^{16.5} = \frac{1}{10}(16.5 - 12) = 0.45.$

3. $P(X \leq 15) = \int_{10}^{15} \frac{1}{10} dt = \frac{t}{10} \Big|_{10}^{15} = \frac{1}{10}(15 - 10) = 0.5.$

4. $P(X \geq 18) = 1 - P(X < 18) = 1 - [\int_{10}^{18} \frac{1}{10} dt] = 1 - [\frac{1}{10}(18 - 10)] = 0.2.$

Or: $P(X \geq 18) = [\int_{18}^{20} \frac{1}{10} dt] = \frac{1}{10}(20 - 18) = 0.2.$

Solution

5. $P(X = 17) = 0.$

6. $E(X) = \frac{10+20}{2} = 15$ and $\sigma^2 = \frac{(20-10)^2}{12} = 8.33.$

7. Since

$$F(x) = \int_{10}^x f(t)dt = \int_{10}^x \frac{1}{10}dt = \frac{x-10}{10}.$$

Then:

$$F(x) = \begin{cases} 0, & x < 10 \\ \frac{x-10}{10}, & 10 \leq x \leq 20 \\ 1, & x > 20. \end{cases}$$

2.1) Normal Distribution

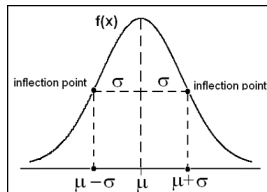
Definition

The density of the normal random variable X , with mean μ and variance σ^2 and denoted by $N(\mu, \sigma^2)$, is

$$f(x) = \frac{1}{\sigma\sqrt{2\pi}} e^{\frac{-1}{2\sigma^2}(x-\mu)^2}, \quad -\infty < x < \infty,$$

where $\pi = 3.14159\dots$ and $e = 2.71828\dots$

Note: The graph of the probability density function (pdf) of a normal distribution called the normal curve. The mean and variance are μ and σ^2 .



Properties of the Normal Distribution:

- ❶ The curve is symmetric and bell-shaped about a vertical axis through the mean, i.e. mean = mode = median = μ .
- ❷ The total area under the curve and above the horizontal axis is equal to 1.
- ❸ Area under the normal curve:
 - I. Approximately 68% of the values in a normally distributed population within 1 standard deviation from the mean, that is:
 $P(\mu - \sigma < X < \mu + \sigma)$
 - II. Approximately 95.5% of the values in a normally distributed population within 2 standard deviations from the mean, that is:
 $P(\mu - 2\sigma < X < \mu + 2\sigma)$
 - III. Approximately 99.7% of the values in a normally distributed population within 3 standard deviation from the mean, that is:
 $P(\mu - 3\sigma < X < \mu + 3\sigma)$

Standard Normal Distribution

Definition

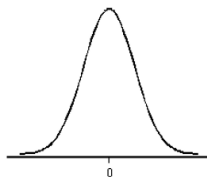
The density of the standard normal distribution Z is

$$f(x) = \frac{1}{\sqrt{2\pi}} e^{-\frac{1}{2}x^2}, \quad -\infty < x < \infty,$$

we write

$$Z \sim \text{Normal}(0, 1) \quad \text{or} \quad Z \sim N(0, 1)$$

Note: The graph of the probability density function (pdf) of a standard normal distribution.



Theorem

The mean and variance of standard normal distribution are 0 and 1, respectively.

Theorem

- 1 If X is normal random variable $N(\mu, \sigma^2)$, then the random variable $\frac{X - \mu}{\sigma}$ is a standard normal distribution Z with mean 0 and variance 1.
- 2 If X and Y are independent, $X \sim N(\mu_1, \sigma_1^2)$ and $Y \sim N(\mu_2, \sigma_2^2)$ then

$$X + Y \sim N(\mu_1 + \mu_2, \sigma_1^2 + \sigma_2^2)$$

Table: Probabilities of the standard normal distribution $Z \sim N(0, 1)$ of the form $P(Z \leq a)$ are tabulated.

Note: $P(Z = a) = 0$ for every a .

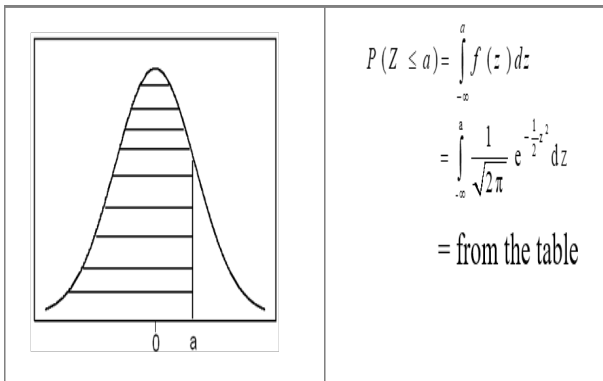
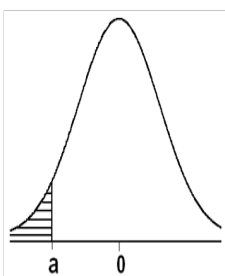
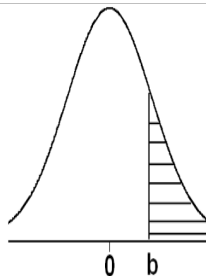


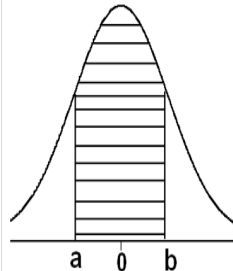
Figure: Areas under the Normal Curve



$$P(Z \leq a) = \text{From Table}$$



$$P(Z \geq b) = 1 - P(Z \leq b)$$



$$P(a \leq Z \leq b) = P(Z \leq b) - P(Z \leq a)$$

Z	0.00	0.01	0.02	0.03	0.04	0.05	0.06	0.07	0.08	0.09
-3.4	0.0003	0.0003	0.0003	0.0003	0.0003	0.0003	0.0003	0.0003	0.0003	0.0002
-3.3	0.0005	0.0005	0.0005	0.0004	0.0004	0.0004	0.0004	0.0004	0.0004	0.0003
-3.2	0.0007	0.0007	0.0006	0.0006	0.0006	0.0006	0.0006	0.0005	0.0005	0.0005
-3.1	0.0010	0.0009	0.0009	0.0009	0.0008	0.0008	0.0008	0.0008	0.0007	0.0007
-3.0	0.0013	0.0013	0.0013	0.0012	0.0012	0.0011	0.0011	0.0011	0.0010	0.0010
-2.9	0.0019	0.0018	0.0018	0.0017	0.0016	0.0016	0.0015	0.0015	0.0014	0.0014
-2.8	0.0026	0.0025	0.0024	0.0023	0.0023	0.0022	0.0021	0.0021	0.0020	0.0019
-2.7	0.0035	0.0034	0.0033	0.0032	0.0031	0.0030	0.0029	0.0028	0.0027	0.0026
-2.6	0.0047	0.0045	0.0044	0.0043	0.0041	0.0040	0.0039	0.0038	0.0037	0.0036
-2.5	0.0062	0.0060	0.0059	0.0057	0.0055	0.0054	0.0052	0.0051	0.0049	0.0048
-2.4	0.0082	0.0080	0.0078	0.0075	0.0073	0.0071	0.0069	0.0068	0.0066	0.0064
-2.3	0.0107	0.0104	0.0102	0.0099	0.0096	0.0094	0.0091	0.0089	0.0087	0.0084
-2.2	0.0139	0.0136	0.0132	0.0129	0.0125	0.0122	0.0119	0.0116	0.0113	0.0110
-2.1	0.0179	0.0174	0.0170	0.0166	0.0162	0.0158	0.0154	0.0150	0.0146	0.0143
-2.0	0.0228	0.0222	0.0217	0.0212	0.0207	0.0202	0.0197	0.0192	0.0188	0.0183
-1.9	0.0287	0.0281	0.0274	0.0268	0.0262	0.0256	0.0250	0.0244	0.0239	0.0233
-1.8	0.0359	0.0351	0.0344	0.0336	0.0329	0.0322	0.0314	0.0307	0.0301	0.0294
-1.7	0.0446	0.0436	0.0427	0.0418	0.0409	0.0401	0.0392	0.0384	0.0375	0.0367
-1.6	0.0548	0.0537	0.0526	0.0516	0.0505	0.0495	0.0485	0.0475	0.0465	0.0455
-1.5	0.0668	0.0655	0.0643	0.0630	0.0618	0.0606	0.0594	0.0582	0.0571	0.0559
-1.4	0.0808	0.0793	0.0778	0.0764	0.0749	0.0735	0.0721	0.0708	0.0694	0.0681
-1.3	0.0968	0.0951	0.0934	0.0918	0.0901	0.0885	0.0869	0.0853	0.0838	0.0823
-1.2	0.1151	0.1131	0.1112	0.1093	0.1075	0.1056	0.1038	0.1020	0.1003	0.0985
-1.1	0.1357	0.1335	0.1314	0.1292	0.1271	0.1251	0.1230	0.1210	0.1190	0.1170
-1.0	0.1587	0.1562	0.1539	0.1515	0.1492	0.1469	0.1446	0.1423	0.1401	0.1379
-0.9	0.1841	0.1814	0.1788	0.1762	0.1736	0.1711	0.1685	0.1660	0.1635	0.1611
-0.8	0.2119	0.2090	0.2061	0.2033	0.2005	0.1977	0.1949	0.1922	0.1894	0.1867
-0.7	0.2420	0.2389	0.2358	0.2327	0.2296	0.2266	0.2236	0.2206	0.2177	0.2148
-0.6	0.2743	0.2709	0.2676	0.2643	0.2611	0.2578	0.2546	0.2514	0.2483	0.2451
-0.5	0.3085	0.3050	0.3015	0.2981	0.2946	0.2912	0.2877	0.2843	0.2810	0.2776
-0.4	0.3446	0.3409	0.3372	0.3336	0.3300	0.3264	0.3228	0.3192	0.3156	0.3121
-0.3	0.3821	0.3783	0.3745	0.3707	0.3669	0.3632	0.3594	0.3557	0.3520	0.3483
-0.2	0.4207	0.4168	0.4129	0.4090	0.4052	0.4013	0.3974	0.3936	0.3897	0.3859
-0.1	0.4602	0.4562	0.4522	0.4483	0.4443	0.4404	0.4364	0.4325	0.4286	0.4247
-0.0	0.5000	0.4960	0.4920	0.4880	0.4840	0.4801	0.4761	0.4721	0.4681	0.4641

Figure: Areas under the Normal Curve $Z \sim \text{Normal}(0, 1)$

0.0	0.5000	0.5040	0.5080	0.5120	0.5160	0.5199	0.5239	0.5279	0.5319	0.5359
0.1	0.5398	0.5438	0.5478	0.5517	0.5557	0.5596	0.5636	0.5675	0.5714	0.5753
0.2	0.5793	0.5832	0.5871	0.5910	0.5948	0.5987	0.6026	0.6064	0.6103	0.6141
0.3	0.6179	0.6217	0.6255	0.6293	0.6331	0.6368	0.6406	0.6443	0.6480	0.6517
0.4	0.6554	0.6591	0.6628	0.6664	0.6700	0.6736	0.6772	0.6808	0.6844	0.6879
0.5	0.6915	0.6950	0.6985	0.7019	0.7054	0.7088	0.7123	0.7157	0.7190	0.7224
0.6	0.7257	0.7291	0.7324	0.7357	0.7389	0.7422	0.7454	0.7486	0.7517	0.7549
0.7	0.7580	0.7611	0.7642	0.7673	0.7704	0.7734	0.7764	0.7794	0.7823	0.7852
0.8	0.7881	0.7910	0.7939	0.7967	0.7995	0.8023	0.8051	0.8078	0.8106	0.8133
0.9	0.8159	0.8186	0.8212	0.8238	0.8264	0.8289	0.8315	0.8340	0.8365	0.8389
1.0	0.8413	0.8438	0.8461	0.8485	0.8508	0.8531	0.8554	0.8577	0.8599	0.8621
1.1	0.8643	0.8665	0.8686	0.8708	0.8729	0.8749	0.8770	0.8790	0.8810	0.8830
1.2	0.8849	0.8869	0.8888	0.8907	0.8925	0.8944	0.8962	0.8980	0.8997	0.9015
1.3	0.9032	0.9049	0.9066	0.9082	0.9099	0.9115	0.9131	0.9147	0.9162	0.9177
1.4	0.9192	0.9207	0.9222	0.9236	0.9251	0.9265	0.9279	0.9292	0.9306	0.9319
1.5	0.9332	0.9345	0.9357	0.9370	0.9382	0.9394	0.9406	0.9418	0.9429	0.9441
1.6	0.9452	0.9463	0.9474	0.9484	0.9495	0.9505	0.9515	0.9525	0.9535	0.9545
1.7	0.9554	0.9564	0.9573	0.9582	0.9591	0.9599	0.9608	0.9616	0.9625	0.9633
1.8	0.9641	0.9649	0.9656	0.9664	0.9671	0.9678	0.9686	0.9693	0.9699	0.9706
1.9	0.9713	0.9719	0.9726	0.9732	0.9738	0.9744	0.9750	0.9756	0.9761	0.9767
2.0	0.9772	0.9778	0.9783	0.9788	0.9793	0.9798	0.9803	0.9808	0.9812	0.9817
2.1	0.9821	0.9826	0.9830	0.9834	0.9838	0.9842	0.9846	0.9850	0.9854	0.9857
2.2	0.9861	0.9864	0.9868	0.9871	0.9875	0.9878	0.9881	0.9884	0.9887	0.9890
2.3	0.9893	0.9896	0.9898	0.9901	0.9904	0.9906	0.9909	0.9911	0.9913	0.9916
2.4	0.9918	0.9920	0.9922	0.9925	0.9927	0.9929	0.9931	0.9932	0.9934	0.9936
2.5	0.9938	0.9940	0.9941	0.9943	0.9945	0.9946	0.9948	0.9949	0.9951	0.9952
2.6	0.9953	0.9955	0.9956	0.9957	0.9959	0.9960	0.9961	0.9962	0.9963	0.9964
2.7	0.9965	0.9966	0.9967	0.9968	0.9969	0.9970	0.9971	0.9972	0.9973	0.9974
2.8	0.9974	0.9975	0.9976	0.9977	0.9977	0.9978	0.9979	0.9979	0.9980	0.9981
2.9	0.9981	0.9982	0.9982	0.9983	0.9984	0.9984	0.9985	0.9985	0.9986	0.9986
3.0	0.9987	0.9987	0.9987	0.9988	0.9988	0.9989	0.9989	0.9989	0.9990	0.9990
3.1	0.9990	0.9991	0.9991	0.9991	0.9992	0.9992	0.9992	0.9992	0.9993	0.9993
3.2	0.9993	0.9993	0.9994	0.9994	0.9994	0.9994	0.9994	0.9995	0.9995	0.9995
3.3	0.9995	0.9995	0.9995	0.9996	0.9996	0.9996	0.9996	0.9996	0.9996	0.9997
3.4	0.9997	0.9997	0.9997	0.9997	0.9997	0.9997	0.9997	0.9997	0.9997	0.9998

Example

Let $Z \sim N(0, 1)$, then calculate:

- ① the area under the normal curve up to $z = 1.58$.
- ② the area under the normal curve to the right of to $z = 1.84$.
- ③ the area between the mean and 0.85 standard deviations below the mean (i.e between -0.85 and 0).
- ④ the area above 2.15 .

Solution:

- ① $P(Z \leq 1.58) = 0.9429$
- ② $P(Z > 1.84) = 1 - P(Z \leq 1.84) = 0.0329$
- ③ $P(-0.85 < Z < 0) = P(Z < 0) - P(Z < -0.85) = 0.5 - 0.1977 = 0.3023$.
- ④ $P(Z > 2.15) = 1 - P(Z \leq 2.15) = 1 - 0.9842 = 0.0158$.

Example

Use the standard normal table to find the z-value for the following:

- 1 $P(Z \leq z) = 0.4090$.
- 2 $P(Z \leq z) = 0.80$.
- 3 $P(Z > z) = 0.4090$.
- 4 the value of z that leaves area of 0.10 from the right under the normal curve?

Solution

- 1 $z = -0.23$.
- 2 $z = \frac{0.84 + 0.85}{2} = 0.845$.
- 3 $P(Z \leq z) = 1 - P(Z > z) = 1 - 0.4090 = 0.5910$. Thus $z = 0.23$ corresponds to the area of 0.5910 to the left and 0.4090 to the right.
- 4 The value of z that leaves an area of 0.10 from the right under the normal curve can be obtained from $P(Z > z) = 0.1$, hence $P(Z \leq z) = 0.9$ and $z = 1.285$.

Example

Assume that the student's scores in the General Aptitude Tests (GAT) of the National center for Assessment in Higher Education (NCAHE) of Saudi Arabia follow normal distribution with mean $= 80$ and standard deviation $= 5$.

- ① What proportion of GAT scores falls below 75?
- ② What proportion of GAT scores falls between 76 and 82?

Solution

1

$$\begin{aligned}P(X < 75) &= P\left(\frac{X - \mu}{\sigma} < \frac{75 - \mu}{\sigma}\right) \\&= P\left(Z < \frac{75 - 80}{5}\right) \\&= P(Z < -1) \\&= 0.1587\end{aligned}$$

2

$$\begin{aligned}P(76 < X < 82) &= P\left(\frac{76 - \mu}{\sigma} < \frac{X - \mu}{\sigma} < \frac{82 - \mu}{\sigma}\right) \\&= P\left(\frac{76 - 80}{5} < Z < \frac{82 - 80}{5}\right) \\&= P(-0.8 < Z < 0.4) \\&= P(Z < 0.4) - P(Z < -0.8) \\&= 0.6554 - 0.2119 = 0.4435\end{aligned}$$

Example

The weight of Grouper fishes is normally distributed with a mean $\mu = 25$ lb and a standard deviations $\sigma = 3$ lb. Suppose that we select a fish randomly, then

- 1 Find the probability that the fish's weight is at most 23 lb.
- 2 Find the probability that the weight is between 20 lb and 27 lb.
- 3 Find the probability that the weight is more than 29 lb.
- 4 If 50 fishes are randomly selected, about how many would you expect to weigh less than 22 lb.

Solution

1.

$$\begin{aligned}P(X \leq 23) &= P\left(\frac{X - \mu}{\sigma} \leq \frac{23 - 25}{3}\right) \\&= P(Z \leq -0.67) \\&= 0.2514\end{aligned}$$

2.

$$\begin{aligned}P(20 < X < 27) &= P\left(\frac{20 - 25}{3} < \frac{X - \mu}{\sigma} < \frac{27 - 25}{3}\right) \\&= P(-1.67 < Z < 0.67) \\&= P(Z < 0.67) - P(Z < -1.67) \\&= 0.7486 - 0.0475 = 0.7011\end{aligned}$$

Solution

3.

$$\begin{aligned}P(X > 29) &= P\left(\frac{X - \mu}{\sigma} > \frac{29 - \mu}{\sigma}\right) \\&= P(Z > 1.33) \\&= 1 - 0.9082 = 0.0918.\end{aligned}$$

4.

$$\begin{aligned}P(X < 22) &= P(Z < -1) \\&= 0.1587\end{aligned}$$

then, $50(0.1587) = 7.935 \approx 8$ fishes.

Example

On an examination, the average grade was 74 and the standard deviation was 7. If 12% of the class are given A's, and the grades are curved to follow a normal distribution, what is the lowest possible A and the highest possible B?

Solution

Let X be the examination grade $X \sim N(74, 7^2)$, and let k be the lowest possible grade A, then $P(X \geq k) = 0.12$, hence $P(X < k) = 0.88 = P(Z < \frac{k-74}{7})$, and $\frac{k-74}{7} = 1.175$. Therefore, $k = 82.225$ which is 83 marks after rounding up. Therefore, the highest possible B is 83 marks.

Definition

The continuous random variable X has an exponential distribution, with parameter λ and denoted by $\exp(\lambda)$, if its density function is given by:

$$f(x) = \begin{cases} \lambda e^{-\lambda x}, & x \geq 0 \\ 0, & x < 0. \end{cases}$$

where $\lambda > 0$.

Definition

The cumulative distribution function (CDF) of $U(a, b)$ is:

$$F(x) = \begin{cases} 1 - e^{-\lambda x}, & x \geq 0 \\ 0, & x < 0. \end{cases}$$

Theorem

The mean and variance of the exponential distribution are $\mu = 1/\lambda$ and $\sigma^2 = 1/\lambda^2$.

Note:

- If X is the time of arrival of the first customer and if the average time is 30 minutes, then $\lambda = 1/30$.
- This distribution is commonly used to model waiting times between occurrences of rare events, lifetimes of electrical or mechanical devices.

Example

If the life length of a refrigerator follows the exponential distribution, and let X represents the life length of a refrigerator. Suppose the average life length for this type of refrigerator is 15 years. Answer the following:

- ① What is the probability that a refrigerator can be used for less than 6 years?
- ② What is the probability that this refrigerator can be used for more than 18 years?
- ③ What is the variance and the standard deviation of this random variable?

Solution

- ① The random variable X has an exponential distribution with mean $\mu = 1/\lambda = 15$. Thus the corresponding pdf of the life length of these refrigerators is:

$$f(x) = \begin{cases} \frac{1}{15} e^{-\frac{1}{15}x}, & x \geq 0 \end{cases}$$

$$P(X < 6) = 1 - e^{-6/15} \approx 0.3297.$$

②

$$P(X > 18) = e^{-18/15} \approx 0.3012.$$

- ③ $\text{Var}(X) = \sigma^2 = 1/\lambda^2 = 225$ and $\sigma = 15$

Definition

If S^2 is the variance of a random sample of size n taken from a normal population having the variance σ^2 , then the statistic

$$\chi^2 = \frac{(n-1)S^2}{\sigma^2}$$

has a chi-squared distribution with $\nu = n - 1$ degrees of freedom.

Note:

$$S^2 = \frac{1}{n-1} \left[\sum_{i=1}^n X_i^2 - n\bar{X}^2 \right]$$

Theorem

- 1 If X_1, X_2, \dots, X_n an independent random sample that have the same standard normal distribution, then $X = \sum_{i=1}^n X_i^2$ is chi-squared distribution, with degrees of freedom $\nu = n$.
- 2 The mean and variance of the chi-squared distribution χ^2 with ν degrees of freedom are $\mu = \nu$ and $\sigma^2 = 2\nu$.

Table A.5 Critical Values of the Chi-Squared Distribution



v	α									
	0.995	0.99	0.98	0.975	0.95	0.90	0.80	0.75	0.70	0.50
1	0.0 ⁴ 393	0.0 ³ 157	0.0 ³ 628	0.0 ³ 982	0.00393	0.0158	0.0642	0.102	0.148	0.455
2	0.0100	0.0201	0.0404	0.0506	0.103	0.211	0.446	0.575	0.713	1.386
3	0.0717	0.115	0.185	0.216	0.352	0.584	1.005	1.213	1.424	2.366
4	0.207	0.297	0.429	0.484	0.711	1.064	1.649	1.923	2.195	3.357
5	0.412	0.554	0.752	0.831	1.145	1.610	2.343	2.675	3.000	4.351
6	0.676	0.872	1.134	1.237	1.635	2.204	3.070	3.455	3.828	5.348
7	0.989	1.239	1.564	1.690	2.167	2.833	3.822	4.255	4.671	6.346
8	1.344	1.647	2.032	2.180	2.733	3.490	4.594	5.071	5.527	7.344
9	1.735	2.088	2.532	2.700	3.325	4.168	5.380	5.899	6.393	8.343
10	2.156	2.558	3.059	3.247	3.940	4.865	6.179	6.737	7.267	9.342
11	2.603	3.053	3.609	3.816	4.575	5.578	6.989	7.584	8.148	10.341
12	3.074	3.571	4.178	4.404	5.226	6.304	7.807	8.438	9.034	11.340
13	3.565	4.107	4.765	5.009	5.892	7.041	8.634	9.299	9.926	12.340
14	4.075	4.660	5.368	5.629	6.571	7.790	9.467	10.165	10.821	13.339
15	4.601	5.229	5.985	6.262	7.261	8.547	10.307	11.037	11.721	14.339
16	5.142	5.812	6.614	6.908	7.962	9.312	11.152	11.912	12.624	15.338
17	5.697	6.408	7.255	7.564	8.672	10.085	12.002	12.792	13.531	16.338
18	6.265	7.015	7.906	8.231	9.390	10.865	12.857	13.675	14.440	17.338
19	6.844	7.633	8.567	8.907	10.117	11.651	13.716	14.562	15.352	18.338
20	7.434	8.260	9.237	9.591	10.851	12.443	14.578	15.452	16.266	19.337
21	8.034	8.897	9.915	10.283	11.591	13.240	15.445	16.344	17.182	20.337
22	8.643	9.542	10.600	10.982	12.338	14.041	16.314	17.240	18.101	21.337
23	9.260	10.196	11.293	11.689	13.091	14.848	17.187	18.137	19.021	22.337
24	9.886	10.856	11.992	12.401	13.848	15.659	18.062	19.037	19.943	23.337
25	10.520	11.524	12.697	13.120	14.611	16.473	18.940	19.939	20.867	24.337
26	11.160	12.198	13.409	13.844	15.379	17.292	19.820	20.843	21.792	25.336
27	11.808	12.878	14.125	14.573	16.151	18.114	20.703	21.749	22.719	26.336
28	12.461	13.565	14.847	15.308	16.928	18.939	21.588	22.657	23.647	27.336
29	13.121	14.256	15.574	16.047	17.708	19.768	22.475	23.567	24.577	28.336
30	13.787	14.953	16.306	16.791	18.493	20.599	23.364	24.478	25.508	29.336
40	20.707	22.164	23.838	24.433	26.509	29.051	32.345	33.66	34.872	39.335
50	27.991	29.707	31.664	32.357	34.764	37.689	41.449	42.942	44.313	49.335
60	35.534	37.485	39.699	40.482	43.188	46.459	50.641	52.294	53.809	59.335

Figure: Table A.5 Critical Values of the Chi-Squared Distribution

Table A.5 (continued) Critical Values of the Chi-Squared Distribution

<i>v</i>	α									
	0.30	0.25	0.20	0.10	0.05	0.025	0.02	0.01	0.005	0.001
1	1.074	1.323	1.642	2.706	3.841	5.024	5.412	6.635	7.879	10.827
2	2.408	2.773	3.219	4.605	5.991	7.378	7.824	9.210	10.597	13.815
3	3.665	4.108	4.642	6.251	7.815	9.348	9.837	11.345	12.838	16.266
4	4.878	5.385	5.989	7.779	9.488	11.143	11.668	13.277	14.860	18.466
5	6.064	6.626	7.289	9.236	11.070	12.832	13.388	15.086	16.750	20.515
6	7.231	7.841	8.558	10.645	12.592	14.449	15.033	16.812	18.548	22.457
7	8.383	9.037	9.803	12.017	14.067	16.013	16.622	18.475	20.278	24.321
8	9.524	10.219	11.030	13.362	15.507	17.535	18.168	20.090	21.955	26.124
9	10.656	11.389	12.242	14.684	16.919	19.023	19.679	21.666	23.589	27.877
10	11.781	12.549	13.442	15.987	18.307	20.483	21.161	23.209	25.188	29.588
11	12.899	13.701	14.631	17.275	19.675	21.920	22.618	24.725	26.757	31.264
12	14.011	14.845	15.812	18.549	21.026	23.337	24.054	26.217	28.300	32.909
13	15.119	15.984	16.985	19.812	22.362	24.736	25.471	27.688	29.819	34.527
14	16.222	17.117	18.151	21.064	23.685	26.119	26.873	29.141	31.319	36.124
15	17.322	18.245	19.311	22.307	24.996	27.488	28.259	30.578	32.801	37.698
16	18.418	19.369	20.465	23.542	26.296	28.845	29.633	32.000	34.267	39.252
17	19.511	20.489	21.615	24.769	27.587	30.191	30.995	33.409	35.718	40.791
18	20.601	21.605	22.760	25.989	28.869	31.526	32.346	34.805	37.156	42.312
19	21.689	22.718	23.900	27.204	30.144	32.852	33.687	36.191	38.582	43.819
20	22.775	23.828	25.038	28.412	31.410	34.170	35.020	37.566	39.997	45.314
21	23.858	24.935	26.171	29.615	32.671	35.479	36.343	38.932	41.401	46.796
22	24.939	26.039	27.301	30.813	33.924	36.781	37.659	40.289	42.796	48.268
23	26.018	27.141	28.429	32.007	35.172	38.076	38.968	41.638	44.181	49.728
24	27.096	28.241	29.553	33.196	36.415	39.364	40.270	42.980	45.558	51.179
25	28.172	29.339	30.675	34.382	37.652	40.646	41.566	44.314	46.928	52.619
26	29.246	30.435	31.795	35.563	38.885	41.923	42.856	45.642	48.290	54.051
27	30.319	31.528	32.912	36.741	40.113	43.195	44.140	46.963	49.645	55.475
28	31.391	32.620	34.027	37.916	41.337	44.461	45.419	48.278	50.994	56.892
29	32.461	33.711	35.139	39.087	42.557	45.722	46.693	49.588	52.335	58.301
30	33.530	34.800	36.250	40.256	43.773	46.979	47.962	50.892	53.672	59.702
40	44.165	45.616	47.269	51.805	55.758	59.342	60.436	63.691	66.766	73.403
50	54.723	56.334	58.164	63.167	67.505	71.420	72.613	76.154	79.490	86.660
60	65.226	66.981	68.972	74.397	79.082	83.298	84.58	88.379	91.952	99.608

Example

For a chi-squared distribution, find

- (a) χ_{15}^2 when $\alpha = 0.025$;
- (b) χ_7^2 when $\alpha = 0.01$;
- (c) χ_{24}^2 when $\alpha = 0.05$.

Solution

- (a) 27.488.
- (b) 18.475.
- (c) 36.415.

Example

For a chi-squared distribution X , find χ_{α}^2 such that

- (a) $P(X > k) = 0.99$ when $\nu = 4$;
- (b) $P(X > k) = 0.025$ when $\nu = 19$;
- (c) $P(37.652 < X < k) = 0.045$ when $\nu = 25$.

Solution

- (a) $\chi_{\nu;\alpha}^2 = \chi_{4;0.99}^2 = 0.297$.
- (b) $\chi_{\nu;\alpha}^2 = \chi_{19;0.025}^2 = 32.852$.
- (c) $\chi_{25;0.05}^2 = 37.652$. Therefore, $\alpha = 0.05 - 0.045 = 0.005$.
Hence, $\chi_{\nu;\alpha}^2 = \chi_{25;0.005}^2 = 46.928$.

Theorem

Let Z be a standard normal random variable and V a chi-squared random variable with ν degrees of freedom. If Z and ν are independent, then the distribution of the random variable is:

$$T = \frac{Z}{\sqrt{V/\nu}}$$

This is known as the t -distribution with ν degrees of freedom.

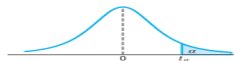
Corollary

Let X_1, X_2, \dots, X_n be independent random variables that are all normal with mean μ and standard deviation σ . Let

$$\bar{X} = \frac{1}{n} \sum_{i=1}^n X_i \quad \text{and} \quad S^2 = \frac{1}{n-1} \sum_{i=1}^n (X_i - \bar{X})^2$$

Then the random variable $T = \frac{\bar{X} - \mu}{S/\sqrt{n}}$ has a t -distribution with $\nu = n - 1$ degrees of freedom.

Table A.4 Critical Values of the t -Distribution



v	α						
	0.40	0.30	0.20	0.15	0.10	0.05	0.025
1	0.325	0.727	1.376	1.963	3.078	6.314	12.706
2	0.289	0.617	1.061	1.386	1.886	2.920	4.303
3	0.277	0.584	0.978	1.250	1.638	2.353	3.182
4	0.271	0.569	0.941	1.190	1.533	2.132	2.776
5	0.267	0.559	0.920	1.156	1.476	2.015	2.571
6	0.265	0.553	0.906	1.134	1.440	1.943	2.447
7	0.263	0.549	0.896	1.119	1.415	1.895	2.365
8	0.262	0.546	0.889	1.108	1.397	1.860	2.306
9	0.261	0.543	0.883	1.100	1.383	1.833	2.262
10	0.260	0.542	0.879	1.093	1.372	1.812	2.228
11	0.260	0.540	0.876	1.088	1.363	1.796	2.201
12	0.259	0.539	0.873	1.083	1.356	1.782	2.179
13	0.259	0.538	0.870	1.079	1.350	1.771	2.160
14	0.258	0.537	0.868	1.076	1.345	1.761	2.145
15	0.258	0.536	0.866	1.074	1.341	1.753	2.131
16	0.258	0.535	0.865	1.071	1.337	1.746	2.120
17	0.257	0.534	0.863	1.069	1.333	1.740	2.110
18	0.257	0.534	0.862	1.067	1.330	1.734	2.101
19	0.257	0.533	0.861	1.066	1.328	1.729	2.093
20	0.257	0.533	0.860	1.064	1.325	1.725	2.086
21	0.257	0.532	0.859	1.063	1.323	1.721	2.080
22	0.256	0.532	0.858	1.061	1.321	1.717	2.074
23	0.256	0.532	0.858	1.060	1.319	1.714	2.069
24	0.256	0.531	0.857	1.059	1.318	1.711	2.064
25	0.256	0.531	0.856	1.058	1.316	1.708	2.060
26	0.256	0.531	0.856	1.058	1.315	1.706	2.056
27	0.256	0.531	0.855	1.057	1.314	1.703	2.052
28	0.256	0.530	0.855	1.056	1.313	1.701	2.048
29	0.256	0.530	0.854	1.055	1.311	1.699	2.045
30	0.256	0.530	0.854	1.055	1.310	1.697	2.042
40	0.255	0.529	0.851	1.050	1.303	1.684	2.021
60	0.254	0.527	0.848	1.045	1.296	1.671	2.000
120	0.254	0.526	0.845	1.041	1.289	1.658	1.980
∞	0.253	0.524	0.842	1.036	1.282	1.645	1.960

Figure: Table A.4 Critical Values of the t -Distribution

Table A.4 (continued) Critical Values of the t -Distribution

v	α						
	0.02	0.015	0.01	0.0075	0.005	0.0025	0.0005
1	15.894	21.205	31.821	42.433	63.656	127.321	636.578
2	4.849	5.643	6.965	8.073	9.925	14.089	31.600
3	3.482	3.896	4.541	5.047	5.841	7.453	12.924
4	2.999	3.298	3.747	4.088	4.604	5.598	8.610
5	2.757	3.003	3.365	3.634	4.032	4.773	6.869
6	2.612	2.829	3.143	3.372	3.707	4.317	5.959
7	2.517	2.715	2.998	3.203	3.499	4.029	5.408
8	2.449	2.634	2.896	3.085	3.355	3.833	5.041
9	2.398	2.574	2.821	2.998	3.250	3.690	4.781
10	2.359	2.527	2.764	2.932	3.169	3.581	4.587
11	2.328	2.491	2.718	2.879	3.106	3.497	4.437
12	2.303	2.461	2.681	2.836	3.055	3.428	4.318
13	2.282	2.436	2.650	2.801	3.012	3.372	4.221
14	2.264	2.415	2.624	2.771	2.977	3.326	4.140
15	2.249	2.397	2.602	2.746	2.947	3.286	4.073
16	2.235	2.382	2.583	2.724	2.921	3.252	4.015
17	2.224	2.368	2.567	2.706	2.898	3.222	3.965
18	2.214	2.356	2.552	2.689	2.878	3.197	3.922
19	2.205	2.346	2.539	2.674	2.861	3.174	3.883
20	2.197	2.336	2.528	2.661	2.845	3.153	3.850
21	2.189	2.328	2.518	2.649	2.831	3.135	3.819
22	2.183	2.320	2.508	2.639	2.819	3.119	3.792
23	2.177	2.313	2.500	2.629	2.807	3.104	3.768
24	2.172	2.307	2.492	2.620	2.797	3.091	3.745
25	2.167	2.301	2.485	2.612	2.787	3.078	3.725
26	2.162	2.296	2.479	2.605	2.779	3.067	3.707
27	2.158	2.291	2.473	2.598	2.771	3.057	3.689
28	2.154	2.286	2.467	2.592	2.763	3.047	3.674
29	2.150	2.282	2.462	2.586	2.756	3.038	3.660
30	2.147	2.278	2.457	2.581	2.750	3.030	3.646
40	2.123	2.250	2.423	2.542	2.704	2.971	3.551
60	2.099	2.223	2.390	2.504	2.660	2.915	3.460
120	2.076	2.196	2.358	2.468	2.617	2.860	3.373
∞	2.054	2.170	2.326	2.432	2.576	2.807	3.290

The t -value with $\nu = 14$ degrees of freedom that leaves an area of 0.025 to the left, and therefore an area of 0.975 to the right, is

$$t_{0.975} = -t_{0.025} = -2.145$$

Example

Find $P(-t_{0.025} < T < t_{0.05})$.

Solution

Since $t_{0.05}$ leaves an area of 0.05 to the right, and $-t_{0.025}$ leaves an area of 0.025 to the left, we find a total area of $1 - 0.05 - 0.025 = 0.925$ between $-t_{0.025}$ and $t_{0.05}$.

Hence

$$P(-t_{0.025} < T < t_{0.05}) = 0.925.$$

Example

Find k such that $P(k < T < -1.761) = 0.045$ for a random sample of size 15 selected from a normal distribution with

$$T = \frac{\bar{X} - \mu}{S/\sqrt{n}}.$$

Solution

From Table A.4 we note that 1.761 corresponds to $t_{0.05}$ when $\nu = 14$. Therefore, $-t_{0.05} = -1.761$. Since k in the original probability statement is to the left of $-t_{0.05} = -1.761$, let $k = -t_{\alpha}$. Then, by using figure, we have

$$0.045 = 0.05 - \alpha, \text{ or } \alpha = 0.005.$$

Hence, from Table A.4 with $\nu = 14$,
 $k = -t_{0.005} = -2.977$ and $P(-2.977 < T < -1.761) = 0.045$.

Definition

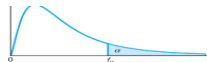
The statistic F is defined to be the ratio of two independent chi-squared random variables, each divided by its number of degrees of freedom.

Theorem 31

The random variable

$$F = \frac{U/\nu_1}{V/\nu_2}$$

where U and V are independent random variables having chi-squared distributions with ν_1 and ν_2 degrees of freedom, respectively, is the F -distribution with ν_1 and ν_2 degrees of freedom (d.f.).

Table A.6 Critical Values of the F -Distribution

v_2	$f_{0.05}(v_1, v_2)$								
	v_1								
	1	2	3	4	5	6	7	8	9
1	161.45	199.50	215.71	224.58	230.16	233.99	236.77	238.88	240.54
2	18.51	19.00	19.16	19.25	19.30	19.33	19.35	19.37	19.38
3	10.13	9.55	9.28	9.12	9.01	8.94	8.89	8.85	8.81
4	7.71	6.94	6.59	6.39	6.26	6.16	6.09	6.04	6.00
5	6.61	5.79	5.41	5.19	5.05	4.95	4.88	4.82	4.77
6	5.99	5.14	4.76	4.53	4.39	4.28	4.21	4.15	4.10
7	5.59	4.74	4.35	4.12	3.97	3.87	3.79	3.73	3.68
8	5.32	4.46	4.07	3.84	3.69	3.58	3.50	3.44	3.39
9	5.12	4.26	3.86	3.63	3.48	3.37	3.29	3.23	3.18
10	4.96	4.10	3.71	3.48	3.33	3.22	3.14	3.07	3.02
11	4.84	3.98	3.59	3.36	3.20	3.09	3.01	2.95	2.90
12	4.75	3.89	3.49	3.26	3.11	3.00	2.91	2.85	2.80
13	4.67	3.81	3.41	3.18	3.03	2.92	2.83	2.77	2.71
14	4.60	3.74	3.34	3.11	2.96	2.85	2.76	2.70	2.65
15	4.54	3.68	3.29	3.06	2.90	2.79	2.71	2.64	2.59
16	4.49	3.63	3.24	3.01	2.85	2.74	2.66	2.59	2.54
17	4.45	3.59	3.20	2.96	2.81	2.70	2.61	2.55	2.49
18	4.41	3.55	3.16	2.93	2.77	2.66	2.58	2.51	2.46
19	4.38	3.52	3.13	2.90	2.74	2.63	2.54	2.48	2.42
20	4.35	3.49	3.10	2.87	2.71	2.60	2.51	2.45	2.39
21	4.32	3.47	3.07	2.84	2.68	2.57	2.49	2.42	2.37
22	4.30	3.44	3.05	2.82	2.66	2.55	2.46	2.40	2.34
23	4.28	3.42	3.03	2.80	2.64	2.53	2.44	2.37	2.32
24	4.26	3.40	3.01	2.78	2.62	2.51	2.42	2.36	2.30
25	4.24	3.39	2.99	2.76	2.60	2.49	2.40	2.34	2.28
26	4.23	3.37	2.98	2.74	2.59	2.47	2.39	2.32	2.27
27	4.21	3.35	2.96	2.73	2.57	2.46	2.37	2.31	2.25
28	4.20	3.34	2.95	2.71	2.56	2.45	2.36	2.29	2.24
29	4.18	3.33	2.93	2.70	2.55	2.43	2.35	2.28	2.22
30	4.17	3.32	2.92	2.69	2.53	2.42	2.33	2.27	2.21
40	4.08	3.23	2.84	2.61	2.45	2.34	2.25	2.18	2.12
60	4.00	3.15	2.76	2.53	2.37	2.25	2.17	2.10	2.04
120	3.92	3.07	2.68	2.45	2.29	2.18	2.09	2.02	1.96
∞	3.84	3.00	2.60	2.37	2.21	2.10	2.01	1.94	1.88

Figure: Table A.6 Critical Values of the F-Distribution

Table A.6 (continued) Critical Values of the F -Distribution

v_2	$f_{0.05}(v_1, v_2)$									
	v_1									
	10	12	15	20	24	30	40	60	120	∞
1	241.88	243.91	245.95	248.01	249.05	250.10	251.14	252.20	253.25	254.31
2	19.40	19.41	19.43	19.45	19.45	19.46	19.47	19.48	19.49	19.50
3	8.79	8.74	8.70	8.66	8.64	8.62	8.59	8.57	8.55	8.53
4	5.96	5.91	5.86	5.80	5.77	5.75	5.72	5.69	5.66	5.63
5	4.74	4.68	4.62	4.56	4.53	4.50	4.46	4.43	4.40	4.36
6	4.06	4.00	3.94	3.87	3.84	3.81	3.77	3.74	3.70	3.67
7	3.64	3.57	3.51	3.44	3.41	3.38	3.34	3.30	3.27	3.23
8	3.35	3.28	3.22	3.15	3.12	3.08	3.04	3.01	2.97	2.93
9	3.14	3.07	3.01	2.94	2.90	2.86	2.83	2.79	2.75	2.71
10	2.98	2.91	2.85	2.77	2.74	2.70	2.66	2.62	2.58	2.54
11	2.85	2.79	2.72	2.65	2.61	2.57	2.53	2.49	2.45	2.40
12	2.75	2.69	2.62	2.54	2.51	2.47	2.43	2.38	2.34	2.30
13	2.67	2.60	2.53	2.46	2.42	2.38	2.34	2.30	2.25	2.21
14	2.60	2.53	2.46	2.39	2.35	2.31	2.27	2.22	2.18	2.13
15	2.54	2.48	2.40	2.33	2.29	2.25	2.20	2.16	2.11	2.07
16	2.49	2.42	2.35	2.28	2.24	2.19	2.15	2.11	2.06	2.01
17	2.45	2.38	2.31	2.23	2.19	2.15	2.10	2.06	2.01	1.96
18	2.41	2.34	2.27	2.19	2.15	2.11	2.06	2.02	1.97	1.92
19	2.38	2.31	2.23	2.16	2.11	2.07	2.03	1.98	1.93	1.88
20	2.35	2.28	2.20	2.12	2.08	2.04	1.99	1.95	1.90	1.84
21	2.32	2.25	2.18	2.10	2.05	2.01	1.96	1.92	1.87	1.81
22	2.30	2.23	2.15	2.07	2.03	1.98	1.94	1.89	1.84	1.78
23	2.27	2.20	2.13	2.05	2.01	1.96	1.91	1.86	1.81	1.76
24	2.25	2.18	2.11	2.03	1.98	1.94	1.89	1.84	1.79	1.73
25	2.24	2.16	2.09	2.01	1.96	1.92	1.87	1.82	1.77	1.71
26	2.22	2.15	2.07	1.99	1.95	1.90	1.85	1.80	1.75	1.69
27	2.20	2.13	2.06	1.97	1.93	1.88	1.84	1.79	1.73	1.67
28	2.19	2.12	2.04	1.96	1.91	1.87	1.82	1.77	1.71	1.65
29	2.18	2.10	2.03	1.94	1.90	1.85	1.81	1.75	1.70	1.64
30	2.16	2.09	2.01	1.93	1.89	1.84	1.79	1.74	1.68	1.62
40	2.08	2.00	1.92	1.84	1.79	1.74	1.69	1.64	1.58	1.51
60	1.99	1.92	1.84	1.75	1.70	1.65	1.59	1.53	1.47	1.39
120	1.91	1.83	1.75	1.66	1.61	1.55	1.50	1.43	1.35	1.25
∞	1.83	1.75	1.67	1.57	1.52	1.46	1.39	1.32	1.22	1.00

Table A.6 (continued) Critical Values of the F -Distribution

v_2	$f_{0.01}(v_1, v_2)$								
	v_1								
	1	2	3	4	5	6	7	8	9
1	4052.18	4999.50	5403.35	5624.58	5763.65	5858.99	5928.36	5981.07	6022.47
2	98.50	99.00	99.17	99.25	99.30	99.33	99.36	99.37	99.39
3	34.12	30.82	29.46	28.71	28.24	27.91	27.67	27.49	27.35
4	21.20	18.00	16.69	15.98	15.52	15.21	14.98	14.80	14.66
5	16.26	13.27	12.06	11.39	10.97	10.67	10.46	10.29	10.16
6	13.75	10.92	9.78	9.15	8.75	8.47	8.26	8.10	7.98
7	12.25	9.55	8.45	7.85	7.46	7.19	6.99	6.84	6.72
8	11.26	8.65	7.59	7.01	6.63	6.37	6.18	6.03	5.91
9	10.56	8.02	6.99	6.42	6.06	5.80	5.61	5.47	5.35
10	10.04	7.56	6.55	5.99	5.64	5.39	5.20	5.06	4.94
11	9.65	7.21	6.22	5.67	5.32	5.07	4.89	4.74	4.63
12	9.33	6.93	5.95	5.41	5.06	4.82	4.64	4.50	4.39
13	9.07	6.70	5.74	5.21	4.86	4.62	4.44	4.30	4.19
14	8.86	6.51	5.56	5.04	4.69	4.46	4.28	4.14	4.03
15	8.68	6.36	5.42	4.89	4.56	4.32	4.14	4.00	3.89
16	8.53	6.23	5.29	4.77	4.44	4.20	4.03	3.89	3.78
17	8.40	6.11	5.18	4.67	4.34	4.10	3.93	3.79	3.68
18	8.29	6.01	5.09	4.58	4.25	4.01	3.84	3.71	3.60
19	8.18	5.93	5.01	4.50	4.17	3.94	3.77	3.63	3.52
20	8.10	5.85	4.94	4.43	4.10	3.87	3.70	3.56	3.46
21	8.02	5.78	4.87	4.37	4.04	3.81	3.64	3.51	3.40
22	7.95	5.72	4.82	4.31	3.99	3.76	3.59	3.45	3.35
23	7.88	5.66	4.76	4.26	3.94	3.71	3.54	3.41	3.30
24	7.82	5.61	4.72	4.22	3.90	3.67	3.50	3.36	3.26
25	7.77	5.57	4.68	4.18	3.85	3.63	3.46	3.32	3.22
26	7.72	5.53	4.64	4.14	3.82	3.59	3.42	3.29	3.18
27	7.68	5.49	4.60	4.11	3.78	3.56	3.39	3.26	3.15
28	7.64	5.45	4.57	4.07	3.75	3.53	3.36	3.23	3.12
29	7.60	5.42	4.54	4.04	3.73	3.50	3.33	3.20	3.09
30	7.56	5.39	4.51	4.02	3.70	3.47	3.30	3.17	3.07
40	7.31	5.18	4.31	3.83	3.51	3.29	3.12	2.99	2.89
60	7.08	4.98	4.13	3.65	3.34	3.12	2.95	2.82	2.72
120	6.85	4.79	3.95	3.48	3.17	2.96	2.79	2.66	2.56
∞	6.63	4.61	3.78	3.32	3.02	2.80	2.64	2.51	2.41

Table A.6 (continued) Critical Values of the F -Distribution

v_2	$f_{0.01}(v_1, v_2)$									
	v_1									
	10	12	15	20	24	30	40	60	120	∞
1	6055.85	6106.32	6157.28	6208.73	6234.63	6260.65	6286.78	6313.03	6339.39	6365.86
2	99.40	99.42	99.43	99.45	99.46	99.47	99.47	99.48	99.49	99.50
3	27.23	27.05	26.87	26.69	26.60	26.50	26.41	26.32	26.22	26.13
4	14.55	14.37	14.20	14.02	13.93	13.84	13.75	13.65	13.56	13.46
5	10.05	9.89	9.72	9.55	9.47	9.38	9.29	9.20	9.11	9.02
6	7.87	7.72	7.56	7.40	7.31	7.23	7.14	7.06	6.97	6.88
7	6.62	6.47	6.31	6.16	6.07	5.99	5.91	5.82	5.74	5.65
8	5.81	5.67	5.52	5.36	5.28	5.20	5.12	5.03	4.95	4.86
9	5.26	5.11	4.96	4.81	4.73	4.65	4.57	4.48	4.40	4.31
10	4.85	4.71	4.56	4.41	4.33	4.25	4.17	4.08	4.00	3.91
11	4.54	4.40	4.25	4.10	4.02	3.94	3.86	3.78	3.69	3.60
12	4.30	4.16	4.01	3.86	3.78	3.70	3.62	3.54	3.45	3.36
13	4.10	3.96	3.82	3.66	3.59	3.51	3.43	3.34	3.25	3.17
14	3.94	3.80	3.66	3.51	3.43	3.35	3.27	3.18	3.09	3.00
15	3.80	3.67	3.52	3.37	3.29	3.21	3.13	3.05	2.96	2.87
16	3.69	3.55	3.41	3.26	3.18	3.10	3.02	2.93	2.84	2.75
17	3.59	3.46	3.31	3.16	3.08	3.00	2.92	2.83	2.75	2.65
18	3.51	3.37	3.23	3.08	3.00	2.92	2.84	2.75	2.66	2.57
19	3.43	3.30	3.15	3.00	2.92	2.84	2.76	2.67	2.58	2.49
20	3.37	3.23	3.09	2.94	2.86	2.78	2.69	2.61	2.52	2.42
21	3.31	3.17	3.03	2.88	2.80	2.72	2.64	2.55	2.46	2.36
22	3.26	3.12	2.98	2.83	2.75	2.67	2.58	2.50	2.40	2.31
23	3.21	3.07	2.93	2.78	2.70	2.62	2.54	2.45	2.35	2.26
24	3.17	3.03	2.89	2.74	2.66	2.58	2.49	2.40	2.31	2.21
25	3.13	2.99	2.85	2.70	2.62	2.54	2.45	2.36	2.27	2.17
26	3.09	2.96	2.81	2.66	2.58	2.50	2.42	2.33	2.23	2.13
27	3.06	2.93	2.78	2.63	2.55	2.47	2.38	2.29	2.20	2.10
28	3.03	2.90	2.75	2.60	2.52	2.44	2.35	2.26	2.17	2.06
29	3.00	2.87	2.73	2.57	2.49	2.41	2.33	2.23	2.14	2.03
30	2.98	2.84	2.70	2.55	2.47	2.39	2.30	2.21	2.11	2.01
40	2.80	2.66	2.52	2.37	2.29	2.20	2.11	2.02	1.92	1.80
60	2.63	2.50	2.35	2.20	2.12	2.03	1.94	1.84	1.73	1.60
120	2.47	2.34	2.19	2.03	1.95	1.86	1.76	1.66	1.53	1.38
∞	2.32	2.18	2.04	1.88	1.79	1.70	1.59	1.47	1.32	1.00

Theorem

Writing $f_{\alpha}(\nu_1, \nu_2)$ for f_{α} with ν_1 and ν_2 degrees of freedom, we have

$$f_{1-\alpha}(\nu_1, \nu_2) = \frac{1}{f_{\alpha}(\nu_2, \nu_1)}$$

Thus, the f -value with 6 and 10 degrees of freedom, leaving an area of 0.95 to the right, is $f_{0.95}(6, 10) = \frac{1}{f_{0.05}(10, 6)} = \frac{1}{4.06} = 0.246$.

Example

For an F -distribution, find

- (a) $f_{0.05}$ with $\nu_1 = 7$ and $\nu_2 = 15$;
- (b) $f_{0.05}$ with $\nu_1 = 15$ and $\nu_2 = 7$;
- (c) $f_{0.01}$ with $\nu_1 = 24$ and $\nu_2 = 19$;
- (d) $f_{0.95}$ with $\nu_1 = 19$ and $\nu_2 = 24$;
- (e) $f_{0.99}$ with $\nu_1 = 28$ and $\nu_2 = 12$.

Solution

(a) 2.71. (b) 3.51. (c) 2.92. (d) $1/2.11 = 0.47$. (e) $1/2.90 = 0.34$.