
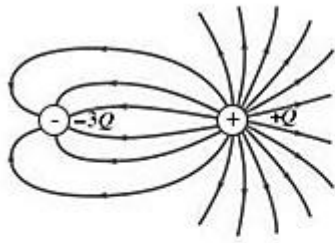


Chapter 23 Problems

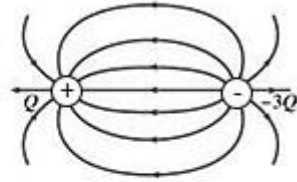
- 1) What is the net force and its direction that the charges at the vertices A and C of the right triangle ABC exert on the charge in vertex B?



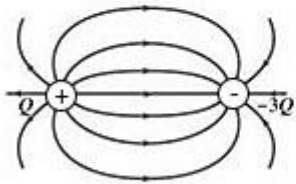
- 2) The distance between two charges $q_1 = +2\mu\text{C}$ and $q_2 = +6\mu\text{C}$ is 15.0 cm. Calculate the distance from charge q_1 to the points on the line segment joining the two charges where the electric field is zero.
- 3) Choose the correct picture of the electric field lines about two point charges, $+Q$ and $-3Q$, which are a distance apart.



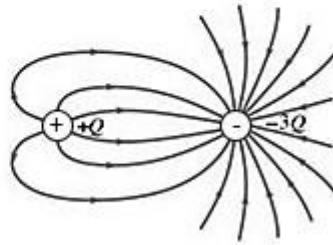
a.



b.



c.



d.